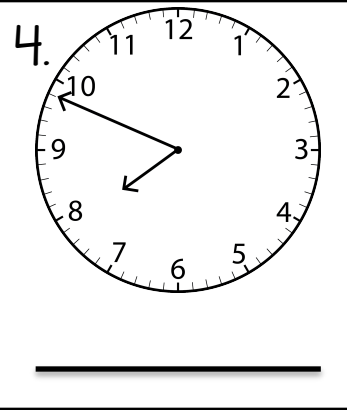
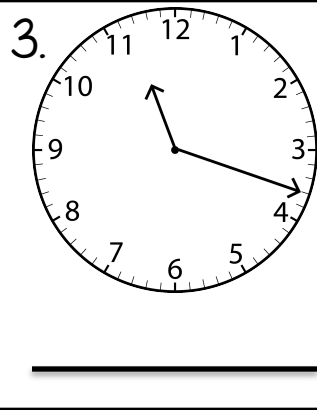
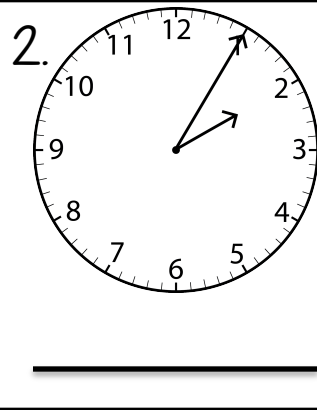
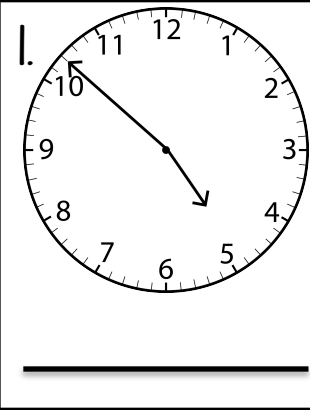


Name: _____ Date: _____

Grade 3: Telling Time and Elapsed Time Assessment

3.MD.1: I can tell and write time to the nearest minute and measure time intervals in minutes.

Directions: Read each clock and write the time in the space below.



Directions: Read each problem and find the solution. Show your work in the space provided. Be sure to label and circle your answer.

5. Kylie started cooking a casserole at 8:15 AM. The casserole finished cooking at 9:40 AM. How long did it take the casserole to cook?

6. Nicky's Mom put some cookies in the oven at 10:30 AM. The directions said to leave the cookies in the oven for 55 minutes. What time should the cookies be taken out of the oven?

Name: _____ Date: _____

Grade 3: Telling Time and Elapsed Time Assessment

3.MD.1: I can tell and write time to the nearest minute and measure time intervals in minutes.

7. Justin gets picked up from school at 2:12 PM. He gets home at 3:39 PM. How long did it take Justin to get home?

8. Aiden starts soccer practice at 3:35 PM. His practice lasts for 1 hour and 43 minutes. What time is Aiden's soccer practice done?