

# Going into Second Grade Summer Packet

To: Parents and Guardians

From: Second Grade Teachers



The summer before second grade is a growing and maturing time for every child. Parents can make a difference between a good adjustment and a struggle when second grade begins.

Charles Street School requires every child to complete and return the attached summer packet. Your child must return the completed packet to their teacher in September.

Here are some additional suggestions for the summer months:

- Take time to visit the local library.
- Review all of your 1<sup>st</sup> grade sight words.
- Encourage your child to be a writer and maintain a summer journal to highlight your summer adventures.
- Have your child practice oral reading for fluency and expression.
- Continue to practice addition and subtraction facts up to 20.

# SUMMER PACKET



Name: \_\_\_\_\_



Today, we are going to practice  
**punctuation.**

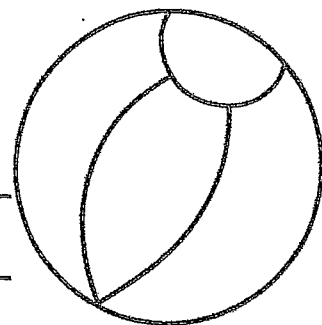
Day 1

Is it always sunny in the summer \_\_\_  
The summer is the warmest season \_\_\_  
I can't wait to jump in the cool pool \_\_\_  
Did you call the lifeguard to see if it's open \_\_\_  
I want to see my friends, but I am tired \_\_\_  
We are going to the beach this year \_\_\_  
How long until we need to put on our sunscreen \_\_\_  
Wow, I can't believe the beach is this warm \_\_\_

Now, write your own QUESTION.

---

---



Today, we are going to practice  
**missing addends.**

Day 2

$7 + \underline{\quad} = 14$

$10 + \underline{\quad} = 16$

$6 + \underline{\quad} = 13$

$4 + \underline{\quad} = 12$

$9 + \underline{\quad} = 17$

$11 + \underline{\quad} = 19$

$12 + \underline{\quad} = 19$


$9 + \underline{\quad} = 15$

$7 + \underline{\quad} = 12$

$4 + \underline{\quad} = 11$

$9 + \underline{\quad} = 18$

$5 + \underline{\quad} = 14$




Today, we are going to practice  
past tense.

Day 5

I will eat my sandwich at the picnic.


Rewrite  
these  
sentences  
in the past  
tense.

My mom will pack up the picnic basket.

Today, we are going to practice  
place value.

Day 6

71

Tens

Ones

58

Tens

Ones

93




Tens

Ones

26

Tens




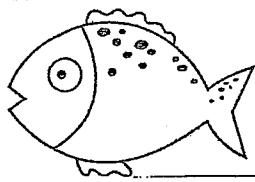
Ones



Today, we are going to practice **inflectional endings.**

Day 9


Word	-ed	-ing
play		
talk		
jump		
clean		



Today, we are going to practice **word problems.**

Day 10

My brother and I were looking for starfish on the beach. He found 17, but I only found 9. How many did we find in all?



My family collected 15 starfish all together. On the way home, we dropped 8 starfish. How many starfish did we have left?

\_\_\_\_\_ = \_\_\_\_\_

\_\_\_\_\_ = \_\_\_\_\_

Today, we are going to practice capitalization.

Day 13

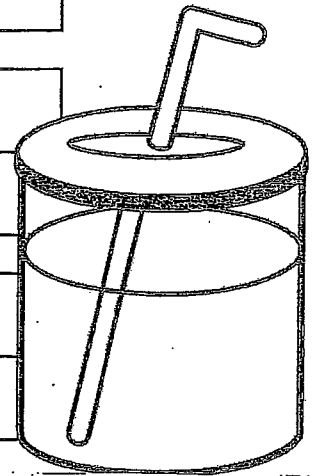
monday, july 3, 2015

destin beach, florida

sally's souvenir shop

disney world

Rewrite  
these  
correctly.



Today, we are going to practice subtraction.

Day 14

$$\begin{array}{r} 17 \\ -5 \\ \hline \end{array}$$

$$\begin{array}{r} 18 \\ -4 \\ \hline \end{array}$$

$$\begin{array}{r} 17 \\ -4 \\ \hline \end{array}$$

$$\begin{array}{r} 19 \\ -3 \\ \hline \end{array}$$

$$\begin{array}{r} 16 \\ -2 \\ \hline \end{array}$$

$$\begin{array}{r} 17 \\ -4 \\ \hline \end{array}$$

$$\begin{array}{r} 12 \\ -3 \\ \hline \end{array}$$

$$\begin{array}{r} 15 \\ -2 \\ \hline \end{array}$$

$$\begin{array}{r} 15 \\ -9 \\ \hline \end{array}$$

$$\begin{array}{r} 12 \\ -4 \\ \hline \end{array}$$

$$\begin{array}{r} 11 \\ -8 \\ \hline \end{array}$$


$$\begin{array}{r} 18 \\ -5 \\ \hline \end{array}$$

$$\begin{array}{r} 14 \\ -4 \\ \hline \end{array}$$

$$\begin{array}{r} 15 \\ -5 \\ \hline \end{array}$$

$$\begin{array}{r} 17 \\ -3 \\ \hline \end{array}$$

$$\begin{array}{r} 16 \\ -6 \\ \hline \end{array}$$



Today, we are going to practice **beginning blends.**

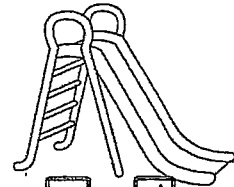
Day 17




im



eat




ide



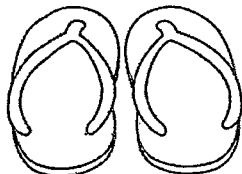
ab




ill



ink



ip op



am



oat

©Tobin, May 2015

Today, we are going to practice **fact fluency.**

Day 18

If you have a timer, time yourself. Solve these facts as fast as you can!

$$\begin{array}{r} 12 \\ -5 \\ \hline \end{array}$$

$$\begin{array}{r} 14 \\ +4 \\ \hline \end{array}$$

$$\begin{array}{r} 16 \\ -4 \\ \hline \end{array}$$

$$\begin{array}{r} 11 \\ +3 \\ \hline \end{array}$$

$$\begin{array}{r} 12 \\ -2 \\ \hline \end{array}$$

$$\begin{array}{r} 17 \\ -4 \\ \hline \end{array}$$

$$\begin{array}{r} 14 \\ +3 \\ \hline \end{array}$$

$$\begin{array}{r} 19 \\ -2 \\ \hline \end{array}$$

$$\begin{array}{r} 12 \\ +9 \\ \hline \end{array}$$

$$\begin{array}{r} 18 \\ -4 \\ \hline \end{array}$$

$$\begin{array}{r} 17 \\ +8 \\ \hline \end{array}$$


$$\begin{array}{r} 19 \\ -5 \\ \hline \end{array}$$

$$\begin{array}{r} 14 \\ +7 \\ \hline \end{array}$$

$$\begin{array}{r} 16 \\ -5 \\ \hline \end{array}$$

$$\begin{array}{r} 18 \\ +3 \\ \hline \end{array}$$

$$\begin{array}{r} 14 \\ -6 \\ \hline \end{array}$$





Today, we are going to practice compound words.

Day 21

Write the base words, then draw the base words.

<b>cupcake</b>		<b>birdhouse</b>	
↙	↘	↙	↘

©Tobin. May 2015

Today, we are going to practice partitioning shapes.


Day 22




Split this rectangle into equal fourths.  
Then, color one share.



Split this rectangle into equal halves.  
Then, color one share.



Split this circle into equal fourths.  
Then, color one share.



Split this circle into equal halves.  
Then, color one share.

Today, we are going to practice double digit subtraction.

Day 25

$$\begin{array}{r} 33 \\ - 20 \\ \hline \end{array}$$

$$\begin{array}{r} 72 \\ - 30 \\ \hline \end{array}$$

$$\begin{array}{r} 43 \\ - 20 \\ \hline \end{array}$$


$$\begin{array}{r} 52 \\ - 30 \\ \hline \end{array}$$

$$\begin{array}{r} 98 \\ - 60 \\ \hline \end{array}$$

$$\begin{array}{r} 38 \\ - 20 \\ \hline \end{array}$$

$$\begin{array}{r} 27 \\ - 20 \\ \hline \end{array}$$

$$\begin{array}{r} 39 \\ - 20 \\ \hline \end{array}$$



©Tobin, May 2015

Today, we are going to practice making words.

Day 26

**summer vacation**

<b>summer vacation</b>			

Today, we are going to practice  
double digit addition.

Day 29

$$\begin{array}{r} 33 \\ + 20 \\ \hline \end{array}$$

$$\begin{array}{r} 72 \\ + 30 \\ \hline \end{array}$$

$$\begin{array}{r} 43 \\ + 20 \\ \hline \end{array}$$

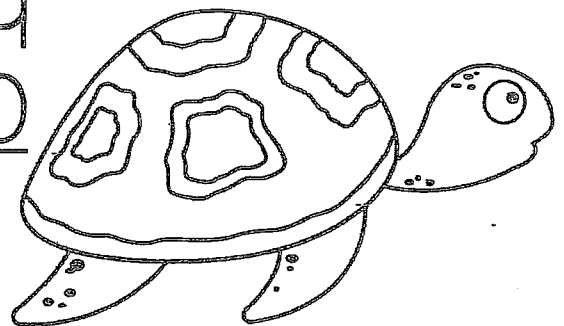
$$\begin{array}{r} 52 \\ + 30 \\ \hline \end{array}$$

$$\begin{array}{r} 98 \\ + 60 \\ \hline \end{array}$$

$$\begin{array}{r} 38 \\ + 20 \\ \hline \end{array}$$

$$\begin{array}{r} 27 \\ + 20 \\ \hline \end{array}$$

$$\begin{array}{r} 39 \\ + 20 \\ \hline \end{array}$$



©Tobin, May 2015

Today, we are going to practice  
nouns and verbs.


Day 30

Circle the nouns.  
Underline the verbs.

Mom told me that sunscreen helps your body stay healthy. The sun can burn my skin.

Sunscreen helps prevent this. So, I will apply it every eighty minutes.

This will keep my skin healthy.



©Tobin, May 2015

1 Mark the word that has the same vowel sound as *hound*.

- (A) brown      (B) would      (C) boat

2 Mark the word that has the same beginning sound as *chest*.

- (A) crest      (B) chase      (C) ship

3 Mark the word that has the same ending sound as *bend*.


- (A) ant      (B) ten      (C) find

4 Mark the sight word that completes the sentence.

Abdul went home \_\_\_ he was sick.

- (A) always      (B) why      (C) because

5



Title: \_\_\_\_\_

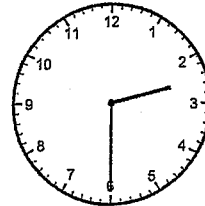
Author: \_\_\_\_\_

6 What is the value of the underlined digit? 9 Write the time.

91

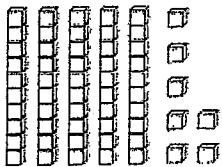
(A) 9

(B) 90



\_\_\_\_\_

7 Write the number of blocks as tens and ones.



\_\_\_\_\_ tens

\_\_\_\_\_ ones

10 Diego buys 13 stamps. He uses 4 of the stamps. How many stamps does he have left?

8	$\begin{array}{r} 42 \\ + 27 \\ \hline \end{array}$	$\begin{array}{r} 78 \\ - 35 \\ \hline \end{array}$	$\begin{array}{r} 26 \\ + 12 \\ \hline \end{array}$
---	---	---	---

Answer: \_\_\_\_\_

1 Mark the word that rhymes with *bear*.

- (A) near
- (B) here
- (C) chair

2 Mark the word that rhymes with *rink*.

- (A) pink
- (B) bring
- (C) trick

3 Mark the word that rhymes with *flag*.


- (A) laugh
- (B) bag
- (C) have

Look at each pair of homophones. Draw a line from each picture to its matching word.

4



• ferry




• fairy

5



• bare



• bear

6 Find the pattern. Write the missing numbers.

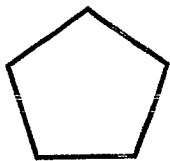
60, 70, \_\_\_\_\_, 90, 100, \_\_\_\_\_, 120

9 Write how much money in all.



\_\_\_\_\_

7 What is the name of the shape?



- (A) triangle
- (B) pentagon
- (C) hexagon

10 Use >, <, or, = to fill in each circle.

77 ○ 87

56 ○ 49

43 ○ 34

31 ○ 31

8	20	50	80
	- 10	+ 40	- 60
	_____	_____	_____

1 Circle the base word in each word.

powerful      retake      cloudy

2 Circle the suffix in each word.

joyful      planted      listener

3 Circle the prefix in each word.

dislike      unkind      unable

Read the first sentence. Then write the underlined verb in past tense to complete the second sentence.

4 Ashley and Noel walk through the library.

Ashley and Noel \_\_\_\_\_ through the library.

5 My dad grills hamburgers.

My dad \_\_\_\_\_ hamburgers.

6 Write the missing number in each box.

$14 - \square = 6$

$11 - \square = 7$

9 Write the numbers in order from least to greatest.

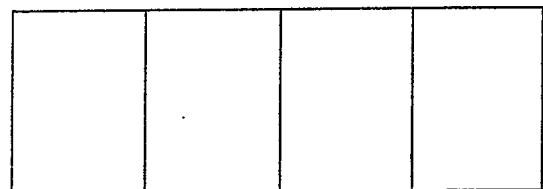
87    78    64    90

7 Chang buys a book for \$3 and a toy car for \$4.

How much did he spend? \_\_\_\_\_

If he paid with \$20, how much change will he get back? \_\_\_\_\_

10 Shade  $\frac{3}{4}$  of the rectangle.



8  $17 - 8 =$  \_\_\_\_\_  $6 + 5 =$  \_\_\_\_\_

1 Draw a line to match the two words to its contraction.

- |            |          |
|------------|----------|
| do not ●   | ● she'll |
| we are ●   | ● don't  |
| she will ● | ● we're  |

2 Write the contraction on the line for each set of words.

I am = \_\_\_\_\_

we have = \_\_\_\_\_

4 Complete the sentence by marking the word that is spelled correctly.

We \_\_\_ try our best.

- (A) allways      (B) always      (C) alway

5 Write the plural form of the given word.



zebra


\_\_\_\_\_

3 Rewrite the sentence with correct capitalization, spelling, and punctuation.

my aunt is visiting for thanksgiving

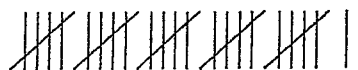


6 Write the number of vertices of a rectangular prism.



\_\_\_\_\_ vertices

9 Caillou draws one tally mark for each rabbit he sees at the park. Look at his tally marks. Write the number of rabbits he sees.



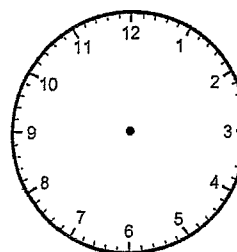
\_\_\_\_\_ rabbits

7 Skip count to write the total number of strawberries.



\_\_\_\_\_ strawberries

10 Draw clock hands to show 11:45.



8	20	10
	30	43
	+ 10	+ 32
	_____	_____


## The Greedy Dog

One day, Dog walked through the woods to look for food. It must have been his lucky day because he found a big bone. Dog quickly grabbed it and said to himself, "I'm going to have the best dinner all to myself!"

Dog raced through the woods back towards his house. On his way, Little Dog stopped him to see if she could have a bite of his bone. Dog replied, "No way! I'm very hungry and need to eat this bone all by myself!" Little Dog walked away slowly with her head down.

Dog ran past many trees and jumped over several rocks. Soon Dog came to a bridge that crossed over a calm river. He stood on the bridge and looked down into the water. There he saw a dog with an even larger bone! He thought, "Now I'll have two bones for dinner!"

He tried to get the bone he saw in the water. When he opened his mouth to grab it, Dog's bone fell into the water. He watched his bone go down the river. Now Dog was all wet and had nothing to eat for dinner.





Read *The Greedy Dog*. Then mark the best answer for each question.

1 What is the setting of the story?

- (A) at the park
- (B) in the woods
- (C) in dog's house

4 How does Dog lose his dinner?

- (A) He hurt his paw.
- (B) He drops his bone in the river.
- (C) He doesn't have any friends.

2 Who is the main character in the story?

- (A) bone
- (B) Little Dog
- (C) Dog

5 What does Dog see that causes him to lose his dinner? Write your answer using complete sentences.

---

---

---

---


---

---

3 Why won't Dog share his bone with Little Dog?

- (A) He wants the bone all to himself.
- (B) Little Dog is mean to him.
- (C) He doesn't have time to stop.

6 Melanie finds 1 dime, 3 nickels and 1 penny under the couch cushions. How much money does she find in all? Use the picture graph to answer #9 and #10.



Answer: \_\_\_\_\_

9 How many children chose strawberry?

\_\_\_\_\_

7 10 more than 37 is \_\_\_\_\_.

10 less than 37 is \_\_\_\_\_.

10 How many more children chose vanilla than chocolate?

\_\_\_\_\_

15 - 7 = \_\_\_\_\_      10 + 9 = \_\_\_\_\_

12 - 9 = \_\_\_\_\_      8 + 6 = \_\_\_\_\_