

NTI DAY 8



Harrison County Schools

Name: _____

Grade: 2nd

Teacher: _____

Complete within 2 weeks of returning to school.

NTI Day 8

A. Option 1: Complete the Reading and Math Packet attached.

OR

Option 2: Technology Component

- *Log into Exact Path.

- *Work for 30 minutes in reading.

- *Work for 30 minutes in math.

Exact Path is new to our district. Teachers will observe and monitor student activity.

B. Complete the Music assignment.

How to tell the difference between ...

FACT

A FACT is a true statement that you can prove.

Key Words:

Dates
Numbers
Science
Historical
Events
Non-Fiction

Opinion

An OPINION is someone's idea or feeling about something.

Key Words:

Prefer
Think
Feel
Believe
-er words
-est words

Write F for fact and O for opinion.

Snow looks
pretty.


Snowflakes
are amazing!

The
weatherman
says it will
snow today.


It is fun to play
in the snow.

It is more fun to
snowboard than
ski.


It's more fun
in the snow
than at the
beach.




Snow looks
white.




Snowflakes
are all
different.




Snow falls
from the
clouds.



Snowstorms with
high winds are
called blizzards.



Fluffy snow is
often called
'powder'.



Snow is cold,
like ice.

Name: _____

Date: _____

YEAR 2 MATHS



1. Complete the following number sequences.

2, 4, __, __, 10, __	__, __, 30, 35, __, __
__, 90, __, __, 120, __	__, __, 9, 12, __, 18

2. Order the numbers from least to greatest.

435, 401, 398 __, __, __	355, 487, 369 __, __, __
950, 321, 576 __, __, __	1020, 1006, 1213 __, __, __

3. What number comes before and after?

__, 632, __	__, 100, __
__, 999, __	__, 1099, __

4. Write the correct symbol to show greater than and less than (< or >).

632 <input type="text"/> 321	732 <input type="text"/> 801	972 <input type="text"/> 899	202 <input type="text"/> 209
------------------------------	------------------------------	------------------------------	------------------------------

5. Complete the following number sentences.

$14 + 6 =$	$18 - 3 =$	$8 + 7 =$
$7 - 7 =$	$50 + 30 =$	$100 - 20 =$
$72 - 4 =$	$23 + 43 =$	$34 - 13 =$
$123 + 324 =$	$323 - 111 =$	$748 + 231 =$

Name: _____

Date: _____

Solve each problem.

Draw the hands on the analog clock to match the digital time.



10:30

Draw hands on the analog clock to match the digital time.



1:30


Solve. Show a strategy.

$$20 + 10 + 37 + 11 = \underline{\hspace{2cm}}$$

Solve. Show a strategy.

$$5 + 50 + 12 + 22 = \underline{\hspace{2cm}}$$

Jayden caught 78 snowflakes. 17 of them melted. How many snowflakes did not melt? Show a strategy and solve.



Name _____

Class **NTI Music - 2nd****ACTIVITY MASTER 35****Instrument Parts**

Each instrument is missing one of its parts.
Draw a line from the instrument to the missing part.

