

NTI DAY 33

April 29, 2020



Harrison County Schools

Name: _____

Grade: 1st

Teacher: _____

First Grade NTI Day #33

Reading/Writing

Amazing Animals

1. WRITE ABOUT READING

Which is the most amazing animal in the story? Have your student draw a picture of it and label its body parts. Use facts from the story to write reasons why this animal is amazing. Tell how special body parts help that animal.

2. Review the vocabulary words in the story.

Phonics

Complete the practice spelling page using the -r controlled words. Afterwards, have your student practice reading words from the **Words to Practice** page.

Math- Fractions

Complete the **Lesson** with your student. Afterwards, your student should be able to complete the **Independent Practice** page.

Specials: Library

Write About Reading

Handwriting practice lines with four rows. Each row consists of a solid top line, a dashed middle line, and a solid bottom line. Each row is preceded by a small cartoon character icon: a sun, a hand holding a pencil, a pencil, and a book.

Spelling Words with *r*-Controlled Vowels *er, ir, ur*

Amazing Animals
Spelling: Words with *er, ir, ur*

Spelling Words

her
fern
girl
sir
stir
bird
fur
hurt
turn
third

Write the Spelling Word that fits each clue.

1. Opposite of **boy**

2. Goes with **pain**

3. What a bear has

4. Goes with **three**

5. Opposite of **him**

6. An animal


Words to Practice

fern	bird	curl
clerk	shirt	curd
her	stir	hurt
herd	girl	blurt
jerk	third	purse
verb	first	nurse
serve	chirp	burn
nerve	dirt	curb
**swerve	**quirky	**sturdy
**perfect	**confirm	**disturb

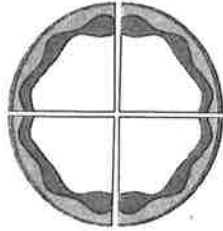
****Challenge words**

Lesson NT1 #33

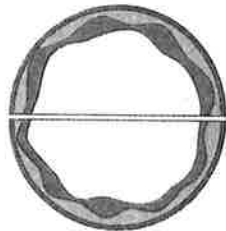
These pizzas are the same size.




This pizza is cut into 4 equal shares. Each share is one fourth of the whole.



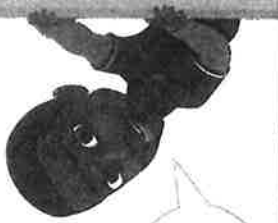
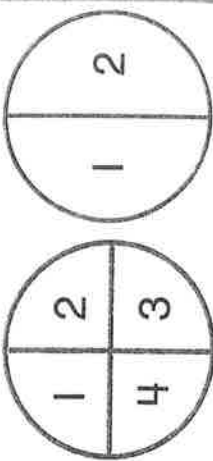
This pizza is cut into 2 equal shares. Each share is one half of the whole.



The pizza with fourths has smaller shares.







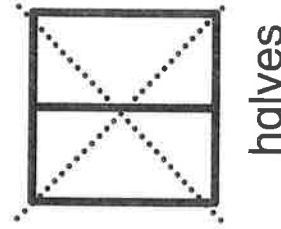
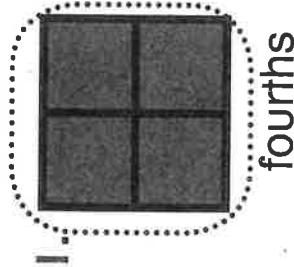
The pizza with halves has fewer shares.



Do You Understand?


Show Me! David has a sandwich. Is half of the sandwich more or less food than one fourth of the sandwich? Explain.

☆ **Guided Practice** Circle the shape that has more equal shares. Put an X on the shape that has larger equal shares.




Independent Practice

Divide each shape in halves



Divide each shape in fourths



Circle the shape with more shares.

1.		
2.		
3.		
4.		

Put an X on the shape with smaller shares.

1.		
2.		
3.		
4.		

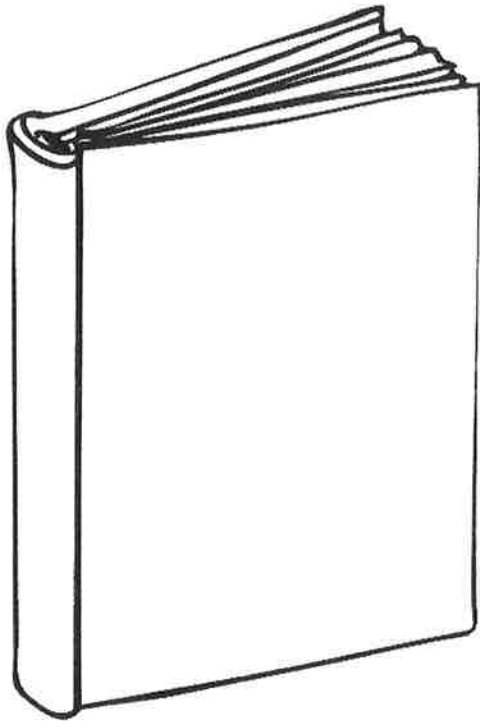
Name: _____

NTI Day 33
Library Activity for 1st Grade

Draw a picture on the book cover and write about the best book you have read in 1st grade!

The Best Book I Read in 1st Grade

Title: _____



Write 1-2 sentences about why this book is the best.
