


NTI DAY 30



Harrison County Schools

Name: _____

Grade: 2nd

Teacher: _____

Complete within 2 weeks of returning to school.

Second Grade

NTI Day 30

Please check off as you complete:

Reading

- Read "Desert Plants"
- Complete comprehension questions
- Complete 10 grammar questions

Writing

- Complete writing assignment

Math

- Number of the Day
- Math Facts
- Math Assessment

A google site has been created with many helpful videos to assist you when completing your work. You can reach this site by going to:

<https://sites.google.com/harrison.kyschools.us/2nd-grade-hc-links-21-30/2nd-grade-hc-nti-21-30-links>

Please feel free to contact any second grade teacher for further assistance.

NTI #30: Desert Plants

6. What part of a cactus is sharp?

7. What types of roots do desert trees have?

8. How does one special type of desert bush protect itself from animals?

9. What does the word "dormant" mean?

10. What does being dormant do to help desert plants?

Grammar

Answer Numbers 1 through 10. Choose the best answer for each question.

- 1 Which word BEST completes the sentence below?

Miss Ward _____ us
apples from her tree.

- (A) gave
- (B) give
- (C) gived

- 2 Which word BEST completes the sentence below?

Sometimes I _____ "no"
when I mean "yes."

- (F) said
- (G) say
- (H) sayed

- 3 Which word BEST completes the sentence below?

Yesterday, Rudy _____
a meat pie for lunch.

- (A) ate
- (B) eat
- (C) eated

- 4 Which word BEST completes the sentence below?

Who _____ the last
piece of cake?

- (F) take
- (G) taked
- (H) took

- 5** Which word BEST completes the sentence below?

**Our neighbors _____
us pears from their tree
each fall.**

- (A) gaved
- (B) give
- (C) gived

- 6** Which word BEST completes the sentence below?

**Byron hardly _____ a
word in class today.**

- (F) said
- (G) say
- (H) sayed

- 7** Which word BEST completes the sentence below?

**Every year, we _____
our dog for a checkup.**

- (A) take
- (B) taked
- (C) tooked

- 8** Which word BEST completes the sentence below?

**Jamie and Sally each
_____ a banana
every day.**

- (F) ated
- (G) eat
- (H) eated

From Seed to Plant

Grammar

- 9 Which word BEST completes the sentence below?

**Earlier today, our teacher
_____ us a test.**

- (A) gave
- (B) give
- (C) gived

- 10 Which word BEST completes the sentence below?

**Last week, I _____ my
brother to a show.**


- (F) take
- (G) taked
- (H) took



Name _____

NTI Day 30- Writing

After reading Desert Plants, write 2 facts and 1 opinion about desert plants.



Illustrate

Name: _____

Date: _____

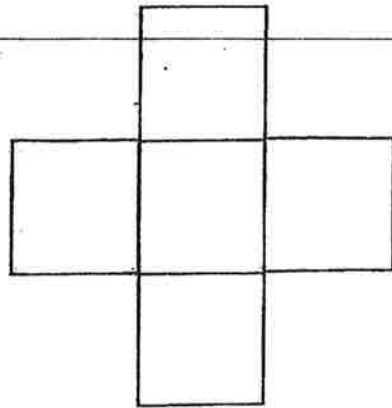
Number of the Day:

Word form: _____

342

Expanded Form:

_____ + _____ + _____ = _____



+100:

Even
or
Odd

-100:

>

<

Draw It:

Addition Problem:

_____ + _____ = _____

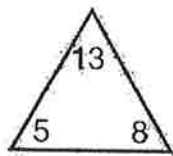
Subtraction
Problem:

_____ - _____ = _____

Build with Money:

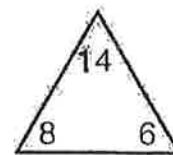
Complete Each Family of Facts

1)



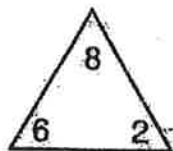
$$\begin{array}{rcl} \boxed{5} & + & \boxed{8} = \boxed{13} \\ \boxed{8} & + & \boxed{5} = \boxed{13} \\ \boxed{13} & - & \boxed{8} = \boxed{5} \\ \boxed{13} & - & \boxed{5} = \boxed{8} \end{array}$$

4)



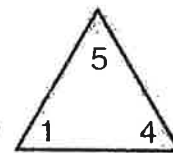
$$\begin{array}{rcl} \boxed{8} & + & \boxed{6} = \boxed{14} \\ \boxed{6} & + & \boxed{8} = \boxed{14} \\ \boxed{14} & - & \boxed{6} = \boxed{8} \\ \boxed{14} & - & \boxed{8} = \boxed{6} \end{array}$$

2)



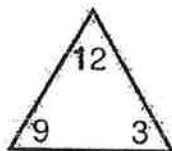
$$\begin{array}{rcl} \boxed{6} & + & \boxed{2} = \boxed{8} \\ \boxed{2} & + & \boxed{6} = \boxed{8} \\ \boxed{8} & - & \boxed{2} = \boxed{6} \\ \boxed{8} & - & \boxed{6} = \boxed{2} \end{array}$$

5)



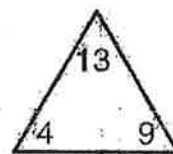
$$\begin{array}{rcl} \boxed{1} & + & \boxed{4} = \boxed{5} \\ \boxed{4} & + & \boxed{1} = \boxed{5} \\ \boxed{5} & - & \boxed{4} = \boxed{1} \\ \boxed{5} & - & \boxed{1} = \boxed{4} \end{array}$$

3)



$$\begin{array}{rcl} \boxed{9} & + & \boxed{3} = \boxed{12} \\ \boxed{3} & + & \boxed{9} = \boxed{12} \\ \boxed{12} & - & \boxed{3} = \boxed{9} \\ \boxed{12} & - & \boxed{9} = \boxed{3} \end{array}$$

6)



$$\begin{array}{rcl} \boxed{4} & + & \boxed{9} = \boxed{13} \\ \boxed{9} & + & \boxed{4} = \boxed{13} \\ \boxed{13} & - & \boxed{9} = \boxed{4} \\ \boxed{13} & - & \boxed{4} = \boxed{9} \end{array}$$

1. Chen has these coins.

How much money does Chen have?


Count on to find the total.



_____ cents

3. Nancy has 31¢.

Which coins could she have?
Choose all that apply.



ast

2. Ellen has 4 coins.

The total value is 46¢.

She has 1 quarter, 1 dime,
and 1 penny.

Which shows her fourth coin?



(A) (B) (C) (D)


4. George has quarters, dimes, and nickels.
Show all the ways he can make 25¢. Use
tally marks.

Circle the way that uses the least number
of coins.

Ways to Show 25¢

Quarter	Dime	Nickel	Total

5. Mr. Zink has the dollar bills shown below.



How many dollars does Mr. Zink have?

- \$36 \$31 \$26 \$5
 (A) (B) (C) (D)

6. Claire has two \$20 bills, two \$5 bills, and three \$1 bills. How much more money does Claire need to buy a bike that costs \$89? Explain.

What bills can you use to show how much money Claire needs?

7. Kay has saved \$30.

Show three different ways to make \$30.

Use tally marks in the table at the right.

Circle the way that uses the least number of bills.

Ways to Show \$30			
\$20 Bill	\$10 Bill	\$5 Bill	Total

8. Sandy wakes up in the morning at the time shown on the clock.



What time does Sandy wake up?

- ☐ A 5:10 a.m. ☐ C 5:10 p.m.
☐ B 6:10 a.m. ☐ D 6:10 p.m.

10. The clock shows the time that Holly leaves for school.

It takes 15 minutes to walk to school.

At what time will Holly arrive at school?

Choose all that apply.

- ☐ half past 7
☐ quarter past 8
☐ 30 minutes after 8
☐ half past 8



9. Sara's baseball game starts at the time shown on the clock.



Is this the time her game starts?


Choose Yes or No.

- 45 minutes after 4 ☐ Yes ☐ No
 15 minutes before 5 ☐ Yes ☐ No
 quarter to 4 ☐ Yes ☐ No
 quarter to 5 ☐ Yes ☐ No

11. The first clock shows the time the sun rises.

Write the same time on the second clock.

Then circle a.m. or p.m.



a.m. p.m.


12. Look at the time on the first clock.
What time will it be in 10 minutes?
Write that time on the second clock.



13. Circle a.m. or p.m. to tell when you would do each activity.

Watch the sunset at 7:40.	a.m.	p.m.
Take a music lesson after school.	a.m.	p.m.
Brush your teeth before school.	a.m.	p.m.
Eat breakfast at 6:45.	a.m.	p.m.

14. Draw lines to match the time on each clock in the first row to the same time shown in the second row.



➤ Internet Safety, It Rules! ≡

by Jenny Pritchett

We need to be safe
Whenever we're online
So we follow these rules
To have a good time!

1


Always ask
your parents first!

2

Only talk to
people you know!

3

Stick to sites
just right for you!



And we'll be safe
Wherever we go!



PRIVACY & SECURITY

We care about
everyone's privacy.

commonsense.org/education


Shareable with attribution for noncommercial use. No remixing permitted.



Pause & Think Moment

NAME _____

Draw a picture of yourself following one of the three Internet Safety rules we learned today.



Write a word or sentence to explain your picture.



PRIVACY & SECURITY

**We care about
everyone's privacy.**

commonsense.org/education

Shareable with attribution for noncommercial use. Remixing is permitted.

