


NTI DAY 28



Harrison County Schools

Name: _____

Grade: 2nd

Teacher: _____

Complete within 2 weeks of returning to school.

Second Grade

NTI Day 28

Please check off as you complete:

Reading

- ☐ Read "~~Super Soil~~" *"Life Cycle of a Tree"*
- ☐ Complete Comprehension questions
- ☐ Complete "Cumulative Review" worksheet

Writing

- ☐ Complete writing assignment

Math

- ☐ Number of the Day
- ☐ Math Facts
- ☐ Math Lesson

A google site has been created with many helpful videos to assist you when completing your work. You can reach this site by going to:

<https://sites.google.com/harrison.kyschools.us/2nd-grade-hc-links-21-30/2nd-grade-hc-nti-21-30-links>

Please feel free to contact any second grade teacher for further assistance.

NTI #28: ~~Super Soil~~ "Life Cycle of a Tree"

6. Name two things that roots get from the soil.

7. Why are branches important to a tree?

8. How are roots and branches ALIKE?

9. What role does a tree trunk play in protecting the whole tree?

10. Name a few different types of trees that you know.

Cumulative Review

From Seed to Plant
Phonics: Cumulative Review

Read each question. Make a word that answers each question by choosing a word from the box and adding the suffix **-y**, **-ly**, or **-ful** to it.

Word Bank

hand
skill

rock
bump

neat

Which word describes . . .

1. a place with rocks? _____
2. someone with a skill? _____
3. working in a neat way? _____
4. an amount held in a hand? _____
5. a road with bumps? _____

Add **-y**, **-ly**, or **-ful** to the word in bold print so that the sentence makes sense.



6. The kitten is very **play**. _____
7. She walks soft across the tile. _____
8. She gets sleep in the daytime. _____

Name _____

NTI Day 28- Writing

In your own words, explain a plant and animal partnership.



Illustrate

Name: _____

Date: _____

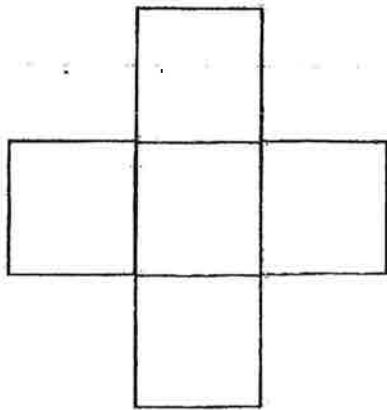
Number of the Day:

Word form: _____

892

Expanded Form:

_____ + _____ + _____ = _____



+100:

-100:

Even
or
Odd

>

<

Draw It:

Addition Problem:

_____ + _____ = _____

Subtraction Problem:

_____ - _____ = _____

Build with Money:

Teacher : _____

Date : _____

$$\begin{array}{r} 3 \\ + 2 \\ \hline \end{array}$$

$$\begin{array}{r} 2 \\ + 4 \\ \hline \end{array}$$

$$\begin{array}{r} 9 \\ + 6 \\ \hline \end{array}$$

$$\begin{array}{r} 2 \\ + 3 \\ \hline \end{array}$$

$$\begin{array}{r} 8 \\ + 2 \\ \hline \end{array}$$

$$\begin{array}{r} 1 \\ + 8 \\ \hline \end{array}$$

$$\begin{array}{r} 0 \\ + 2 \\ \hline \end{array}$$

$$\begin{array}{r} 5 \\ + 2 \\ \hline \end{array}$$

$$\begin{array}{r} 5 \\ + 8 \\ \hline \end{array}$$

$$\begin{array}{r} 0 \\ + 2 \\ \hline \end{array}$$

$$\begin{array}{r} 1 \\ + 4 \\ \hline \end{array}$$

$$\begin{array}{r} 8 \\ + 7 \\ \hline \end{array}$$

$$\begin{array}{r} 9 \\ + 5 \\ \hline \end{array}$$

$$\begin{array}{r} 2 \\ + 4 \\ \hline \end{array}$$

$$\begin{array}{r} 2 \\ + 8 \\ \hline \end{array}$$


You can use the terms **a.m.** and **p.m.** to tell about time.

Use **a.m.**

for morning times. I wake up at 8 a.m.

Use **p.m.** for

afternoon or evening times. I go to bed at 8 p.m.



I eat breakfast at:



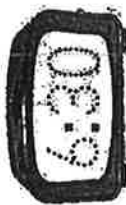
a.m. p.m.

I eat lunch at school at:



a.m. p.m.

I eat dinner with my family at:



a.m. p.m.

Do You Understand?

Show Me! What might you be doing at 6:15 a.m.? At 6:15 p.m.?

☆ Guided Practice

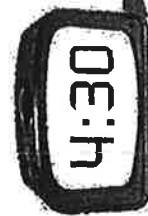
Complete the clocks so both clocks show the same time. Then circle a.m. or p.m. to tell when you would do each activity.

1. Ride the bus to school



a.m. p.m.

2. Do your homework




a.m. p.m.

★ Independent Practice

Complete the clocks so both clocks show the same time.
Circle a.m. or p.m. to tell when you would do each activity.

3. Take the bus home
from school




a.m. p.m.

4. Walk the dog before
breakfast



a.m. p.m.

5. Read a book before
bedtime




a.m. p.m.

6. Take swimming lessons
on Saturday morning



a.m. p.m.

7. Watch a movie on
Friday night



a.m. p.m.

8. Go to a party on
Saturday afternoon



a.m. p.m.

9. **Higher Order Thinking** Jen and Maria have dance lessons at
the time shown on the clock.

Write the time two different ways. Is it a.m. or p.m.? Explain.



In the library, we read both **fiction** and **nonfiction** books. Fiction means the book contains a made up story, and nonfiction means the book contains true facts. **Today, read a nonfiction book and complete the activity below.** If you don't have a nonfiction book at home, there are many great nonfiction read alouds on YouTube!

NON-FICTION BOOK REPORT

NEW WORD I LEARNED

WORD: _____

DEFINITION: _____

BOOK TITLE & AUTHOR

SUBJECT

THE 3 MOST INTERESTING THINGS I LEARNED...

1. _____

2. _____

3. _____

BACKGROUND KNOWLEDGE

(WHAT I KNEW BEFORE READING THIS BOOK)

1 QUESTION I STILL HAVE...

CAPTION