

# NTI DAY 9



Harrison County Schools

Name: \_\_\_\_\_

Grade: 2<sup>nd</sup>

Teacher: \_\_\_\_\_

**Complete within 2 weeks of returning to school.**

## NTI Day 9

A. Option 1: Complete the Reading and Math Packet attached.

OR

Option 2: Technology Component

- \*Log into Exact Path.

- \*Work for 30 minutes in reading.

- \*Work for 30 minutes in math.

Exact Path is new to our district. Teachers will observe and monitor student activity.

B. Complete the Practical Living/Career Studies assignment.

Name: \_\_\_\_\_

Directions: Read the story, then answer the questions below.


## POLAR BEARS

Polar bears are beautiful, strong animals that live in areas with cold temperatures. Most polar bears live in the Arctic, where they make homes on the sea ice. This makes them different than most other bears, who make their homes in forests and on mountains.

Polar bears prey mostly on ringed and bearded seals. Polar bears can weigh up to 1,200 pounds. They are considered the largest bears, although brown bears are very close in size and weight.

Female polar bears usually have two cubs at a time. Polar bear cubs live with their mother for about 2 ½ years. During this time, they learn how to hunt and survive in the freezing environment.

Polar bears are considered a threatened species. This means scientists are worried about their survival in the wild. The biggest threat to polar bears is global warming. Global warming is causing the ice in the Arctic to melt faster than normal. Many scientists are looking for ways to save these wonderful creatures.



1. Where do polar bears live?

---

---

---

2. Why do polar cubs stay with their mom for about 2 ½ years?

---

---

---

3. Why are polar bears considered a threatened species?

---

---

---

---

4. Write a sentence about polar bears using 3 adjectives of your own.

---

---

---

---

Complete the table:

|                   |  |
|-------------------|--|
| Diet:             |  |
| Weight:           |  |
| Interesting fact: |  |

Name \_\_\_\_\_

Write the correct word in box.



POLAR BEAR  
PREFIXES

not real

to build  
again

to pay  
before

to make  
again

do not  
like

not able

to heat  
before

do not  
trust

preheat

remake

unable

dislike

prepay

rebuild

unreal


distrust

Name: \_\_\_\_\_

Date: \_\_\_\_\_

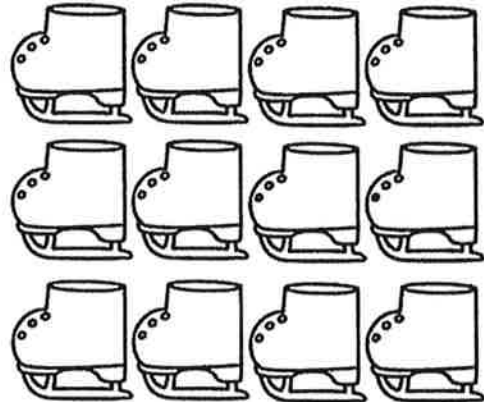
# Winter Arrays

Directions  
Write the number of rows and columns under each array.




Rows: \_\_\_\_\_

Columns: \_\_\_\_\_




Rows: \_\_\_\_\_

Columns: \_\_\_\_\_



Rows: \_\_\_\_\_

Columns: \_\_\_\_\_



Rows: \_\_\_\_\_

Columns: \_\_\_\_\_

2.OA.4 Use addition to find the total number of objects arranged in rectangular arrays with up to 5 rows and 5 columns.

809

890

First, look at the hundreds place, then the tens, and then the ones. Because 9 tens is more than 0 tens, 890 is more than 809.

Circle the number that is more.

1. 434      334

3. 823      832

5. 120      210

7. 612      621

2. 567      765

4. 790      709

6. 874      478

8. 909      908

Circle the number that is less.

9. 119      191

11. 812      810

13. 680      608

15. 218      219

10. 435      345

12. 923      933

14. 599      600


16. 719      710

☐ I can compare two three-digit numbers.

Name: \_\_\_\_\_

Practical Living and Career Studies  
NTI Materials- Day 9  
2<sup>nd</sup> Grade

**Directions:** Draw and color a picture of what you want to be when you grow up in the box. Then, complete the bottom section.



*(Draw and color a picture of you and your future career.)*

When I grow up, I want to be a/an \_\_\_\_\_.

Give two reasons you are interested in this career.

1. \_\_\_\_\_

\_\_\_\_\_

\_\_\_\_\_

2. \_\_\_\_\_

\_\_\_\_\_

\_\_\_\_\_