

Remote Learning Ms. Stadel-MATH Week of May 6-12, 2020

Student Name: _____

Here is your MATH daily agenda of assignments for this week:

Daily Practice Activities for Math/Money:

- Cut out and practice money/coins flashcards (in packet this week) - learning ways to make different amounts of "cents" there is a packet this week of **money/coins flashcards**, to cut out and practice - ways to make 5 cents, 10 cents, 25 cents, etc.
- Practice counting with play coins and bills - by 1s, 5s, 10s, etc.
- You should still have "Money Words" picture/word sheet to help with money vocabulary. **Keep this as a resource!**

MONEY PACKET: The LAST 5 PAGES ARE PLAY MONEY (same as last week's) TO CUT OUT - BILLS - 1'S, 5'S, 10'S; COINS - PENNIES, NICKELS, DIMES, QUARTERS. *Cut these out first, to help you with each day's work. Keep them in an envelope or baggie for future use!*

****When you use the cut out money to complete the worksheet, you can take a picture of it send it to me to show completion. Money scenarios 6-8 at back of last week's packet.**

Vocabulary Words used in these lessons: buy, cost, money

Day 1: Continue Shopping for Food Packet: **Money 6 WS Mixed Coins** - find the coins to make the amount for each item, then decide which one is "more"; **Money 7 WS (2 worksheet levels)**- counting up to \$5.00 - How much will it cost? Count the dollars and coins out for each item; first WS has the money for you to model & count with your child; 2nd WS is for child to use his/her cut out money to "make" /show the amount.

Day 2: **Money 8 WS (2 worksheet levels)** - counting up to \$5.00 - How much will it cost? Count the dollars and coins out for each item; follow same directions as Money 7.

Day 3: **Money in My Wallet worksheets, 1A and 1B, 2A and 2B.** The A worksheet "models" the bills; the B worksheet has the child count them out.

For the wallet activity the goals are:

- I will use dollar bills to show how much money something costs
- I will find out what I can buy with the money I have left over
- I will practice how to exchange (give and take) money
- 4 "ways I can pay" flashcards included to talk about the different ways I can pay for something when I shop (dollar bills, coins, checks, debit cards).

Day 4: **Money in my Wallet worksheets 3A and 3B, 4A and 4B.** (Follow same directions as day 3).

Day 5: **Money in my Wallet worksheets 5A and 5B.** (Same directions as day 3).

Parent's Signature: _____

RESOURCES FOR YOU...Students can work on DAILY anytime:

- Lexia app - www.lexia.com
- Matific app - www.matific.com
- Bookflix app - link below
- Math facts flash cards
- Sight words flash cards

Book Flix <http://auth.grolier.com/login/bookflix//login.php?bffs=N> User name:
sgs170 Password: raiders

-

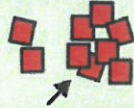
Matific <https://www.matific.com/us/en-us/login-page/> User Name: first
three letters of first and last names; example is Keith Brown so username = keibro
Password: 1

-


Lexia Core 5 Reading <https://www.matific.com/us/en-us/login-page/> User
name: User Name: first three letters of first and last names; example is Keith
Brown so username = keibro Password: read

Drew is buying food at the grocery store.

Find the coins for each item. Which costs more?




Which costs more?



53¢



40¢



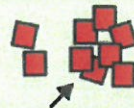
Which costs more?



68¢



55¢



Which costs more?




95¢



78¢

Paige is buying food at the grocery store.

How much will it cost? Count the dollars. Count the coins.



Paige is buying food at the grocery store.

How much will it cost? Count the dollars. Count the coins.

\$1.55




\$2.36



\$3.29



\$4.75




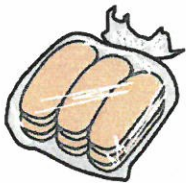
Drew is buying food at the grocery store.

How much does it cost? Count the dollars. Count the coins.

\$2.76



\$1.78



\$3.37



\$4.55



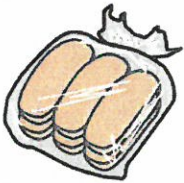
Drew is buying food at the grocery store.

How much does it cost? Count the dollars. Count the coins.

\$2.76



\$1.78



\$3.37




\$4.55

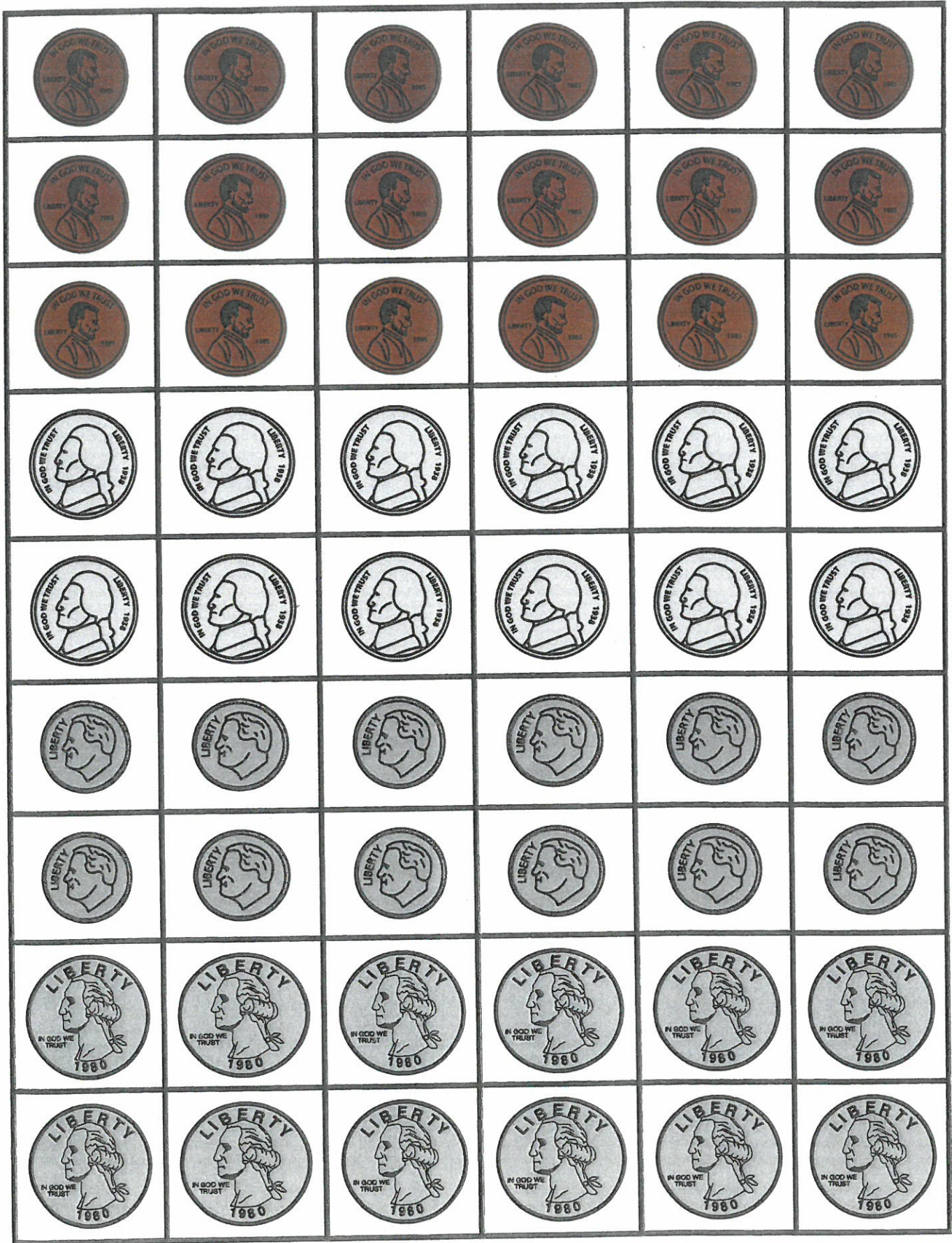
















You have \$10.00 in your wallet.

1A

\$3.00




Buy the toy car.



Total: \$0.00

How much money is left in your wallet? Show the money.



Total: \$0.00

What can you buy with the money you have left?

\$6.00



basketball

\$4.00



kite



You have \$10.00 in your wallet. **10**

\$3.00



Buy the toy car.

Total: \$0.00

How much money is left in your wallet? Show the money.

Total: \$0.00

What can you buy with the money you have left?

\$6.00



basketball

\$8.00




purse

\$10.00



board game



You have \$10.00 in your wallet. **2A**

\$5.00




Buy the doll.



Total: \$0.00

How much money is left in your wallet? Show the money.



Total: \$0.00

What can you buy with the money you have left?

\$3.00



toy car

\$4.00



kite



You have \$10.00 in your wallet. **2B**

\$5.00



Buy the doll.

Total: \$0.00

How much money is left in your wallet? Show the money.

Total: \$0.00

What can you buy with the money you have left?

\$8.00



purse

\$6.00

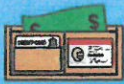


basketball

\$3.00




toy car



You have \$10.00 in your wallet. **3A**

\$4.00




Buy the kite.



Total: \$0.00

How much money is left in your wallet? Show the money.



Total: \$0.00

What can you buy with the money you have left?

\$3.00



toy car

\$6.00




basketball



You have \$10.00 in your wallet. **3B**

\$4.00



Buy the kite.


Total: \$0.00

How much money is left in your wallet? Show the money.

Total: \$0.00

What can you buy with the money you have left?

\$10.00



board game

\$5.00




doll


\$8.00




purse



You have \$10.00 in your wallet. 4A



Buy the purse.



Total: \$0.00


How much money is left in your wallet? Show the money.



Total: \$0.00

What can you buy with the money you have left?

\$1.00



pencil

\$2.00



crayons



You have \$10.00 in your wallet.

4B

\$8.00



Buy the purse.


Total: \$0.00

How much money is left in your wallet? Show the money.

Total: \$0.00

What can you buy with the money you have left?

\$4.00



kite

\$5.00



doll

\$2.00



crayons



You have \$10.00 in your wallet. **5A**

\$6.00





Buy the basketball.



Total: \$0.00


How much money is left in your wallet? Show the money.



Total: \$0.00

What can you buy with the money you have left?

\$4.00



kite


\$3.00



toy car



You have \$10.00 in your wallet. **5B**



Buy the basketball.

Total: \$0.00

How much money is left in your wallet? Show the money.

Total: \$0.00

What can you buy with the money you have left?

\$5.00



doll

\$4.00



kite

\$8.00




purse




dollar bills



coins















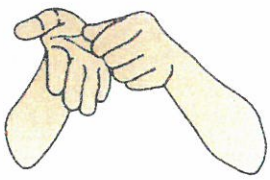

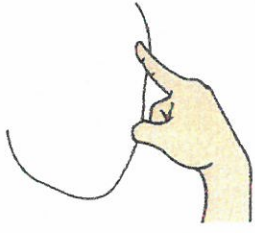




check



debit card



Money Words

<p>money</p> 	<p>How much?</p> 	<p>cost</p> 	<p>coins</p> 
<p>penny</p> 	<p>nickel</p> 	<p>dime</p> 	<p>quarter</p> 
<p>dollar bill</p> 	<p>match</p> 	<p>count</p> 	<p>count</p> 
<p>dollars</p> 	<p>dollar sign</p> 	<p>cents</p> 	<p>cent sign</p> 
<p>more</p> 	<p>amounts</p> 	<p>decimal point</p> 	



5¢



1¢



1¢



1¢



1¢



1¢

5¢



5¢

10¢



1¢



1¢



1¢



1¢



1¢



1¢



1¢



1¢



1¢



1¢

10¢



5¢



5¢

10¢



10¢

15¢



5¢



5¢



5¢

15¢



10¢



5¢

20¢



5¢



5¢



5¢



5¢

20¢



10¢



10¢

25¢



5¢



5¢



5¢



5¢



5¢

25¢



10¢



10¢



5¢

25¢



25¢

30¢



10¢



10¢



10¢

30¢



25¢



5¢

35¢



10¢



10¢



10¢



5¢

35¢



25¢



10¢

40¢



10¢



10¢



10¢



10¢

40¢



25¢



10¢



5¢

45¢



10¢



10¢



10¢



10¢



5¢

45¢



25¢



10¢



10¢

50¢



10¢



10¢



10¢



10¢



10¢

50¢



25¢



25¢

60¢



10¢



10¢



10¢



10¢



10¢



10¢

60¢



25¢



25¢



10¢

70¢



25¢



25¢



10¢



10¢

75¢



25¢



25¢



25¢

75¢



25¢



25¢



10¢



10¢



5¢

80¢



25¢



25¢



25¢



5¢

80¢



25¢



25¢



10¢



10¢



10¢

90¢



25¢



25¢



25¢



10¢



5¢

¢

¢

\$1.00



25¢



25¢



25¢



25¢

\$

\$

\$