

3rd Grade April 15-21

Please complete the following activities for each day listed. As your child finishes an activity that is written work they should send a picture in DOJO or to their teacher's email.

4/15	Math Play Prodigy for 20 minutes	Reading Read chapter 1 of Charlotte's Web Play Squiggle Park for 10 minutes	Writing Answer Charlotte's Web chapter 1 questions in novel study packet	Spelling Write Charlotte's Web words 3 times each	Social Studies Follow the link to Scholastic and do Week 1 Day 1 activities https://classroommagazines.scholastic.com/support/learnathome/grades-3-5.html
4/16	Math Play Matific for 20 minutes	Reading Read chapters 2 & 3 of Charlotte's Web Play Squiggle Park for 10 minutes	Writing Answer Charlotte's Web chapters 2 & 3 questions in novel study packet	Spelling Put your Charlotte's Web words in ABC order	Science Follow the link to Scholastic and do Week 1 Day 2 activities https://classroommagazines.scholastic.com/support/learnathome/grades-3-5.html
4/17	Math Bar Graph Worksheet - Baseball and Newspaper	Reading Read chapters 4 & 5 of Charlotte's Web Play Squiggle Park for 10 minutes	Writing Answer Charlotte's Web chapters 4 & 5 questions in novel study packet	Spelling Write your spelling words in sentences-highlight the spelling words	Social Studies Follow the link to Scholastic and do Week 1 Day 3 activities https://classroommagazines.scholastic.com/support/learnathome/grades-3-5.html
4/20	Math Line Graph Worksheet - Bird Sales and Height	Reading Read chapter 6 of Charlotte's Web Play Squiggle Park for 10 minutes	Writing Answer Charlotte's Web chapter 6 questions in novel study packet	Spelling Write each of your words 1 time each. Choose a different color to write your vowels Example: spider	Science Follow the link to Scholastic and do Week 1 Day 4 activities https://classroommagazines.scholastic.com/support/learnathome/grades-3-5.html
4/21	Math Create a bar graph of favorite colors (pick 3 colors). Ask each person in your house their favorite color and graph the results 	Reading Read chapter 7 of Charlotte's Web Play Squiggle Park for 10 minutes	Writing Answer Charlotte's Web chapter 7 questions in novel study packet	Spelling Pyramid spelling-write each of your words 1 time each S Sp Spi Spid Spide Spider	Social Studies Follow the link to Scholastic and do Week 1 Day 5 activities https://classroommagazines.scholastic.com/support/learnathome/grades-3-5.html

Parent's Signature _____



Charlotte's Web: Chapters 1 - 7

Vocabulary & Spelling

Vocabulary List

1. injustice : not fair
2. specimen : a part that shows what the whole thing or group is like
3. commotion : confusion; noise
4. captivity : the state of being held against your will or in confinement
5. inheritance : something you get from a person at his death
6. morals : lessons to be learned from a story or experience
7. conscience : a feeling that you should do what is right

Spelling List

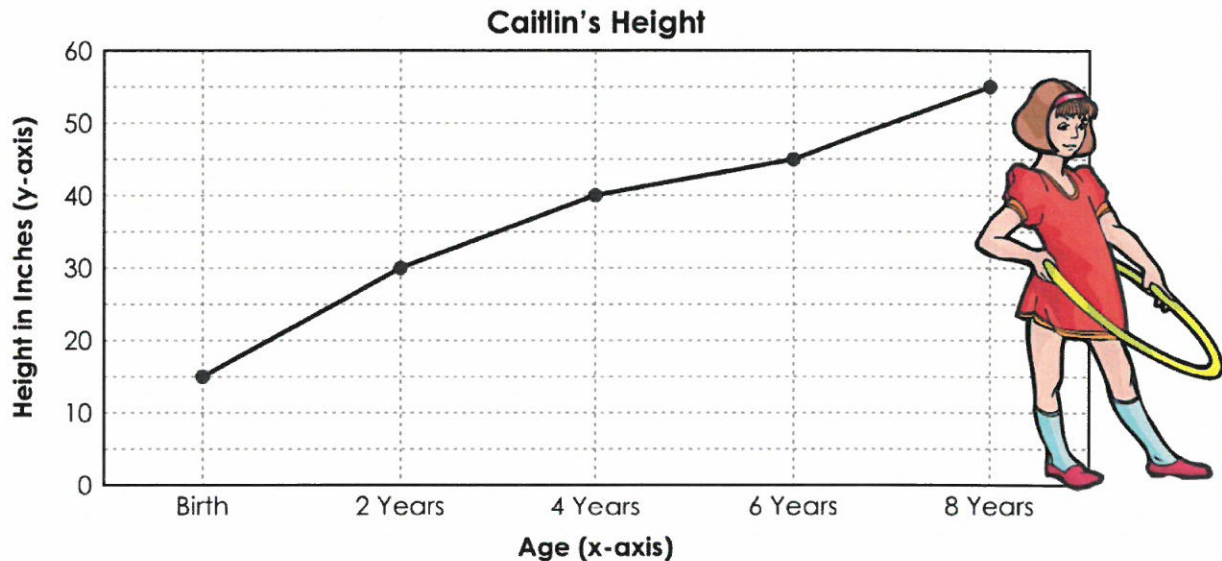
spider	springtime	animals	Wilbur
injustice	breakfast	reconsider	Charlotte
escape	morals	conscience	trough
morsel	gosling	salutations	gander
feelings	detested	glutton	goose



Name: _____

Height Record Line Graph

Caitlin's family has kept track of her height. Below is a line graph showing how her height has changed as she aged. Use the graph to answer the questions.



1. How tall was Caitlin when she was 4 years old? 1. _____
2. How much had Caitlin grown from the time she was born to 6 years old? 2. _____
3. How old was Caitlin when she was 30 inches tall? 3. _____
4. How tall might Caitlin be when she is 10 years old? 4. _____

a. 85 inches
c. 50 inches

b. 55 inches
d. 65 inches
5. About how tall might Caitlin have been when she was 5 years old? 5. _____

a. 40 inches
c. 45 inches

b. 43 inches
d. 49 inches

Name: _____

Basic Line Graph

The owner of Steve's Pet World is keeping track of how many birds are sold each month. Use the chart below to graph the sales and answer the questions.


Month	Number of Birds Sold
January	3
February	5
March	6
April	7
May	4



1. During which month were the most birds sold? 1. _____
2. During which month were the fewest birds sold? 2. _____
3. How many more birds were sold in March than January? 3. _____
4. How many birds were sold in February, March, and April? 4. _____
5. Did Steve's Pet World sell more birds in April or May? 5. _____
6. Twice as many birds were sold in June than May. How many birds were sold in June? 6. _____

Name _____

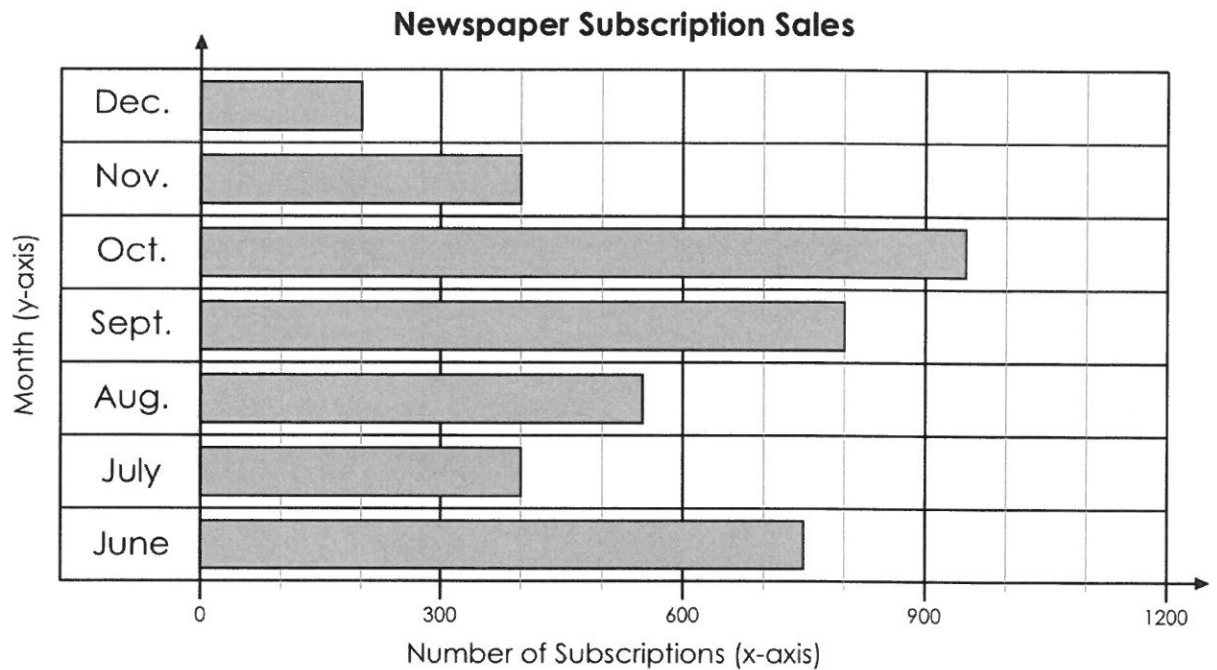
The school baseball team keeps track of how many runs each player gets. Use the graph below to answer the questions.



1. How many runs did Sarah have?
2. How many runs did the player with the most runs have?
3. How many more runs did Doug have than Sarah?
4. How many fewer runs did Mark have than Tracy?
5. How many runs did Mark and Patty have together?
6. Who has more runs: Mark and Doug or Tracy and Patty?
7. Which two players' runs added together are less than Tracy's?
8. Jose scores five more runs than Tracy. How many runs did he score?
9. List the players in order, from fewest runs to most runs.

Name _____

The local newspaper keeps track of how many subscriptions are sold each month. Use the graph below to answer the questions.



1. How many newspapers were sold in October?
2. How many more newspaper subscriptions were sold in November than December?
3. Were more newspaper subscriptions sold in October, November, and December or in July, August, and September?
4. In April, the newspaper sold 100 fewer subscriptions than they did in June. How many subscriptions did they sell in April?

Answer all questions in complete
Sentences.

Charlotte's Web Novel Study Chapter One



1. Why did Mr. Arable have an ax?

2. What was Fern's motive?

Remember motive is what a character wants, doesn't want or needs.

3. How did Fern care for the runt?

4. What did Fern decide to call it?

5. What was Fern's brother's name?

Charlotte's Web Novel Study Chapters Two & Three

1. Why did Wilbur have to leave Fern ?

2. How did Wilbur feel at the Zuckerman's (page 16)?

3. Why was chapter three called "Escape"?

4. Describe what Mr. Zuckerman used to get Wilbur back in his pen.

Charlotte's Web Novel Study Chapters Four & Five

1. What did Wilbur want (page 27)?

Remember motive is what a character wants, doesn't want or needs.

2. What kind of character is Templeton? Give an example to support your opinion (pages 29 & 30).

3. Describe Wilbur's encounter with his new friend.

*heard

*saw

*felt

*smelled


4. What bothers Wilbur about his new friend (page 41)?

Charlotte's Web Novel Study Chapters Six & Seven

1. What happened to the geese in the middle of Chapter Six?

2. What did Templeton want from the goose (page 45)?

Draw a picture of Templeton with what the goose gave him.



3. Why does Charlotte warn Wilbur about Templeton's egg (page 47)?

4. How does the sheep frighten Wilbur in Chapter Seven ?

5. What does Charlotte say she will do?

