

KINDERGARTEN AMI

ACTIVITIES – Day 5

(Please check off each activity when it is completed and send back to school.)

___ Have **your child** read the paragraph and answer the questions.

___ CVC Worksheet

___ Addition worksheet

___ Count to 100 by 1's, 5's, and 10's (use the 100's chart and have them point to the number when counting). **SAVE THE 100'S CHART**

___ Write numbers 1-20

___ Weather Worksheet

___ Spend 15 minutes exercising.

Student Name: _____

Name: _____

Sam
●

ham
●

yam
●

jam
●

Sam

Sam, do you want ham?

No. Sam, do you want a



yam? No. Sam, do you want jam? Yes!



1. ____, do you want ham?

☐ jam ☐ Sam ☐ Tam

2. Sam, do you want ____? Yes!






☐ yam ☐ ham ☐ jam

Name: _____

Sound it out

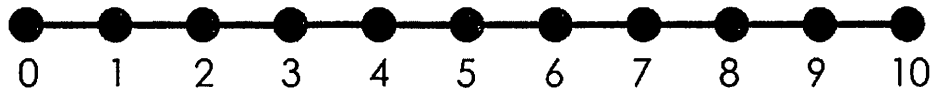
Say the name of each picture, color the beginning, middle and ending sounds. Write the word.



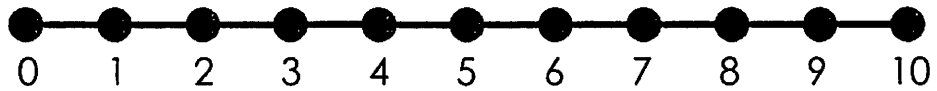
picture	color	write
	(d) (i) (d) (p) (e) (p)	_____ _____ _____
	(r) (i) (d) (l) (e) (p)	_____ _____ _____
	(r) (e) (p) (l) (i) (t)	_____ _____ _____
	(s) (i) (p) (c) (u) (t)	_____ _____ _____
	(s) (e) (p) (z) (i) (q)	_____ _____ _____

NUMBER LINE ADDITION

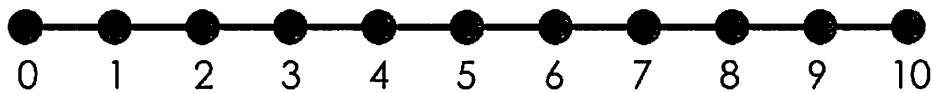
$5+2=\square$



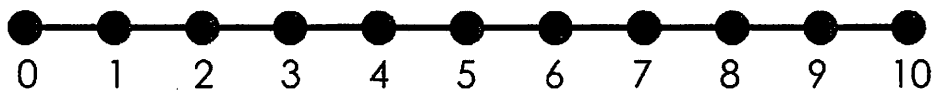
$2+4=\square$



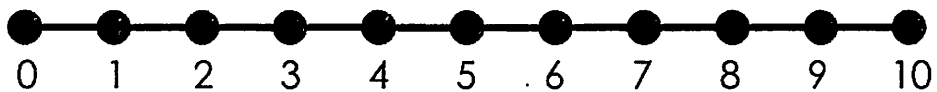
$4+3=\square$



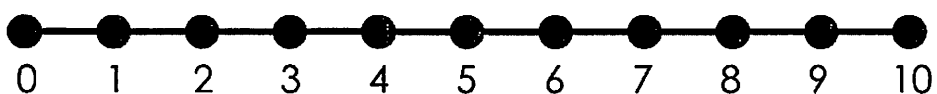
$5+5=\square$



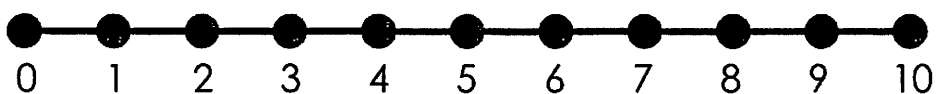
$8+2=\square$



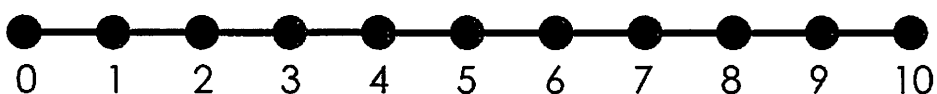
$1+6=\square$



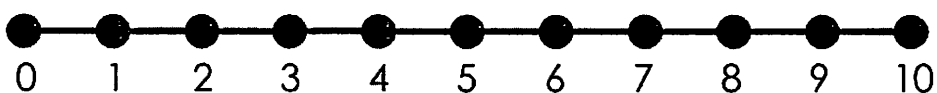
$9+1=\square$



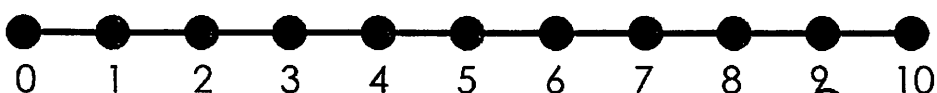
$3+6=\square$



$5+2=\square$



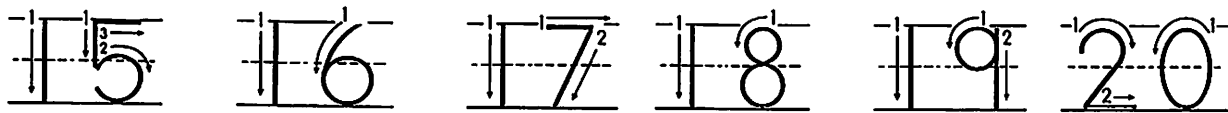
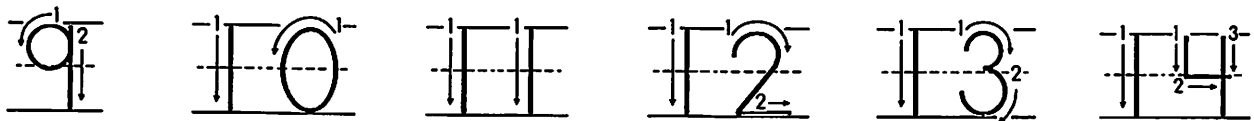
$3+3=\square$



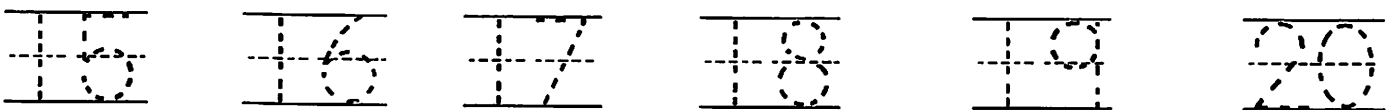
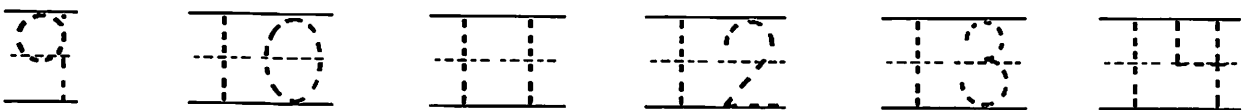
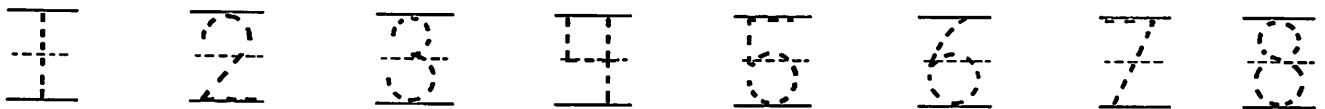
Name: _____

Write, Trace, & Say the Numbers 1-20

This is how you write the numbers 1-20




Say and trace the numbers 1-20



Say and write the numbers 1-20

Weather

Match the weather picture with the right situations!



sunny




cloudy



rainy



windy



Name: _____