

KINDERGARTEN AMI

ACTIVITIES – Day 6

(Please check off each activity when it is completed and send back to school.)

___ Have **your child** read the paragraph and answer the questions.

___ CVC Worksheet

___ Addition worksheet

___ Count to 100 by 1's, 5's, and 10's (use the 100's chart and have them point to the number when counting). **SAVE THE 100'S CHART**

___ Write numbers 1-20

___ Weather Worksheet

___ Spend 15 minutes exercising.

Student Name: _____

Name: _____

fan
●


man
●

van
●

ran
●

The Van

The man ran. He ran
to the van. He saw a fan.



It was in the van. He put on the fan.



1. The man ____.

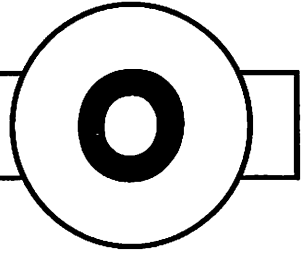
☐ ran ☐ fan ☐ van

2. He put on the ____.






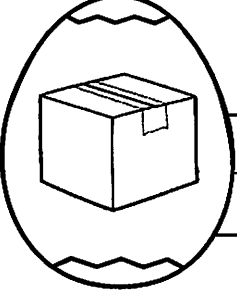




☐ man ☐ van ☐ fan

Name: _____

Set 1



Write the word for each picture:

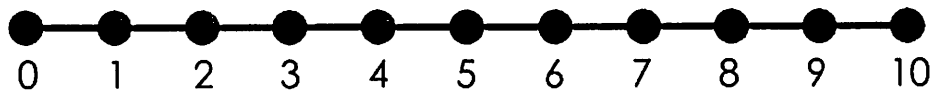
	
	
	
	
	

NUMBER LINE ADDITION

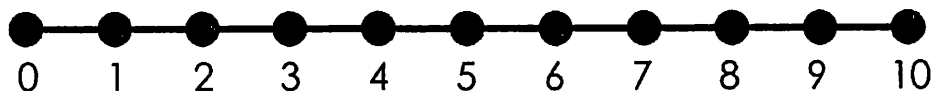
$4+4=\square$



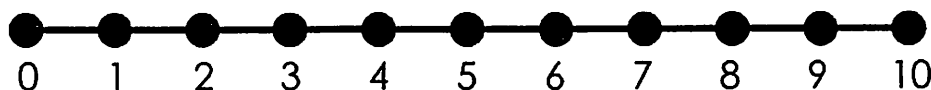
$6+4=\square$



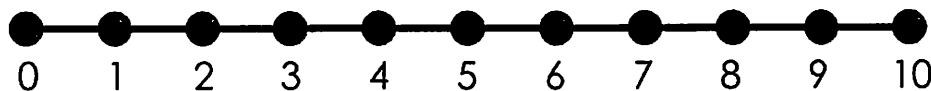
$1+9=\square$



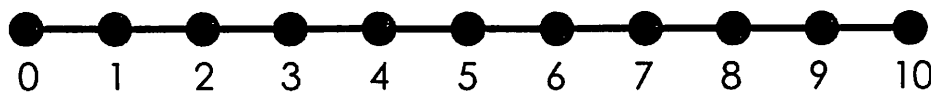
$8+1=\square$



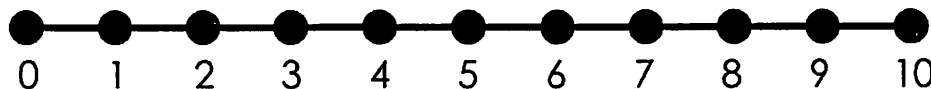
$3+3=\square$



$5+3=\square$



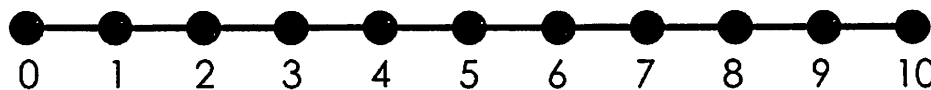
$4+4=\square$





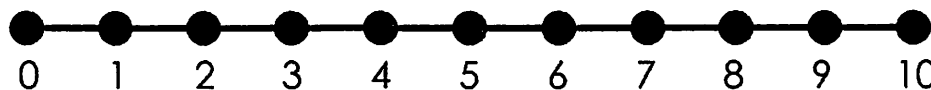
$2+5=\square$



$6+3=\square$



$2+7=\square$



Copy each
number

Name: _____

Number Writing Assessment

1 _____ 2 _____ 3 _____ 4 _____

5 _____ 6 _____ 7 _____ 8 _____

9 _____ 10 _____ 11 _____ 12 _____

13 _____ 14 _____ 15 _____ 16 _____

17 _____ 18 _____ 19 _____ 20 _____

Name _____

Date _____

Weather Match

Match the weather to the correct picture.

