

# **KINDERGARTEN AMI**

## **ACTIVITIES – Day 7**

*(Please check off each activity when it is completed and send back to school.)*

\_\_\_ Have **your child** read the paragraph and answer the questions.

\_\_\_ CVC Worksheet

\_\_\_ Addition worksheet

\_\_\_ Count to 100 by 1's, 5's, and 10's (use the 100's chart and have them point to the number when counting). SAVE THE 100'S CHART

\_\_\_ Write numbers 1-20

\_\_\_ Weather Worksheet

\_\_\_ Spend 15 minutes exercising.

**Student Name:** \_\_\_\_\_

Name: \_\_\_\_\_

cat  
●

fat  
●


mat  
●

sat  
●

hat  
●

## The Cat

The cat is not fat. The  
cat has a hat. The cat  
sat, sat, sat. She sat on the mat.



1. The cat is not \_\_\_\_.


☐ fat      ☐ mat      ☐ hat

2. She \_\_\_\_ on the mat.


☐ fat      ☐ sat      ☐ cat

Name: \_\_\_\_\_


# GVC Word Practice #1




--	--	--




--	--	--




--	--	--




--	--	--




--	--	--



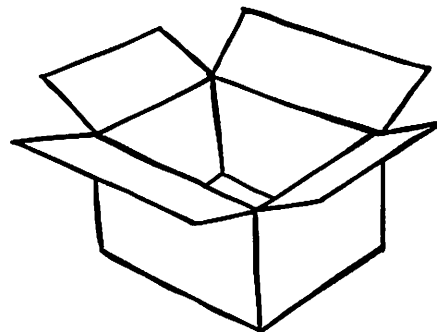
--	--	--



--	--	--



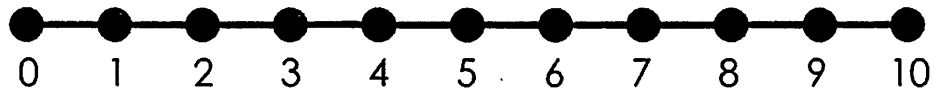
--	--	--



--	--	--

# NUMBER LINE ADDITION

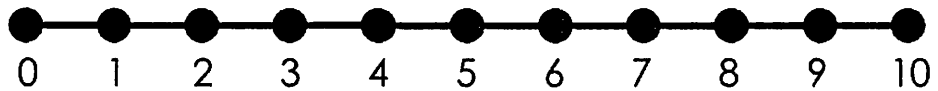
$4 + 3 = \square$



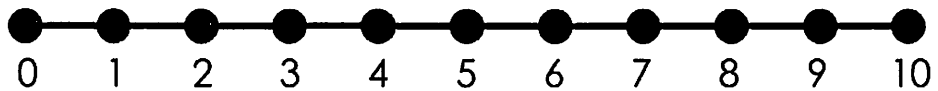
$2 + 6 = \square$



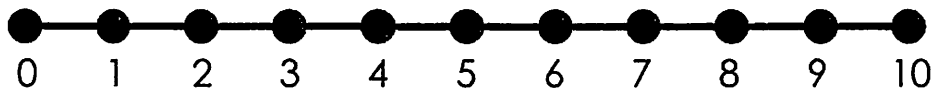
$8 + 1 = \square$



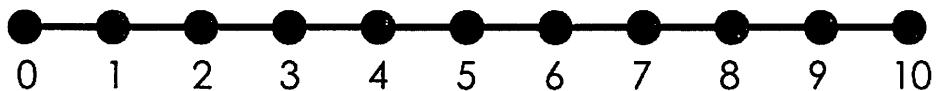
$7 + 3 = \square$



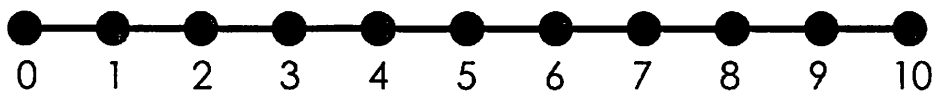
$3 + 2 = \square$



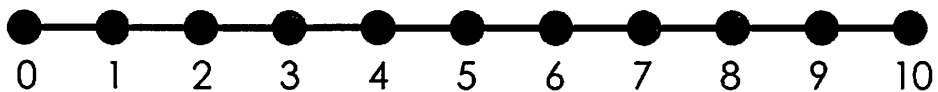
$5 + 1 = \square$



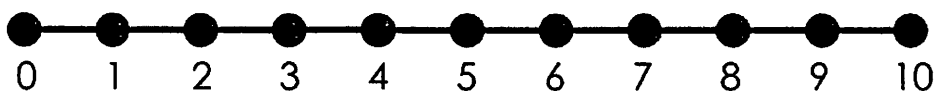
$2 + 6 = \square$




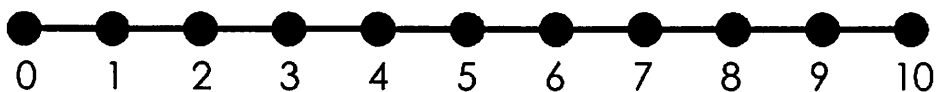
$3 + 7 = \square$



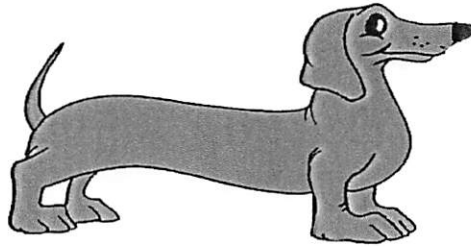
$5 + 3 = \square$



$4 + 4 = \square$



Name \_\_\_\_\_



Write the correct number in boxes

	2						8		
11			14			17			

# Write your numbers:

\_\_\_\_\_

\_\_\_\_\_

\_\_\_\_\_





Name: \_\_\_\_\_

## What's the Weather?

Draw a line to match the weather (on the left) with the correct picture on the right.

