

# Snow Day: 3

## First Grade

Date: \_\_\_\_\_

Name: \_\_\_\_\_



# READING

Directions: Read the passage below. Answer the questions.

Shawn is excited. He does not have school this week. He has a break. Shawn wants to go to ride his bike. He wants to go to the movies. Shawn wants to ride big rides at the park. Shawn wants to do a lot on his break. He tells his mom and dad his plans. Shawn is sad. They have different plans. They want to clean the house. His mom wants to shop. His dad wants to rake the leaves. They give Shawn some jobs. Shawn cleans his room. He puts up his toys. He helps rake the leaves. Shawn is happy now. His mom and dad surprise him.

1. Why is Shawn excited?

\_\_\_\_\_  
\_\_\_\_\_  
\_\_\_\_\_

2. What does Shawn want to do on his break?

\_\_\_\_\_  
\_\_\_\_\_  
\_\_\_\_\_  
\_\_\_\_\_

3. Which thing would you do on a break?

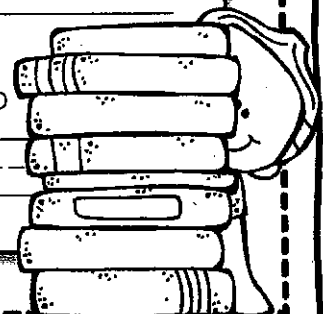
\_\_\_\_\_  
\_\_\_\_\_  
\_\_\_\_\_

4. How does Shawn's parents change his plans?

\_\_\_\_\_  
\_\_\_\_\_  
\_\_\_\_\_

5. At the end of the story, why is Shawn happy?

\_\_\_\_\_  
\_\_\_\_\_  
\_\_\_\_\_



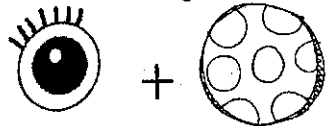
Date: \_\_\_\_\_

Name: \_\_\_\_\_

# READING

## COMPOUND WORDS

Directions: Using the word bank, match the correct word to the correct pictures.



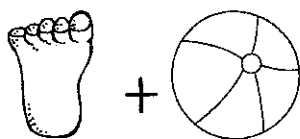
\_\_\_\_\_

\_\_\_\_\_



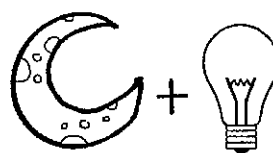
\_\_\_\_\_

\_\_\_\_\_



\_\_\_\_\_

\_\_\_\_\_



\_\_\_\_\_

\_\_\_\_\_

football	moonlight	eyeball	skateboard
----------	-----------	---------	------------


## DIGRAPHS

Directions: Look at the picture. Write the correct digraph sound (CH, SH, TH, or WH) in the box next to the picture.



\_\_\_\_\_

\_\_\_\_\_




\_\_\_\_\_

\_\_\_\_\_




\_\_\_\_\_

\_\_\_\_\_



\_\_\_\_\_

\_\_\_\_\_



\_\_\_\_\_

\_\_\_\_\_


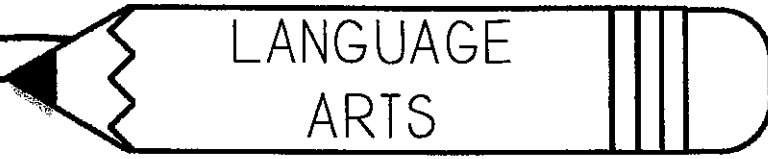


\_\_\_\_\_

\_\_\_\_\_

Date: \_\_\_\_\_

Name: \_\_\_\_\_

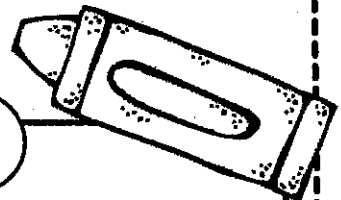


# CONVENTIONS

Directions: Circle the correct word to go in the blank.

1. The books _____ on the shelf.	are	is
2. Do you _____ a pencil?	have	has
3. My mom _____ beautiful.	are	is
4. What _____ your favorite color?	am	is
5. I _____ going to a concert.	am	are
6. They _____ nice things for others.	do	does

# SIGHT WORD SORT



Directions: Using the word bank, sort one syllable and two syllable words.

ONE SYLLABLE

TWO SYLLABLES

\_\_\_\_\_

\_\_\_\_\_

\_\_\_\_\_

\_\_\_\_\_

\_\_\_\_\_

\_\_\_\_\_

\_\_\_\_\_

\_\_\_\_\_

\_\_\_\_\_

\_\_\_\_\_

\_\_\_\_\_

\_\_\_\_\_

\_\_\_\_\_

\_\_\_\_\_

\_\_\_\_\_

\_\_\_\_\_


mother	here	why	asked
went	letters	picture	need

Date: \_\_\_\_\_

Name: \_\_\_\_\_



## SENTENCE CONSTRUCTION



Directions: Rewrite the sentences correctly.

1. does tammy live in california

\_\_\_\_\_

\_\_\_\_\_

2. can matt go to the game

\_\_\_\_\_

\_\_\_\_\_

3. she wore a blue dress

\_\_\_\_\_

\_\_\_\_\_

## NOUNS & VERBS

Directions: A noun is a person, place, or thing. Circle the nouns in the sentences. A verb is something you can do. Draw a line under the verb in the sentence.

1. The snow sticks to the grass.

2. His cat licks the dish.

3. My friends sang at the concert.

4. The animals ate the corn.

5. I drove my car to the store.

Date: \_\_\_\_\_

Name: \_\_\_\_\_

# MATH

## WORD PROBLEMS

Directions: Answer the word problems below. Be sure to show your work.

Meg drew 13 red hearts and 7 pink hearts. How many more red hearts did she draw than pink hearts?

\_\_\_ - \_\_\_ = \_\_\_ red hearts

Keyon has 4 chicks, 3 cats, and 3 dogs. How many pets does Keyon have in all?

\_\_\_ + \_\_\_ + \_\_\_ = \_\_\_ pets

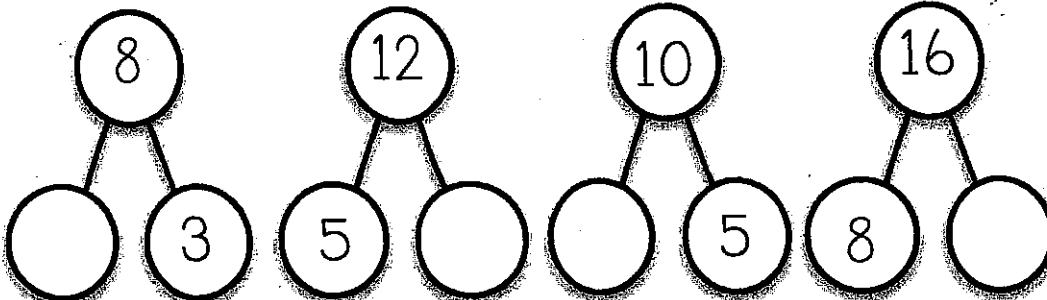
Mrs. Smith has 16 students. 7 of them are boys. How many students are girls?

\_\_\_ - \_\_\_ = \_\_\_ girls

Mr. Davis grew 3 tomato plants and 6 lima bean plants in science. How many plants did he grow altogether?

\_\_\_ + \_\_\_ = \_\_\_ plants

Directions: Write the missing numbers in the circles below ( $10 - \_\_ = 2$ ).



Date: \_\_\_\_\_

Name: \_\_\_\_\_

# MATH

## ADDITION & SUBTRACTION

Directions: Write the answers for each problem on the lines.

$13 - 4 = \underline{\quad}$

$15 - \underline{\quad} = 7$

$5 + \underline{\quad} = 6$

$3 + 9 = \underline{\quad}$

$11 - 8 = \underline{\quad}$

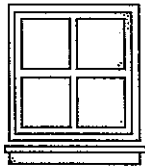
$10 - \underline{\quad} = 5$

$7 + \underline{\quad} = 12$

$8 + 8 = \underline{\quad}$

## SHAPES

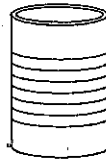
Directions: Using the word bank, match the words to the correct shapes.



\_\_\_\_\_

-----


\_\_\_\_\_



\_\_\_\_\_

-----


\_\_\_\_\_



\_\_\_\_\_

-----


\_\_\_\_\_



\_\_\_\_\_

-----

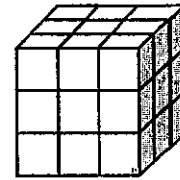
\_\_\_\_\_



\_\_\_\_\_

-----

\_\_\_\_\_



\_\_\_\_\_

-----

\_\_\_\_\_

circle

cube

cylinder

rectangle

cone

square