

Atomic Structure

KEY TERMS

nucleus
proton
neutron
electron
orbital
valence electron

OBJECTIVES

- ▶ **Explain** Dalton's atomic theory, and describe why it was more successful than Democritus's theory.
- ▶ **State** the charge, mass, and location of each part of an atom according to the modern model of the atom.
- ▶ **Compare** and contrast Bohr's model with the modern model of the atom.

Atoms are everywhere. They make up the air you are breathing, the chair you are sitting in, and the clothes you are wearing. This book, including this page you are reading, is also made of atoms.



Disc One, Module 2:
Models of the Atom

Use the Interactive Tutor to learn more about this topic.

What Are Atoms?

Atoms are tiny units that determine the properties of all matter. The aluminum cans shown in **Figure 1** are lightweight and easy to crush because of the properties of the atoms that make up the aluminum.


Our understanding of atoms required many centuries

In the fourth century BCE, the Greek philosopher Democritus suggested that the universe was made of invisible units called atoms. The word *atom* is derived from the Greek word meaning "unable to be divided." He believed movements of atoms caused the changes in matter that he observed.

Although Democritus's theory of atoms explained some observations, Democritus was unable to provide the evidence needed to convince people that atoms really existed. Throughout the centuries that followed, some people supported Democritus's theory. But other theories were also proposed. As the science of chemistry was developing in the 1700s, more emphasis was put on making careful and repeated measurements in scientific experiments. As a result, more-reliable data were collected and used to favor one theory over another.

Figure 1

The atoms in aluminum, seen here as an image from a scanning tunneling electron microscope, give these aluminum cans their properties.



Aluminum Atoms

John Dalton developed an atomic theory

In 1808, an English schoolteacher named John Dalton proposed his own atomic theory. Dalton's theory was developed with a scientific basis, and some parts of his theory still hold true today. Like Democritus, Dalton proposed that atoms could not be divided. Today, we know that atoms are actually made up of even smaller particles! According to Dalton, all atoms of a given element were exactly alike. Dalton also stated that atoms of different elements could join to form compounds. Today, Dalton's theory is considered the foundation for modern atomic theory.


Atoms are the building blocks of molecules

An atom is the smallest part of an element that still has the element's properties. Imagine dividing a coin made of pure copper until the pieces were too small for you to see. If you were able to continue dividing these pieces, you would be left with the simplest units of the coin—copper atoms. All the copper atoms would be alike. Each copper atom would have the same chemical properties as the coin you started with.

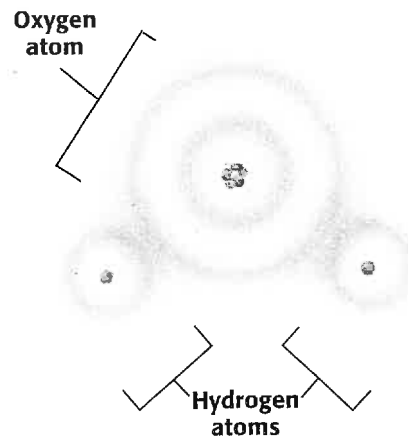
You have learned that atoms can join. **Figure 2** shows atoms joined together to form molecules of water. The water we see is actually made of a very large number of water molecules. Whether it gushes downstream in a riverbed or is bottled for us to drink, water is always the same: each molecule is made of two hydrogen atoms and one oxygen atom.

Figure 2

A The water that we see, no matter what its source, is made of many molecules.



B Each molecule of water is made of two hydrogen atoms and one oxygen atom.



Molecules of water





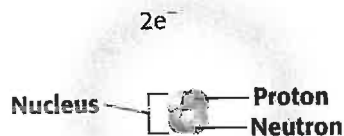
Figure 3

If the nucleus of an atom were the size of a marble, the whole atom would be the size of a football stadium

- ▶ **nucleus** an atom's central region which is made up of protons and neutrons
- ▶ **proton** a subatomic particle that has a positive charge and that is found in the nucleus of an atom
- ▶ **neutron** a subatomic particle that has no charge and that is found in the nucleus of an atom
- ▶ **electron** a subatomic particle that has a negative charge

Figure 4

A helium atom is made of two protons, two neutrons, and two electrons ($2e^-$).



Helium Atom

What's in an Atom?

Less than 100 years after Dalton published his atomic theory, scientists determined that atoms consisted of still smaller particles and could be broken down even further. While we now know that atoms are made up of many different subatomic particles, we need to study only three of these particles to understand the chemistry of most substances.

Atoms are made of protons, neutrons, and electrons

At the center of each atom is a small, dense **nucleus** with a positive electric charge. The nucleus is made of **protons** and **neutrons**. These two subatomic particles are almost identical in size and mass, but protons have a positive electric charge while neutrons have no electric charge at all. Moving around outside the nucleus is a cloud of very tiny negatively charged subatomic particles with very little mass. These particles are called **electrons**. To get an idea of how far from the nucleus an electron can be, see **Figure 3**. If the nucleus of an atom were the size of a marble, the whole atom would be the size of a football stadium! A helium atom, shown in **Figure 4**, has one more proton and one more electron than a hydrogen atom has. The number of protons and electrons an atom has is unique for each element.

Unreacted atoms have no overall charge

You might be surprised to learn that atoms are not charged even though they are made of charged protons and electrons. Atoms do not have a charge because they have an equal number of protons and electrons whose charges exactly cancel. A helium atom has two protons and two electrons. The atom is neutral because the positive charge of the two protons exactly cancels the negative charge of the two electrons.

| | |
|--------------------------------|----|
| Charge of two protons: | +2 |
| Charge of two neutrons: | 0 |
| Charge of two electrons: | -2 |
| Total charge of a helium atom: | 0 |

Subatomic Particles

| Particle | Charge | Mass (kg) | Location in the atom |
|----------|--------|------------------------|-----------------------------------|
| Proton | +1 | 1.67×10^{-27} | In the nucleus |
| Neutron | 0 | 1.67×10^{-27} | In the nucleus |
| Electron | -1 | 9.11×10^{-31} | Moving around outside the nucleus |

Models of the Atom

Democritus in the fourth century BCE and later Dalton, in the nineteenth century, thought that the atom could not be split. That theory had to be modified when it was discovered that atoms are made of protons, neutrons, and electrons. Like most scientific models and theories, the model of the atom has been revised many times to explain such new discoveries.

VOCABULARY Skills Tip

Remember that **protons** have a **positive charge** and **neutrons** are **neutral**.

Bohr's model compares electrons to planets

In 1913, the Danish scientist Niels Bohr suggested that electrons in an atom move in set paths around the nucleus much like the planets orbit the sun in our solar system. In Bohr's model, each electron has a certain energy that is determined by its path around the nucleus. This path defines the electron's energy level. Electrons can only be in certain energy levels. They must gain energy to move to a higher energy level or lose energy to move to a lower energy level.

One way to imagine Bohr's model is to compare an atom to the stairless building shown in **Figure 5**. Imagine that the nucleus is in a very deep basement and that the electronic energy levels begin on the first floor. Electrons can be on any floor of the building but not between floors. Electrons gain energy by riding up in the elevator and lose energy by riding down in the elevator. Bohr's description of energy levels is still considered accurate today.

Electrons act more like waves

By 1925, Bohr's model of the atom no longer explained electron behavior. So a new model was proposed that no longer assumed that electrons orbited the nucleus along definite paths like planets orbiting the sun. In this modern model of the atom, it is believed that electrons behave more like waves on a vibrating string than like particles.

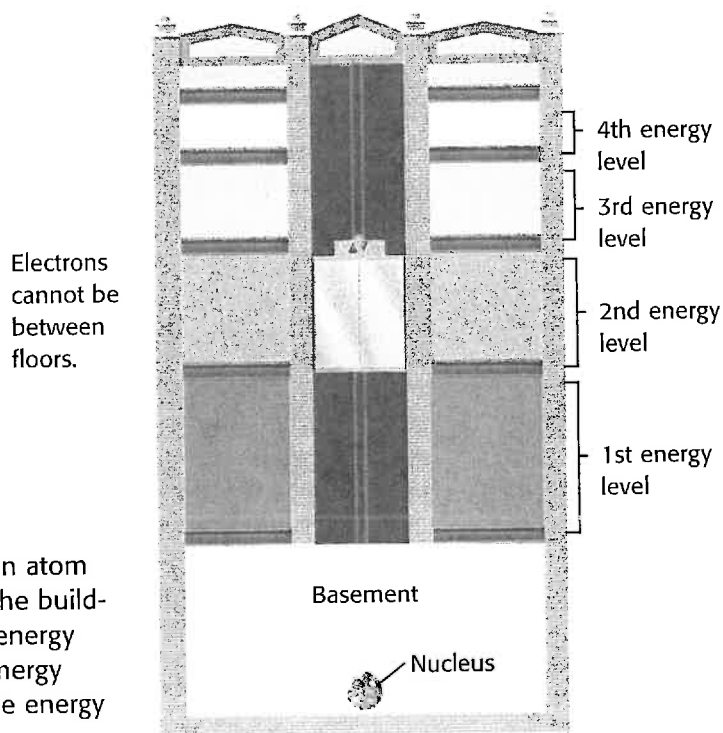


Figure 5

The energy levels of an atom are like the floors of the building shown here. The energy difference between energy levels decreases as the energy level increases.




Figure 6

The exact location of any of the blades of this fan is difficult to determine. The exact location of an electron is impossible to determine.

An electron's exact location cannot be determined

Imagine the moving blades of a fan, like the one shown in **Figure 6**. If you were asked where any one of the blades was located at a certain instant, you would not be able to give an exact answer. It is very difficult to know the exact location of any of the blades because they are moving so quickly. All you know for sure is that each blade could be anywhere within the blurred area you see as the blades turn.

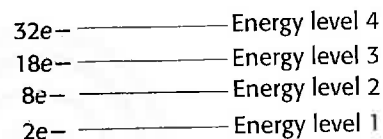
It is impossible to determine both the exact location of an electron in an atom and the electron's speed and direction. The best scientists can do is calculate the chance of finding an electron in a certain place within an atom. One way to visually show the likelihood of finding an electron in a given location is by shading. The darker the shading, the better the chance of finding an electron at that location. The whole shaded region is called an electron cloud.

Electrons exist in energy levels

Within the atom, electrons with different amounts of energy exist in different energy levels. There are many possible energy levels that an electron can occupy. The number of filled energy levels an atom has depends on the number of electrons. The first energy level holds two electrons, and the second energy level holds eight. So, a lithium atom, with three electrons, has two electrons in its first energy level and one in the second. **Figure 7** shows how the first four energy levels are filled.

Figure 7

Electrons can be found in different energy levels. Each energy level holds a certain number of electrons.




Quick Activity

Constructing a Model

A scientific model is a simplified representation based on limited knowledge that describes how an object looks or functions. In this activity, you will construct your own model.

1. Obtain from your teacher a can that is covered by a sock and sealed with tape. An unknown object is inside the can.
2. Without unsealing the container, try to determine the characteristics of the object inside by examining it through the sock. What is the object's mass? What is its size, shape, and texture? Record all of your observations in a data table.
3. Remove the taped sock so that you can touch the object without looking at it. Record these observations as well.
4. Use the data you have collected to draw a model of the unknown object.
5. Finally remove the object to see what it is. Compare and contrast the model you made with the object it is meant to represent.



Electrons are found in orbitals within energy levels

The regions in an atom where electrons are likely to be found are called **orbitals**. Within each energy level, electrons occupy orbitals that have the lowest energy. The four different kinds of orbitals are the *s*, *p*, *d*, and *f* orbitals. The simplest kind of orbital is an *s* orbital. An *s* orbital can have only one possible orientation in space because it has a shape like a sphere, as shown in **Figure 8**. An *s* orbital has the lowest energy and can hold two electrons.

A *p* orbital, on the other hand, is dumbbell shaped and can be oriented three different ways in space, as shown in **Figure 9**. The axes on the graphs are drawn to help you picture how these orbitals look in three dimensions. Imagine the *y*-axis being flat on the page. Imagine the dotted lines on the *x*- and *z*-axes going into the page, and the darker lines coming out of the page. A *p* orbital has more energy than an *s* orbital has. Because each *p* orbital can hold two electrons, the three *p* orbitals can hold a total of six electrons.

The *d* and *f* orbitals are much more complex. There are five possible *d* orbitals and seven possible *f* orbitals. An *f* orbital has the greatest energy. Although all these orbitals are very different in shape, each can hold a maximum of two electrons.

▶ **orbital** a region in an atom where there is a high probability of finding electrons

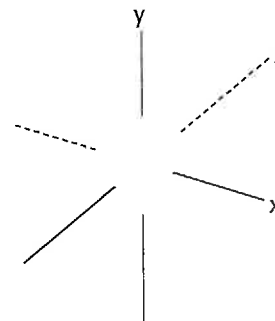


Figure 8

An *s* orbital is shaped like a sphere, so it has only one possible orientation in space. An *s* orbital can hold a maximum of two electrons.

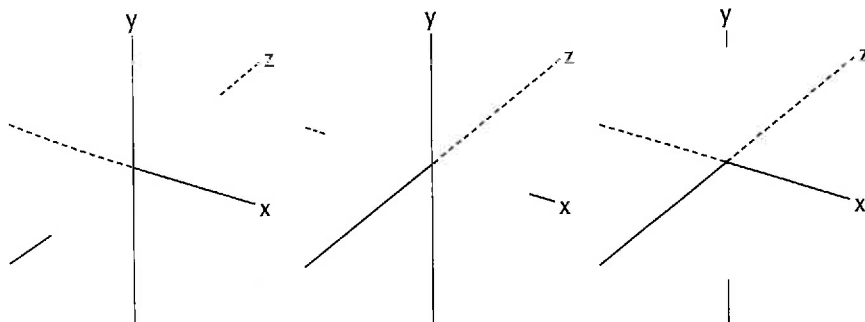



Figure 9


Each of these *p* orbitals can hold a maximum of two electrons, so all three together can hold a total of six electrons.

Figure 10

The neon atoms of this sign have eight valence electrons. The sign lights up because atoms first gain energy and then release this energy in the form of light.



Neon Atom



▶ **valence electron** an electron that is found in the outermost shell of an atom and that determines the atom's chemical properties

Every atom has between one and eight valence electrons

An electron in the outermost energy level of an atom is called a **valence electron**. Valence electrons determine an atom's chemical properties and its ability to form bonds. The single electron of a hydrogen atom is a valence electron because it is the only electron the atom has. The glowing red sign shown in **Figure 10** is made of neon atoms. In a neon atom, which has 10 electrons, 2 electrons fill the lowest energy level. Its valence electrons, then, are the 8 electrons that are farther away from the nucleus in the atom's second (and outermost) energy level.

SECTION 1 REVIEW

SUMMARY

- ▶ Elements are made of very small units called atoms.
- ▶ The nucleus of an atom is made of positively charged protons and uncharged neutrons.
- ▶ Negatively charged electrons surround the nucleus.
- ▶ Atoms have an equal number of protons and electrons.
- ▶ In Bohr's model of the atom, electrons orbit the nucleus in set paths.
- ▶ In the modern atomic model, electrons are found in orbitals within each energy level.
- ▶ Electrons in the outermost energy level are called valence electrons.

1. **Summarize** the main ideas of Dalton's atomic theory.
2. **Explain** why Dalton's theory was more successful than Democritus's theory.
3. **List** the charge, mass, and location of each of the three subatomic particles found within atoms.
4. **Explain** why oxygen atoms are neutral.
5. **Compare** an atom's structure to a ladder. What parts of the ladder correspond to the energy levels of the atom? Identify one way a real ladder is not a good model for the atom.
6. **Explain** how the path of an electron differs in Bohr's model and in the modern model of the atom.
7. **Critical Thinking** In the early 1900s, two associates of New Zealander Ernest Rutherford bombarded thin sheets of gold with positively charged subatomic particles. They found that most particles passed right through the sheets but some bounced back as if they had hit something solid. Based on their results, what do you think an atom is made of? What part of the atom caused the particles to bounce back? (**Hint:** Positive charges repel other positive charges.)

A Guided Tour of the Periodic Table

OBJECTIVES

- ▶ **Relate** the organization of the periodic table to the arrangement of electrons within an atom.
- ▶ **Explain** why some atoms gain or lose electrons to form ions.
- ▶ **Determine** how many protons, neutrons, and electrons an atom has, given its symbol, atomic number, and mass number.
- ▶ **Describe** how the abundance of isotopes affects an element's average atomic mass.

When you are in a store, are your favorite items placed randomly on the shelves? Usually similar items are grouped together, as shown in **Figure 11**, so that you can find what you need quickly. The periodic table organizes the elements in a similar way.

Organization of the Periodic Table

The periodic table groups similar elements together. This organization makes it easier to predict the properties of an element based on where it is in the periodic table. In the periodic table shown in **Figure 12**, elements are represented by their symbols and are arranged in a certain order. The order is based on the number of protons an atom of that element has in its nucleus.

A hydrogen atom has one proton, so hydrogen is the first element listed in the periodic table. A helium atom has two protons and is the second element listed. Elements are listed in this order in the periodic table because the **periodic law** states that when elements are arranged this way, similarities in their properties will occur in a regular pattern.

KEY TERMS

periodic law
period
group
ion
atomic number
mass number
isotope
atomic mass unit (amu)
average atomic mass

■ **periodic law** the law that states that the repeating chemical and physical properties of elements change periodically with the atomic numbers of the elements



Figure 11

In many stores, similar items are grouped so that they are easier to find.

Figure 12

The Periodic Table of the Elements

| | | | | | | | | | | | | | | | | | | | | |
|--------|---|--|--|--|--|---|--|---------|---|---------|--|---------|--|--|---|--|---|--|---|--|
| Period | 1 | 1 H Hydrogen 1.007 94 | | | | | | | | | | | | | | | | | | |
| | 2 | Group 1 | 3 Li Lithium 6.941 | | Group 2 | 4 Be Beryllium 9.012 182 | | | | | | | | | | | | | | |
| | 3 | | 11 Na Sodium 22.989 770 | | 12 Mg Magnesium 24.3050 | | Group 3 | Group 4 | Group 5 | Group 6 | Group 7 | Group 8 | Group 9 | | | | | | | |
| | 4 | | 19 K Potassium 39.0983 | | 20 Ca Calcium 40.078 | | 21 Sc Scandium 44.955 919 | | 22 Ti Titanium 47.867 | | 23 V Vanadium 50.9415 | | 24 Cr Chromium 51.9961 | | 25 Mn Manganese 54.938 049 | | 26 Fe Iron 55.845 | | 27 Co Cobalt 58.933 200 | |
| | 5 | | 37 Rb Rubidium 85.4678 | | 38 Sr Strontium 87.62 | | 39 Y Yttrium 88.905 85 | | 40 Zr Zirconium 91.224 | | 41 Nb Niobium 92.906 38 | | 42 Mo Molybdenum 95.94 | | 43 Tc Technetium (98) | | 44 Ru Ruthenium 101.07 | | 45 Rh Rhodium 102.905 50 | |
| | 6 | | 55 Cs Cesium 132.905 45 | | 56 Ba Barium 137.327 | | 57 La Lanthanum 138.9055 | | 72 Hf Hafnium 178.49 | | 73 Ta Tantalum 180.9479 | | 74 W Tungsten 183.84 | | 75 Re Rhenium 186.207 | | 76 Os Osmium 190.23 | | 77 Ir Iridium 192.217 | |
| | 7 | | 87 Fr Francium (223) | | 88 Ra Radium (226) | | 89 Ac Actinium (227) | | 104 Rf Rutherfordium (261) | | 105 Db Dubnium (262) | | 106 Sg Seaborgium (263) | | 107 Bh Bohrium (264) | | 108 Hs Hassium (265) | | 109 Mt Meitnerium (268)† | |

Key:

6 — Atomic number
C — Symbol
 Carbon — Name
 12.0107 — Average atomic mass

† Estimated from currently available IUPAC data.

* The systematic names and symbols for elements greater than 109 will be used until the approval of trivial names by IUPAC.

| | | | | |
|---|--|---|---|--|
| 58 Ce Cerium 140.116 | 59 Pr Praseodymium 140.907 65 | 60 Nd Neodymium 144.24 | 61 Pm Promethium (145) | 62 Sm Samarium 150.36 |
| 90 Th Thorium 232.0381 | 91 Pa Protactinium 231.035 88 | 92 U Uranium 238.0289 | 93 Np Neptunium (237) | 94 Pu Plutonium (244) |

internet connect

go hrw.com

TOPIC: Periodic Table
 GO TO: go.hrw.com
 KEYWORD: HNOPERIODIC

Visit the HRW Web site for updates on the periodic table.

Metals

- Alkali metals
- Alkaline-earth metals
- Transition metals
- Other metals

Group 18

2
He
Helium
4.002 602

Nonmetals

- Hydrogen
- Semiconductors
(also known as *metalloids*)
- Other nonmetals
- Halogens
- Noble gases

Group 13

5
B
Boron
10.811

Group 14

6
C
Carbon
12.0107

Group 15

7
N
Nitrogen
14.006 74

Group 16

8
O
Oxygen
15.9994

Group 17

9
F
Fluorine
18.998 4032

10
Ne
Neon
20.1797

13
Al
Aluminum
26.981 538

14
Si
Silicon
28.0855

15
P
Phosphorus
30.973 761

16
S
Sulfur
32.066

17
Cl
Chlorine
35.4527

18
Ar
Argon
39.948

Group 10

Group 11

Group 12

28
Ni
Nickel
58.6934

29
Cu
Copper
63.546

30
Zn
Zinc
65.39

31
Ga
Gallium
69.723

32
Ge
Germanium
72.61

33
As
Arsenic
74.921 60

34
Se
Selenium
78.96

35
Br
Bromine
79.904

36
Kr
Krypton
83.80

46
Pd
Palladium
106.42

47
Ag
Silver
107.8682

48
Cd
Cadmium
112.411

49
In
Indium
114.818

50
Sn
Tin
118.710

51
Sb
Antimony
121.760

52
Te
Tellurium
127.60

53
I
Iodine
126.904 47

54
Xe
Xenon
131.29

78
Pt
Platinum
195.078

79
Au
Gold
196.966 55

80
Hg
Mercury
200.59

81
Tl
Thallium
204.3833

82
Pb
Lead
207.2

83
Bi
Bismuth
208.980 38

84
Po
Polonium
(209)

85
At
Astatine
(210)

86
Rn
Radon
(222)

110
Uun*
Ununnilium
(269)[†]

111
Uuu*
Unununium
(272)[†]

112
Uub*
Ununbium
(277)[†]

114
Uuq*
Ununquadium
(285)[†]

A team at Lawrence Berkeley National Laboratories reported the discovery of elements 116 and 118 in June 1999. The same team retracted the discovery in July 2001. The discovery of element 114 has been reported but not confirmed.

63
Eu
Europium
151.964

64
Gd
Gadolinium
157.25

65
Tb
Terbium
158.925 34

66
Dy
Dysprosium
162.50

67
Ho
Holmium
164.930 32

68
Er
Erbium
167.26

69
Tm
Thulium
168.934 21

70
Yb
Ytterbium
173.04

71
Lu
Lutetium
174.967

95
Am
Americium
(243)

96
Cm
Curium
(247)

97
Bk
Berkelium
(247)

98
Cf
Californium
(251)

99
Es
Einsteinium
(252)

100
Fm
Fermium
(257)

101
Md
Mendelevium
(258)

102
No
Nobelium
(259)

103
Lr
Lawrencium
(262)

The atomic masses listed in this table reflect the precision of current measurements. (Values listed in parentheses are those of the element's most stable or most common isotope.) In calculations throughout the text, however, atomic masses have been rounded to two places to the right of the decimal.

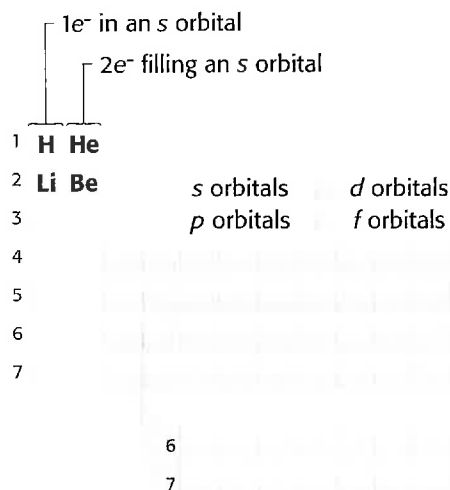
■ **period** a horizontal row of elements in the periodic table

■ **group (family)** a vertical column of elements in the periodic table



Figure 13

The electronic arrangement of atoms becomes increasingly more complex as you move further right across a period and further down a group of the periodic table.



The periodic table helps determine electron arrangement

Horizontal rows in the periodic table are called **periods**. Just as the number of protons an atom has increases by one as you move from left to right across a period, so does its number of electrons. You can determine how an atom's electrons are arranged if you know where the corresponding element is located in the periodic table.

Hydrogen and helium are both located in Period 1 of the periodic table. **Figure 13** shows that a hydrogen atom has one electron in an *s* orbital, while a helium atom has one more electron, for a total of two. Lithium is located in Period 2. The electron arrangement for lithium is just like that for a helium atom, except that lithium has a third electron in an *s* orbital in the second energy level, as follows:

| Energy level | Orbital | Number of electrons |
|--------------|----------|---------------------|
| 1 | <i>s</i> | 2 |
| 2 | <i>s</i> | 1 |

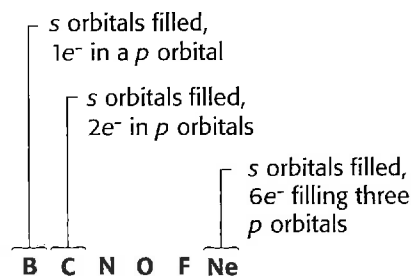
As you continue to move to the right in Period 2, you can see that a carbon atom has electrons in *s* orbitals and *p* orbitals. The locations of the six electrons in a carbon atom are as follows:

| Energy level | Orbital | Number of electrons |
|--------------|----------|---------------------|
| 1 | <i>s</i> | 2 |
| 2 | <i>s</i> | 2 |
| 2 | <i>p</i> | 2 |

A nitrogen atom has three electrons in *p* orbitals, an oxygen atom has four, and a fluorine atom has five. **Figure 13** shows that a neon atom has six electrons in *p* orbitals. Each orbital can hold two electrons, so all three *p* orbitals are filled.

Elements in the same group have similar properties

Valence electrons determine the chemical properties of atoms. Atoms of elements in the same **group**, or column, have the same number of valence electrons, so these elements have similar properties. Remember that these elements are not exactly alike, though, because atoms of these elements have different numbers of protons in their nuclei and different numbers of electrons in their filled inner energy levels.



Some Atoms Form Ions

Atoms of Group 1 elements are reactive because their outermost energy levels contain only one electron. Atoms that do not have filled outer s and p orbitals may undergo a process called ionization. That is, they may gain or lose valence electrons so that they have a full outermost s and/or p orbital. If an atom gains or loses electrons, it no longer has the same number of electrons as it does protons. Because the charges do not cancel completely as they did before, the **ion** that forms has a net electric charge, as shown for the lithium ion in **Figure 14**. Sodium chloride, or table salt, shown in **Figure 15** is made of sodium and chloride ions.

A lithium atom loses one electron to form a 1+ charged ion

Lithium is located in Group 1 of the periodic table. It is so reactive that it even reacts with the water vapor in the air. An electron is easily removed from a lithium atom, as shown in **Figure 14**. The atomic structure of lithium explains its reactivity. A lithium atom has three electrons. Two of these electrons occupy the first energy level in the s orbital, but only one electron occupies the second energy level. This single valence electron makes lithium very reactive. Removing this electron forms a positive ion, or *cation*.

A lithium ion, written as Li^+ , is much less reactive than a lithium atom because it has a full outer s orbital. Atoms of other Group 1 elements also have one valence electron. They are also reactive and behave similarly to lithium.

A fluorine atom gains one electron to form a 1- charged ion

Like lithium, fluorine is also very reactive. However, instead of losing an electron to become less reactive, an atom of the element fluorine gains one electron to form an ion with a 1- charge. Fluorine is located in Group 17 of the periodic table, and each atom has nine electrons. Two of these electrons occupy the first energy level, and seven valence electrons occupy the second energy level. A fluorine atom needs only one more electron to have a full outermost energy level. An atom of fluorine easily gains this electron to form a negative ion, or *anion*, as shown in **Figure 16**.

Ions of fluorine are called fluoride ions and are written as F^- . Because atoms of other Group 17 elements also have seven valence electrons, they are also reactive and behave similarly to fluorine.

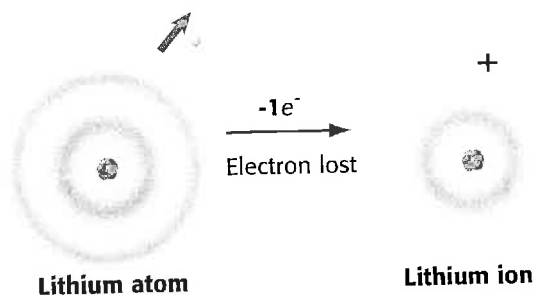


Figure 14

The valence electron of a reactive lithium atom may be removed to form a lithium ion, Li^+ , with a 1+ charge.

■ **ion** an atom or group of atoms that has lost or gained one or more electrons and has a negative or positive charge


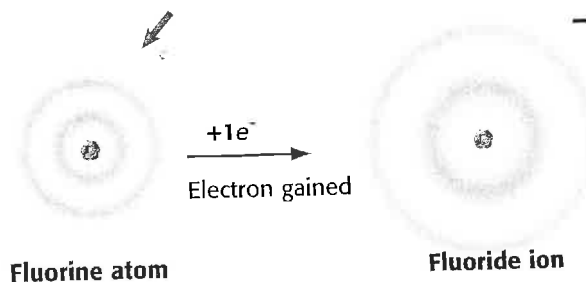


Figure 15

Table salt is made of sodium and chloride ions.

Figure 16

A fluorine atom easily gains one valence electron to form a fluoride ion, F^- , with a 1- charge.





Disc One, Module 3:

Periodic Properties

Use the Interactive Tutor to learn more about these topics.

- **atomic number** the number of protons in the nucleus of an atom
- **mass number** the sum of the numbers of protons and neutrons in the nucleus of an atom

Figure 17

Atoms of the same element have the same number of protons and therefore have the same atomic number. But they may have different mass numbers, depending on how many neutrons each atom has.

How Do the Structures of Atoms Differ?

As you have seen with lithium and fluorine, atoms of different elements have their own unique structures. Because these atoms have different structures, they have different properties. An atom of hydrogen found in a molecule of swimming-pool water has properties very different from an atom of uranium in nuclear fuel.

Atomic number equals the number of protons

The **atomic number**, Z , tells you how many protons are in an atom. Remember that atoms are always neutral because they have an equal number of protons and electrons. Therefore, the atomic number also equals the number of electrons the atom has. Each element has a different atomic number. For example, the simplest atom, hydrogen, has just one proton and one electron, so for hydrogen, $Z = 1$. The largest naturally occurring atom, uranium, has 92 protons and 92 electrons, so $Z = 92$ for uranium. The atomic number for a given element never changes.

Mass number equals the total number of subatomic particles in the nucleus

The **mass number**, A , of an atom equals the number of protons plus the number of neutrons. A fluorine atom has 9 protons and 10 neutrons, so $A = 19$ for fluorine. Oxygen has 8 protons and 8 neutrons, so $A = 16$ for oxygen. This mass number includes only the number of protons and neutrons (and not electrons) because protons and neutrons provide most of the atom's mass. Although atoms of an element always have the same atomic number, they can have different mass numbers. **Figure 17** shows which subatomic particles in the nucleus of an atom contribute to the atomic number and which contribute to the mass number.

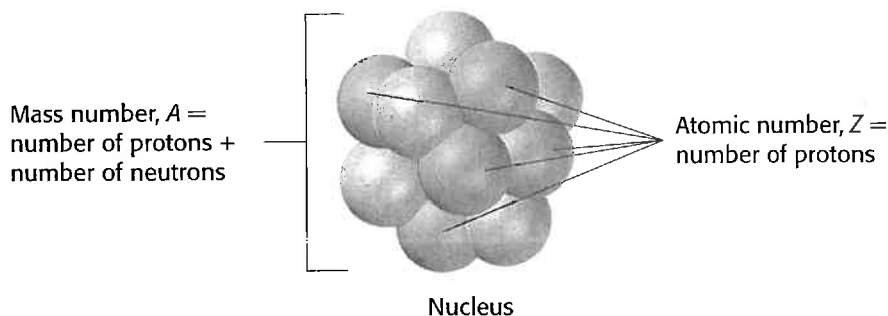
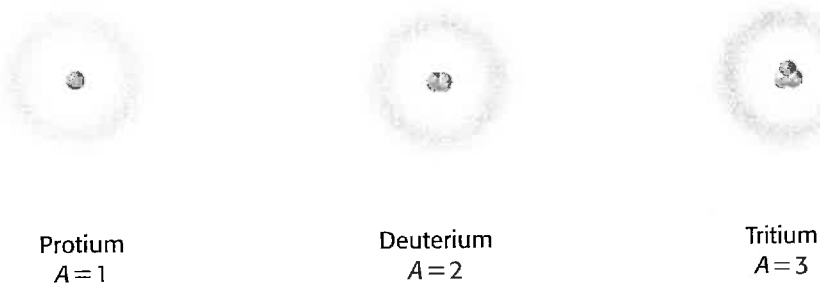


Figure 18

Protium has only a proton in its nucleus. Deuterium has both a proton and a neutron in its nucleus, while tritium has a proton and two neutrons.

Isotopes of Hydrogen



Isotopes of an element have different numbers of neutrons

Neutrons can be added to an atom without affecting the number of protons and electrons the atom is made of. Many elements have only one stable form, while other elements have different “versions” of their atoms. Each version has the same number of protons and electrons as all other versions but a different number of neutrons. These different versions, or **isotopes**, vary in mass but are all atoms of the same element because they each have the same number of protons.

The three isotopes of hydrogen, shown in **Figure 19**, have the same chemical properties because each is made of one proton and one electron. The most common hydrogen isotope, protium, has only a proton in its nucleus. A second isotope of hydrogen has a proton and a neutron. The mass number, A , of this second isotope is two, and the isotope is twice as massive. In fact, this isotope is sometimes called “heavy hydrogen.” It is also known as deuterium, or hydrogen-2. A third isotope has a proton and two neutrons in its nucleus. This third isotope, tritium, has a mass number of three.

Some isotopes are more common than others

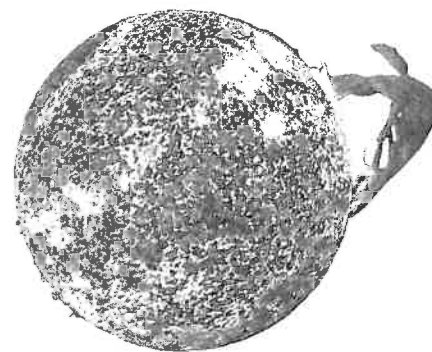
Hydrogen is present on both the sun and on Earth. In both places, protium (the hydrogen isotope without neutrons in its nucleus) is found most often. Only a very small fraction of the less common isotope of hydrogen, deuterium, is found on the sun and on Earth, as shown in **Figure 19**. Tritium is an unstable isotope that decays over time, so it is found least often.

■ **isotope** an atom that has the same number of protons as other atoms of the same element do but that has a different number of neutrons



Figure 19

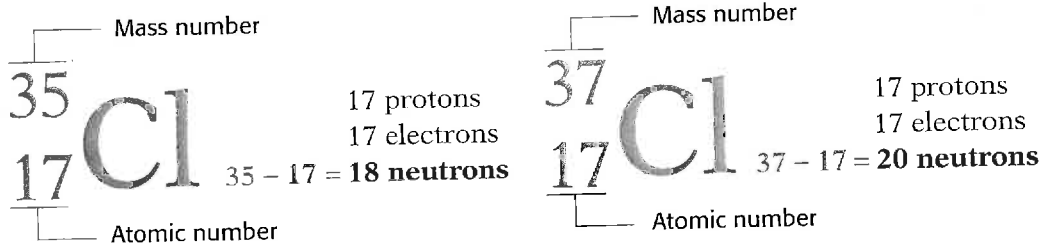
■ **Hydrogen** makes up less than 1% of Earth’s crust. Only 1 out of every 6000 of these hydrogen atoms is a deuterium isotope.



■ **Seventy-five percent** of the mass of the sun is hydrogen, with protium isotopes outnumbering deuterium isotopes 50 000 to 1.

Figure 20

One isotope of chlorine has 18 neutrons, while the other isotope has 20 neutrons.



Calculating the number of neutrons in an atom

Atomic numbers and mass numbers may be included along with the symbol of an element to represent different isotopes. The two isotopes of chlorine are represented this way in **Figure 20**. If you know the atomic number and mass number of an atom, you can calculate the number of neutrons it has.

Uranium has several isotopes. The isotope that is used in nuclear reactors is uranium-235, or ${}^{235}_{92}\text{U}$. Like all uranium atoms, it has an atomic number of 92, so it must have 92 protons and 92 electrons. It has a mass number of 235, which means its number of protons and neutrons together is 235. The number of neutrons must be 143.

■ **atomic mass unit (amu)**
a unit of mass that describes the mass of an atom or molecule; it is exactly one-twelfth of the mass of a carbon atom with mass number 12

■ **average atomic mass**
the weighted average of the masses of all naturally occurring isotopes of an element

| | |
|---------------------|-------------|
| Mass number (A): | 235 |
| Atomic number (Z): | <u>− 92</u> |
| Number of neutrons: | 143 |

The mass of an atom

The mass of a single atom is very small. A single fluorine atom has a mass less than one trillionth of a billionth of a gram. Because it is very hard to work with such tiny masses, atomic masses are usually expressed in atomic mass units. An **atomic mass unit (amu)** is equal to one-twelfth of the mass of a carbon-12 atom. This isotope of carbon has six protons and six neutrons, so individual protons and neutrons must each have a mass of about 1.0 amu because electrons contribute very little mass.

Often, the atomic mass listed for an element in the periodic table is an average atomic mass for the element as it is found in nature. The **average atomic mass** for an element is a weighted average, so the more commonly found isotopes have a greater effect on the average than rare isotopes.

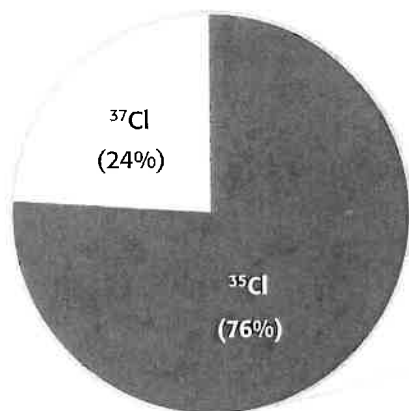
Figure 21 shows how the natural abundance of chlorine's two isotopes affects chlorine's average atomic mass. The average atomic mass of chlorine is 35.45 amu. This mass is much closer to 35 amu than to 37 amu. That's because the atoms of chlorine with masses of nearly 35 amu are found more often and therefore contribute more to chlorine's average atomic mass than chlorine atoms with masses of nearly 37 amu.

Quick ACTIVITY

Isotopes

Calculate the number of neutrons there are in the following isotopes. (Use the periodic table to find the atomic numbers.)

1. carbon-14
2. nitrogen-15
3. sulfur-35
4. calcium-45
5. iodine-131



17
Cl
Chlorine
35.4527

Average atomic mass

Figure 21

The average atomic mass of chlorine is closer to 35 amu than it is to 37 amu because ^{35}Cl isotopes are found more often than ^{37}Cl isotopes.

Note: Calculations using the values from the pie chart do not give a result of exactly 35.45 amu because of rounding.

SECTION 2 REVIEW

SUMMARY

- ▶ Elements are arranged in order of increasing atomic number so that elements with similar properties are in the same column, or group.
- ▶ Elements in the same group have the same number of valence electrons.
- ▶ Reactive atoms may gain or lose valence electrons to form ions.
- ▶ An atom's atomic number is its number of protons.
- ▶ An atom's mass number is its total number of protons and neutrons in the nucleus.
- ▶ Isotopes of an element have different numbers of neutrons, and therefore have different masses.
- ▶ An element's average atomic mass is a weighted average of the masses of its naturally occurring isotopes.

1. **Explain** how you can determine the number of protons, electrons, and neutrons an atom has from an atom's mass number and its atomic number.
2. **Calculate** how many neutrons a phosphorus-32 atom has.
3. **Name** the elements represented by the following symbols:

| | | |
|-------|-------|-------|
| a. Li | d. Br | g. Na |
| b. Mg | e. He | h. Fe |
| c. Cu | f. S | i. K |
4. **Compare** the number of valence electrons an oxygen, O, atom has with the number of valence electrons a selenium, Se, atom has. Are oxygen and selenium in the same period or group?
5. **Explain** why some atoms gain or lose electrons to form ions.
6. **Predict** which isotope of nitrogen is more commonly found, nitrogen-14 or nitrogen-15. (**Hint:** What is the average atomic mass listed for nitrogen in the periodic table?)
7. **Describe** why the elements in the periodic table are arranged in order of increasing atomic number.
8. **Critical Thinking** Before 1937, all naturally occurring elements had been discovered, but no one had found any trace of element 43. Chemists were still able to predict the chemical properties of this element (now called technetium), which is widely used today for diagnosing medical problems. How were these predictions possible? Which elements would you expect to be similar to technetium?

Families of Elements

KEY TERMS

metal
nonmetal
semiconductor
alkali metal
alkaline-earth metal
transition metal
halogen
noble gas

OBJECTIVES

- ▶ **Locate** alkali metals, alkaline-earth metals, and transition metals in the periodic table.
- ▶ **Locate** semiconductors, halogens, and noble gases in the periodic table.
- ▶ **Relate** an element's chemical properties to the electron arrangement of its atoms.

You may have wondered why groups in the periodic table are sometimes called families. Consider your own family. Though each member is unique, you all share certain similarities. All members of the family shown in *Figure 22A*, for example, have a similar appearance. Members of a family in the periodic table have many chemical and physical properties in common because they have the same number of valence electrons.




Figure 22

- A** Just like the members of this family,
B elements in the periodic table share certain similarities.



How Are Elements Classified?

Think of each element as a member of a family that is also related to other elements nearby. Elements are classified as metals or nonmetals, as shown in *Figure 22B*. This classification groups elements that have similar physical and chemical properties.

| | | | | | | | | | | | | | | | | | | | | | | | | | | | | | | | | | | | | | | | | | | | | | | | | | | | | | | | | | | | | | | | | | | | | | | | | | | |
|--|----|----|----|-----|-----|-----|-----|-----|-----|------|------|------|-----|------|----|------|----|------|----|----|----|----|----|----|----|----|----|----|----|----|----|----|----|----|----|----|----|----|----|----|----|----|----|----|----|----|----|----|----|----|----|----|----|----|----|----|-----|-----|-----|-----|----|----|---|----|----|----|----|----|----|----|----|----|----|----|
| 1 | 2 | | | | | | | | | | | 13 | 14 | 15 | 16 | 17 | 18 | | | | | | | | | | | | | | | | | | | | | | | | | | | | | | | | | | | | | | | | | | | | | | | | | | | | | | | | | |
| 1 | 2 | | | | | | | | | | | | | | | | | 2 | | | | | | | | | | | | | | | | | | | | | | | | | | | | | | | | | | | | | | | | | | | | | | | | | | | | | | | | |
| 3 | 4 | | | | | | | | | | | | | | | | | | | | | | | | | | | | | | | | | | | | | | | | | | | | | | | | | | | | | | | | | | | | | | | | | | | | | | | | | |
| 2 | 3 | 4 | | | | | | | | | | | 5 | 6 | 7 | 8 | 9 | 10 | | | | | | | | | | | | | | | | | | | | | | | | | | | | | | | | | | | | | | | | | | | | | | | | | | | | | | | | |
| | Li | Be | | | | | | | | | | | B | C | N | O | F | Ne | | | | | | | | | | | | | | | | | | | | | | | | | | | | | | | | | | | | | | | | | | | | | | | | | | | | | | | | |
| 3 | 11 | 12 | | | | | | | | | | | 13 | 14 | 15 | 16 | 17 | 18 | | | | | | | | | | | | | | | | | | | | | | | | | | | | | | | | | | | | | | | | | | | | | | | | | | | | | | | | |
| | Na | Mg | | | | | | | | | | | Al | Si | P | S | Cl | Ar | | | | | | | | | | | | | | | | | | | | | | | | | | | | | | | | | | | | | | | | | | | | | | | | | | | | | | | | |
| 4 | 19 | 20 | 21 | 22 | 23 | 24 | 25 | 26 | 27 | 28 | 29 | 30 | 31 | 32 | 33 | 34 | 35 | 36 | | | | | | | | | | | | | | | | | | | | | | | | | | | | | | | | | | | | | | | | | | | | | | | | | | | | | | | | |
| | K | Ca | Sc | Ti | V | Cr | Mn | Fe | Co | Ni | Cu | Zn | Ga | Ge | As | Se | Br | Kr | | | | | | | | | | | | | | | | | | | | | | | | | | | | | | | | | | | | | | | | | | | | | | | | | | | | | | | | |
| 5 | 37 | 38 | 39 | 40 | 41 | 42 | 43 | 44 | 45 | 46 | 47 | 48 | 49 | 50 | 51 | 52 | 53 | 54 | | | | | | | | | | | | | | | | | | | | | | | | | | | | | | | | | | | | | | | | | | | | | | | | | | | | | | | | |
| | Rb | Sr | Y | Zr | Nb | Mo | Tc | Ru | Rh | Pd | Ag | Cd | In | Sn | Sb | Te | I | Xe | | | | | | | | | | | | | | | | | | | | | | | | | | | | | | | | | | | | | | | | | | | | | | | | | | | | | | | | |
| 6 | 55 | 56 | 57 | 72 | 73 | 74 | 75 | 76 | 77 | 78 | 79 | 80 | 81 | 82 | 83 | 84 | 85 | 86 | | | | | | | | | | | | | | | | | | | | | | | | | | | | | | | | | | | | | | | | | | | | | | | | | | | | | | | | |
| | Cs | Ba | La | Hf | Ta | W | Re | Os | Ir | Pt | Au | Hg | Tl | Pb | Bi | Po | At | Rn | | | | | | | | | | | | | | | | | | | | | | | | | | | | | | | | | | | | | | | | | | | | | | | | | | | | | | | | |
| 7 | 87 | 88 | 89 | 104 | 105 | 106 | 107 | 108 | 109 | 110 | 111 | 112 | | 114 | | 116 | | 118 | | | | | | | | | | | | | | | | | | | | | | | | | | | | | | | | | | | | | | | | | | | | | | | | | | | | | | | | |
| | Fr | Ra | Ac | Rf | Db | Sg | Bh | Hs | Mt | Uun* | Uuu* | Uub* | | Uuq* | | Uuh* | | Uuo* | | | | | | | | | | | | | | | | | | | | | | | | | | | | | | | | | | | | | | | | | | | | | | | | | | | | | | | | |
| Metals | | | | | | | | | | | | | | | | | | | | | | | | | | | | | | | | | | | | | | | | | | | | | | | | | | | | | | | | | | | | | | | | | | | | | | | | | | |
| Nonmetals | | | | | | | | | | | | | | | | | | | | | | | | | | | | | | | | | | | | | | | | | | | | | | | | | | | | | | | | | | | | | | | | | | | | | | | | | | |
| <table border="1"> <tr> <td>58</td><td>59</td><td>60</td><td>61</td><td>62</td><td>63</td><td>64</td><td>65</td><td>66</td><td>67</td><td>68</td><td>69</td><td>70</td><td>71</td> </tr> <tr> <td>Ce</td><td>Pr</td><td>Nd</td><td>Pm</td><td>Sm</td><td>Eu</td><td>Gd</td><td>Tb</td><td>Dy</td><td>Ho</td><td>Er</td><td>Tm</td><td>Yb</td><td>Lu</td> </tr> <tr> <td>90</td><td>91</td><td>92</td><td>93</td><td>94</td><td>95</td><td>96</td><td>97</td><td>98</td><td>99</td><td>100</td><td>101</td><td>102</td><td>103</td> </tr> <tr> <td>Th</td><td>Pa</td><td>U</td><td>Np</td><td>Pu</td><td>Am</td><td>Cm</td><td>Bk</td><td>Cf</td><td>Es</td><td>Fm</td><td>Md</td><td>No</td><td>Lr</td> </tr> </table> | | | | | | | | | | | | | | | | | | | 58 | 59 | 60 | 61 | 62 | 63 | 64 | 65 | 66 | 67 | 68 | 69 | 70 | 71 | Ce | Pr | Nd | Pm | Sm | Eu | Gd | Tb | Dy | Ho | Er | Tm | Yb | Lu | 90 | 91 | 92 | 93 | 94 | 95 | 96 | 97 | 98 | 99 | 100 | 101 | 102 | 103 | Th | Pa | U | Np | Pu | Am | Cm | Bk | Cf | Es | Fm | Md | No | Lr |
| 58 | 59 | 60 | 61 | 62 | 63 | 64 | 65 | 66 | 67 | 68 | 69 | 70 | 71 | | | | | | | | | | | | | | | | | | | | | | | | | | | | | | | | | | | | | | | | | | | | | | | | | | | | | | | | | | | | | |
| Ce | Pr | Nd | Pm | Sm | Eu | Gd | Tb | Dy | Ho | Er | Tm | Yb | Lu | | | | | | | | | | | | | | | | | | | | | | | | | | | | | | | | | | | | | | | | | | | | | | | | | | | | | | | | | | | | | |
| 90 | 91 | 92 | 93 | 94 | 95 | 96 | 97 | 98 | 99 | 100 | 101 | 102 | 103 | | | | | | | | | | | | | | | | | | | | | | | | | | | | | | | | | | | | | | | | | | | | | | | | | | | | | | | | | | | | | |
| Th | Pa | U | Np | Pu | Am | Cm | Bk | Cf | Es | Fm | Md | No | Lr | | | | | | | | | | | | | | | | | | | | | | | | | | | | | | | | | | | | | | | | | | | | | | | | | | | | | | | | | | | | | |

Note: Sometimes the boxed elements toward the right side of the periodic table are classified as a separate group and called semiconductors or metalloids.

Elements are classified into three groups

As you can see in *Figure 22B*, most elements are **metals**. Most metals are shiny solids that can be stretched and shaped. They are also good conductors of heat and electricity. All **nonmetals**, except for hydrogen, are found on the right side of the periodic table. Nonmetals may be solids, liquids, or gases. Solid nonmetals are typically dull and brittle and are poor conductors of heat and electricity. But some elements that are classified as nonmetals can conduct under certain conditions. These elements are sometimes considered to be their own group and are called **semiconductors** or metalloids.

- **metal** an element that is shiny and conducts heat and electricity well
- **nonmetal** an element that conducts heat and electricity poorly
- **semiconductor** an element or compound that conducts electric current better than an insulator but not as well as a conductor does
- **alkali metal** one of the elements of Group 1 of the periodic table

Metals

Many elements are classified as metals. To further classify metals, similar metals are grouped together. There are four different kinds of metals. Two groups of metals are located on the left side of the periodic table. Other metals, like aluminum, tin, and lead, are located toward the right side of the periodic table. Most metals, though, are located in the middle of the periodic table.

The alkali metals are very reactive

Sodium is found in Group 1 of the periodic table, as shown in *Figure 23A*. Like other **alkali metals** it is soft and shiny and reacts violently with water. Sodium must be stored in oil, as in *Figure 23B*, to prevent it from reacting with moisture in the air.

An atom of an alkali metal is very reactive because it has one valence electron that can easily be removed to form a positive ion. You have already seen in Section 2 how lithium, another alkali metal, forms positive ions with a 1+ charge. Similarly, the valence electron of a sodium atom can be removed to form the positive sodium ion Na^+ .


Because alkali metals such as sodium are so reactive, they are not found in nature as elements. Instead, they combine with other elements to form compounds. For example, the salt you use to season your food is actually the compound sodium chloride, NaCl .

Figure 23

■ The alkali metals are located on the left edge of the periodic table.

Alkali Metals

■ The alkali metal sodium must be stored in oil. Otherwise, it will react violently with moisture and oxygen in the air.



Group 1

3

Li
Lithium
6.941

11

Na
Sodium
22.989 770

19

K
Potassium
39.0983

37

Rb
Rubidium
85.4678

55

Cs
Cesium
132.905 45

87

Fr
Francium
(223)

Quick ACTIVITY

Elements in Your Food

1. For 1 day, make a list of the ingredients in all the foods and drinks you consume.
2. Identify which ingredients on your list are compounds.
3. For each compound on your list, try to figure out what elements it is made of.

- **alkaline-earth metal** one of the elements of Group 2 of the periodic table

Group 2

4

Be

Beryllium
9.012 182

12

Mg

Magnesium
24.3050

20

Ca

Calcium
40.078

38

Sr

Strontium
87.62

56

Ba

Barium
137.327

88

Ra

Radium
(226)

Alkaline-earth metals form compounds that are found in limestone and in the human body

Calcium is in Group 2 of the periodic table, as shown in *Figure 24A*, and is an **alkaline-earth metal**. Atoms of alkaline-earth metals, such as calcium, have two valence electrons. Alkaline-earth metals are less reactive than alkali metals, but they may still react to form positive ions with a 2+ charge. When the valence electrons of a calcium atom are removed, a calcium ion, Ca^{2+} , forms. Alkaline-earth metals like calcium also combine with other elements to form compounds.

Calcium compounds make up the hard shells of many sea animals. When the animals die, their shells settle to form large deposits that eventually become limestone or marble, both of which are very strong materials used in construction. Coral is one example of a limestone structure. The “skeletons” of millions of tiny animals combine to form sturdy coral reefs that many fish rely on for protection, as shown in *Figure 24B*. Your bones and teeth also get their strength from calcium compounds.

Magnesium is another alkaline-earth metal that has properties similar to calcium. Magnesium is the lightest of all structural metals and is used to build some airplanes. Magnesium, as Mg^{2+} , activates many of the enzymes that speed up processes in the human body. Magnesium also combines with other elements to form many useful compounds. Two magnesium compounds are commonly used medicines—milk of magnesia and Epsom salts.

Figure 24

A The alkaline-earth metals make up the second column of elements from the left edge of the periodic table.

B Fish can escape their predators by hiding among the hard projections of limestone coral reefs that are made of calcium compounds.



Alkaline-earth Metals



Transition Metals

Figure 25

A The transition metals are located in the middle of the periodic table.



B The transition metals platinum, gold, and silver are often shaped to make jewelry.

Gold, silver and platinum are transition metals

Gold is a valuable **transition metal**. *Figure 25A* shows that the transition metals are located in Groups 3–12 of the periodic table. Unlike most other transition metals, gold is not found combined with other elements as an ore but as the free metal.

Transition metals, like gold, are much less reactive than sodium or calcium, but they can lose electrons to form positive ions too. There are two possible cations that a gold atom can form. If an atom of gold loses only one electron, it forms Au^+ . If the atom loses three electrons, it forms Au^{3+} . Some transition metals can form as many as four differently charged cations because of their complex arrangement of electrons.

All metals, including transition metals, conduct heat and electricity. Most metals can also be stretched and shaped into flat sheets, or pulled into wire. Because gold, silver, and platinum are the shiniest metals, they are often molded into different kinds of jewelry, as shown in *Figure 25B*.

There are many other useful transition metals. Copper is often used for electrical wiring or plumbing. Light bulb filaments are made of tungsten. Iron, cobalt, copper, and manganese play vital roles in your body chemistry. Mercury, shown in *Figure 26*, is the only metal that is a liquid at room temperature. It is often used in thermometers because it flows quickly and easily without sticking to glass.

transition metal one of the elements of Groups 3–12 of the periodic table

VOCABULARY Skills Tip

The properties of transition metals gradually transition, or shift, from being more similar to Group 2 elements to being more similar to Group 13 elements as you move from left to right across a period.




Figure 26

Mercury is an unusual metal because it is a liquid at room temperature. Continued exposure to this volatile metal can harm you because if you breathe in the vapor, it accumulates in your body.

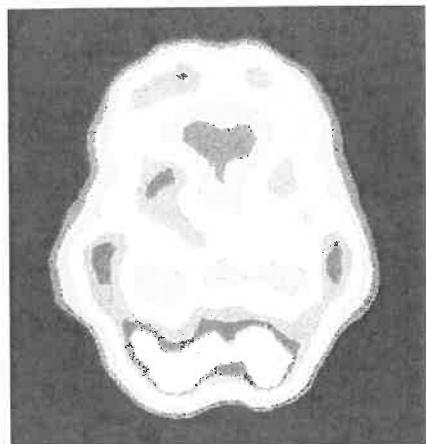


Figure 27

With the help of the radioactive isotope technetium-99, doctors are able to confirm that this patient has a healthy brain.

Technetium and promethium are synthetic elements

Technetium and promethium are both man-made elements. They are also both *radioactive*, which means the nuclei of their atoms are continually decaying to produce different elements. There are several different isotopes of technetium. The most stable isotope is technetium-99, which has 56 neutrons. Technetium-99 can be used to diagnose cancer as well as other medical problems in soft tissues of the body, as shown in **Figure 27**.

When looking at the periodic table, you might have wondered why part of the last two periods of the transition metals are placed toward the bottom. This keeps the periodic table narrow so that similar elements elsewhere in the table still line up. Promethium is one element located in this bottom-most section. Its most useful isotope is promethium-147, which has 86 neutrons. Promethium-147 is an ingredient in some “glow-in-the-dark” paints.

All elements with atomic numbers greater than 92 are also man-made and are similar to technetium and promethium. For example, americium, another element in the bottom-most section of the periodic table, is also radioactive. Tiny amounts of americium-241 are found in most household smoke detectors. Although even small amounts of radioactive material can affect you, americium-241 is safe when contained inside your smoke detector.

Quick Lab

Why do some metals cost more than others?

1. The table at right gives the abundance of some metals in Earth’s crust. List the metals in order from most to least abundant.
2. List the metals in order of price, from the cheapest to the most expensive
3. Create a spreadsheet that can be used to calculate how many grams of each metal you could buy with \$100.

COMPUTER SKILL

Analysis

1. If the price of a metal depends on its abundance, you would expect the order to be the same on both lists. How well do the two lists match? Mention any exceptions.
2. The order of reactivity of these metals, from most reactive to least reactive, is aluminum, zinc, chromium, iron, tin, copper, silver, and gold. Use this information to explain any exceptions you noticed in item 3.

| Metal | Abundance in Earth’s crust (%) | Price (\$/kg) |
|---------------|--------------------------------|---------------|
| Aluminum (Al) | 8.2 | 1.55 |
| Chromium (Cr) | 0.01 | 0.06 |
| Copper (Cu) | 0.0060 | 2.44 |
| Gold (Au) | 0.000 0004 | 11 666.53 |
| Iron (Fe) | 5.6 | 0.03 |
| Silver (Ag) | 0.000 007 | 154.97 |
| Tin (Sn) | 0.0002 | 6.22 |
| Zinc (Zn) | 0.007 | 1.29 |

Nonmetals

Except for hydrogen, nonmetals are found on the right side of the periodic table. They include some elements in Groups 13–16 and all the elements in Groups 17 and 18.

Carbon is found in three different forms and can also form many compounds

Carbon and other nonmetals are found on the right side of the periodic table, as shown in **Figure 28A**. Although carbon in its pure state is usually found as graphite (pencil “lead”) or diamond, the existence of fullerenes, a third form, was confirmed in 1990. The most famous fullerene consists of a cluster of 60 carbon atoms, as shown in **Figure 28B**.

Carbon can also combine with other elements to form millions of carbon-containing compounds. Carbon compounds are found in both living and nonliving things. Glucose, $C_6H_{12}O_6$, is a sugar in your blood. A type of chlorophyll, $C_{55}H_{72}O_5N_4Mg$, is found in all green plants. Many gasolines contain isooctane, C_8H_{18} , while rubber tires are made of large molecules with many repeating C_5H_8 units.

Nonmetals and their compounds are plentiful on Earth


Oxygen, nitrogen, and sulfur are other common nonmetals. Each may form compounds or gain electrons to form the negative ions oxide, O^{2-} , sulfide, S^{2-} , and nitride, N^{3-} . The most plentiful gases in the air are the nonmetals nitrogen and oxygen. Although sulfur itself is an odorless yellow solid, many sulfur compounds, like those in rotten eggs and skunk spray, are known for their terrible smell.

Figure 28

Most nonmetals are located on the right side of the periodic table.

Nonmetals

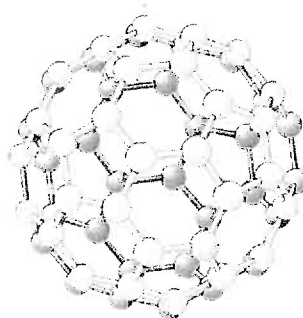
Connection to ARCHITECTURE



The discoverers of the first and most famous fullerene named the molecule *buckminsterfullerene*. Its structure resembles a geodesic dome, a kind of structure designed by American engineer and inventor R. Buckminster Fuller. A geodesic dome encloses the most space using the fewest materials. Any strains caused by the ground shifting or strong winds have little effect on a geodesic dome. That's because the strains are spread evenly throughout the entire structure. These sturdy structures have been used successfully as radar towers in Antarctica in winds as strong as 90 m/s (200 mi/h) for over 25 years. Geodesic domes provide the framework for some sports arenas, theaters, greenhouses, and even some homes.

Making the Connection

1. How does the shape of a geodesic dome differ from a more typical building?
2. Explain why energy savings are greater in this kind of structure than in a boxlike building that encloses the same amount of space.



The way carbon atoms are connected in the most recently discovered form of carbon resembles the familiar pattern of a soccer ball.

■ **halogen** one of the elements of Group 17 of the periodic table

INTEGRATING



EARTH SCIENCE

Eighty-one elements have been detected in sea water. Magnesium and bromine are two such elements. To recover an element from a sample of sea water, you must evaporate some of the water from the sample. Sodium chloride then crystallizes and the liquid that remains becomes more concentrated in bromide, magnesium, and other ions than the original sea water was, making their recovery easier.

Group 17

9

F

Fluorine
18.998 4032

17

Cl

Chlorine
35.4527

35

Br

Bromine
79.904

53

I

Iodine
126.904 47

85

At

Astatine
(210)

Chlorine is a halogen that protects you from harmful bacteria

Chlorine and other **halogens** are located in Group 17 of the periodic table, as shown in **Figure 29A**. You have probably noticed the strong smell of chlorine in swimming pools. Chlorine is widely used to kill bacteria in pools, like the one shown in **Figure 29B**, as well as in drinking-water supplies.

Like fluorine atoms, which you learned about in Section 2, chlorine atoms are very reactive. As a result, chlorine forms compounds. For example, the chlorine in most swimming pools is added in the form of the compound calcium hypochlorite, $\text{Ca}(\text{OCl})_2$. Elemental chlorine is a poisonous yellowish green gas made of pairs of joined chlorine atoms. Chlorine gas has the chemical formula Cl_2 . A chlorine atom may also gain an electron to form a negative chloride ion, Cl^- . The attractions between Na^+ ions and Cl^- ions form table salt, NaCl .

Fluorine, bromine, and iodine are other Group 17 elements. Fluorine is a poisonous yellowish gas, bromine is a dark red liquid, and iodine is a dark purple solid. Atoms of each of these elements can also form compounds by gaining an electron to become negative ions. A compound containing the negative ion fluoride, F^- , is used in some toothpastes and added to some water supplies to help prevent tooth decay. Adding a compound containing iodine as the negative ion iodide, I^- , to table salt makes “iodized” salt. You need this ion in your diet for your thyroid gland to function properly.

Figure 29

A The halogens are in the second column from the right of the periodic table.

B Chlorine keeps pool water bacteria-free for swimmers to enjoy.



Halogens

The noble gases are inert

Neon is one of the **noble gases** that make up Group 18 of the periodic table, as shown in **Figure 30A**. It is responsible for the bright reddish orange light of “neon” signs. **Figure 30B** shows how mixing neon with another substance, such as mercury, can change the color of a sign.

The noble gases are different from most elements that are gases because they exist as single atoms instead of as molecules. Like other members of Group 18, neon is inert, or unreactive, because its *s* and *p* orbitals are full of electrons. For this reason, neon and other noble gases do not gain or lose electrons to form ions. They also don't join with other atoms to form compounds under normal conditions.

Helium and argon are other common noble gases. Helium is less dense than air and is used to give lift to blimps and balloons. Argon is used to fill light bulbs because its lack of reactivity prevents filaments from burning.

Semiconductors are intermediate conductors of heat and electricity

Figure 31 shows that the elements sometimes referred to as semiconductors or metalloids are clustered toward the right side of the periodic table. Only six elements—boron, silicon, germanium, arsenic, antimony, and tellurium—are semiconductors. Although these elements are classified as nonmetals, each one also has some properties of metals. And as their name implies, semiconductors are able to conduct heat and electricity under certain conditions.

Boron is an extremely hard element. It is often added to steel to increase steel's hardness and strength at high temperatures. Compounds of boron are often used to make heat-resistant glass. Arsenic is a shiny solid that tarnishes when exposed to air. Antimony is a bluish white, brittle solid that also shines like a metal. Some compounds of antimony are used as fire retardants. Tellurium is a silvery white solid whose ability to conduct increases slightly with exposure to light.

Figure 30

A The noble gases are located on the right edge of the periodic table.



Noble Gases

B A neon sign is usually reddish orange, but adding a few drops of mercury makes the light a bright blue.



Group 18

2

He

Helium

4.002 602

10

Ne

Neon

20.1797

18

Ar

Argon

39.948

36

Kr

Krypton

83.90

54

Xe

Xenon

131.29

86

Rn

Radon

(222)

■ **noble gas** an unreactive element of Group 18 of the periodic table

Semiconductors

Figure 31

Semiconductors are located toward the right side of the periodic table.




Figure 32

Silicon chips are the basic building blocks of computers.

Silicon is the most familiar semiconductor

Silicon atoms, usually in the form of compounds, account for 28% of the mass of Earth's crust. Sand is made of the most common silicon compound, called silicon dioxide, SiO_2 . Small chips made of silicon, like those shown in **Figure 32**, are used in the internal parts of computers.

Silicon is also an important component of other semiconductor devices such as transistors, LED display screens, and solar cells. Impurities such as boron, aluminum, phosphorus, and arsenic are added to the silicon to increase its ability to conduct electricity. These impurities are usually added only to the surface of the chip. This process can be used to make chips of different conductive abilities. This wide range of possible semiconductor devices has led to great advances in electronic technology.

SECTION 3 REVIEW

SUMMARY

- ▶ Metals are shiny solids that conduct heat and electricity.
- ▶ Alkali metals, located in Group 1 of the periodic table, are very reactive.
- ▶ Alkaline-earth metals, located in Group 2, are less reactive than alkali metals.
- ▶ Transition metals, located in Groups 3–12, are not very reactive.
- ▶ Nonmetals usually do not conduct heat or electricity well.
- ▶ Nonmetals include the inert noble gases in Group 18, the reactive halogens in Group 17, and some elements in Groups 13–16.
- ▶ Semiconductors are nonmetals that are intermediate conductors of heat and electricity.

1. **Classify** the following elements as alkali, alkaline-earth, or transition metals based on their positions in the periodic table:
 - a. iron, Fe
 - b. potassium, K
 - c. strontium, Sr
 - d. platinum, Pt
2. **Predict** whether cesium forms Cs^+ or Cs^{2+} ions.
3. **Describe** why chemists might sometimes store reactive chemicals in argon, Ar. To which family does argon belong?
4. **Determine** whether the following elements are more likely to be a metal or nonmetal:
 - a. a shiny substance used to make flexible bed springs
 - b. a yellow powder from underground mines
 - c. a gas that does not react
 - d. a conducting material used within flexible wires
5. **Describe** why atoms of bromine, Br, are so reactive. To which family does bromine belong?
6. **Predict** the charge of a beryllium ion.
7. **Identify** which element is more reactive: lithium, Li, or beryllium, Be.
8. **Creative Thinking** Imagine you are a scientist who has just discovered a new element. You have confirmed that the element is a metal but are unsure whether it is an alkali metal, an alkaline-earth metal, or a transition metal. Write a paragraph describing the additional tests you can do to further classify this metal.

**WRITING
SKILL**

Using Moles to Count Atoms

OBJECTIVES

- ▶ **Explain** the relationship between a mole of a substance and Avogadro's constant.
- ▶ **Find** the molar mass of an element by using the periodic table.
- ▶ **Solve** problems converting the amount of an element in moles to its mass in grams, and vice versa.

KEY TERMS

mole
Avogadro's constant
molar mass
conversion factor

Counting objects is one of the very first things children learn to do. Counting is easy when the objects being counted are not too small and there are not too many of them. But can you imagine counting the grains of sand along a stretch of beach or the stars in the night-time sky?

Counting Things

When people count out large numbers of small things, they often simplify the job by using counting units. For example, when you order popcorn at a movie theater, the salesperson does not count out the individual popcorn kernels to give you. Instead, you specify the size of container you want, and that determines how much popcorn you get. So the “counting unit” for popcorn is the size of the container: small, medium, or large.


There are many different counting units

The counting units for popcorn are only an approximation and are not exact. Everyone who orders a large popcorn will not get exactly the same number of popcorn kernels. Many other items, however, require more-exact counting units, as shown in *Figure 33*. For example, you cannot buy just one egg at the grocery store. Eggs are packaged by the dozen. Copy shops buy paper in reams, or 500-sheet bundles.

An object's mass may sometimes be used to “count” it. For example, if a candy shopkeeper knows that 10 gumballs have a mass of 21.4 g, then the shopkeeper can assume that there are 50 gumballs on the scale when the mass is 107 g ($21.4 \text{ g} \times 5$).

Figure 33

Eggs are counted by the dozen, and paper is counted by the ream.



Did You Know?

Did you know that Avogadro never knew his own constant? Count Amedeo Avogadro (1776–1856) was a lawyer who became interested in mathematics and physics. Avogadro's constant was actually determined by Joseph Loschmidt, a German physicist in 1865, nine years after Avogadro's death.



The mole is useful for counting small particles

Because chemists often deal with large numbers of small particles, they use a large counting unit—the **mole**, abbreviated *mol*. A mole is a collection of a very large number of particles.

About 602 213 670 000 000 000 000 000!

This number is usually written as $6.022 \times 10^{23}/\text{mol}$ and is referred to as **Avogadro's constant**. The constant is named in honor of the Italian scientist Amedeo Avogadro. Avogadro's constant is defined as the number of particles, 6.022×10^{23} , in exactly 1 mol of a pure substance.

One mole of gumballs is 6.022×10^{23} gumballs. One mole of popcorn is 6.022×10^{23} kernels of popcorn. This amount of popcorn would cover the United States and form a pile about 500 km (310 mi) high! It is unlikely that you will ever come in contact with this much gum or popcorn, so it does not make sense to use moles to count either of these items. The mole is useful, however, for counting atoms.

You might wonder why 6.022×10^{23} represents the number of particles in 1 mol. The mole has been defined as the number of atoms in 12.00 grams of carbon-12. Experiments have shown that 6.022×10^{23} is the number of carbon-12 atoms in 12.00 g of carbon-12. One mole of carbon consists of 6.022×10^{23} carbon atoms, with an average atomic mass of 12.01 amu.

▶ **mole** the SI base unit used to measure the amount of a substance whose number of particles is the same as the number of atoms of carbon in 12 g of carbon-12

▶ **Avogadro's constant** equals $6.022 \times 10^{23}/\text{mol}$; the number of particles in 1 mol

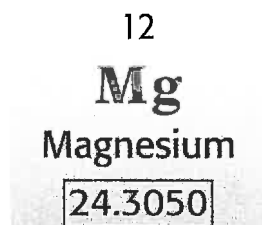
▶ **molar mass** the mass in grams of 1 mol of a substance

Moles and grams are related

The mass in grams of 1 mol of a substance is called its **molar mass**. For example, 1 mol of carbon-12 atoms has a molar mass of 12.00 g. But a mole of an element will usually include atoms of several isotopes. So the molar mass of an element in grams is the same as its average atomic mass in amu, which is listed in the periodic table. The average atomic mass for carbon is 12.01 amu. One mole of carbon, then, has a mass of 12.01 g. **Figure 34** demonstrates this idea for magnesium.

Figure 34

One mole of magnesium (6.022×10^{23} Mg atoms) has a mass of 24.30 g. Note that the balance is only accurate to one-tenth of a gram, so it reads 24.3 g.



Calculating with Moles

Because the amount of a substance and its mass are related, it is often useful to convert moles to grams, and vice versa. You can use **conversion factors** to relate units.

Using conversion factors

How did the shopkeeper mentioned on the previous page know the mass of 50 gumballs? He multiplied by a conversion factor to determine the number of gumballs on the scale from their combined mass. Multiplying by a conversion factor is like multiplying by 1 because both parts of the conversion factor are always equal.

The shopkeeper knows that exactly 10 gumballs have a combined mass of 21.4 g. This relationship can be written as two equivalent conversion factors, both of which are shown below.

$$\frac{10 \text{ gumballs}}{21.4 \text{ g}} \qquad \frac{21.4 \text{ g}}{10 \text{ gumballs}}$$

The shopkeeper can use one of these conversion factors to determine the mass of 50 gumballs because mass increases in a predictable way as more gumballs are added to the scale, as you can see from **Figure 35**.

conversion factor a ratio that is derived from the equality of two different units and that can be used to convert from one unit to another

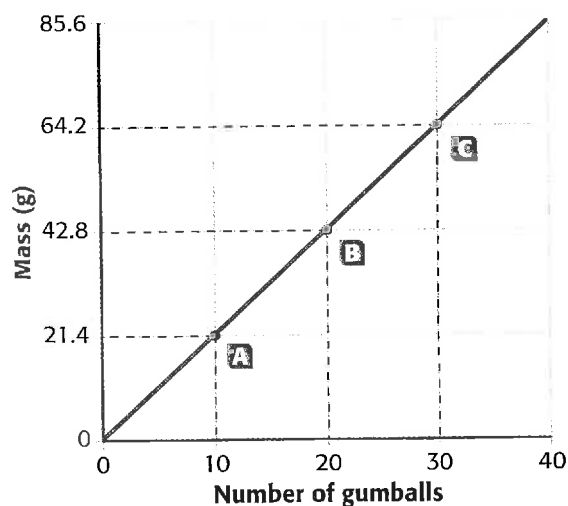



Figure 35.

There is a direct relationship between the number of gumballs and their mass. Ten gumballs have a mass of 21.4 g, 20 gumballs have a mass of 42.8 g, and 30 gumballs have a mass of 64.2 g.



Math Skills

Conversion Factors What is the mass of exactly 50 gumballs?

- 1** List the given and unknown values.

Given: mass of 10 gumballs = 21.4 g

Unknown: mass of 50 gumballs = ? g

- 2** Write down the conversion factor that converts number of gumballs to mass.

The conversion factor you choose should have the unit you are solving for (g) in the numerator and the unit you want to cancel (number of gumballs) in the denominator.

$$\frac{21.4 \text{ g}}{10 \text{ gumballs}}$$

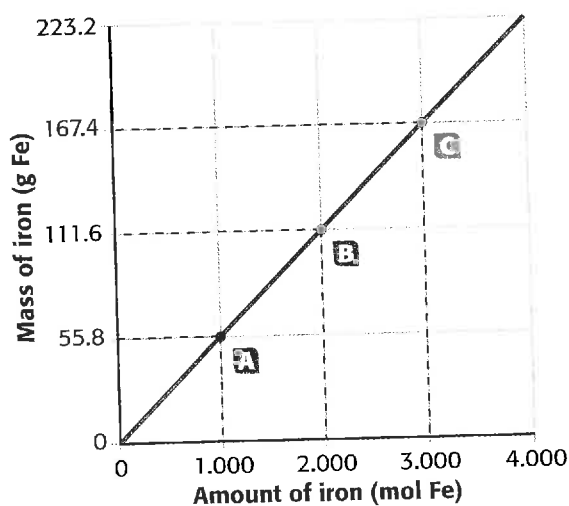
- 3** Multiply the number of gumballs by this conversion factor, and solve.

$$50 \text{ gumballs} \times \frac{21.4 \text{ g}}{10 \text{ gumballs}} = 107 \text{ g}$$

Practice

Conversion Factors

1. What is the mass of exactly 150 gumballs?
2. If you want 50 eggs, how many dozens must you buy? How many extra eggs do you have to take?
3. If a football player is tackled 1.7 ft short of the end zone, how many more yards does the team need to get a touchdown?




Relating amount to mass

Just as in the gumball example, there is also a relationship between the amount of an element in moles and its mass in grams. This relationship is graphed for iron nails in **Figure 36**. Because the amount of iron and the mass of iron are directly related, the graph is a straight line.

An element's molar mass can be used as if it were a conversion factor. Depending on which conversion factor you use, you can solve for either the amount of the element or its mass.

Figure 36

There is a direct relationship between the amount of an element and its mass.



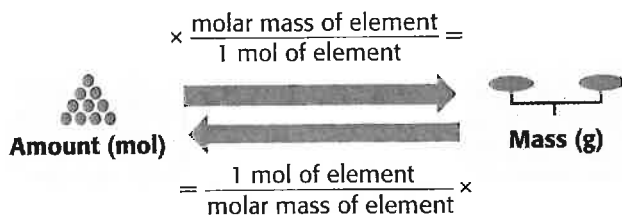


Figure 37

The molar mass of an element allows you to convert between the amount of the element and its mass.

Converting moles to grams

Converting between the amount of an element in moles and its mass in grams is outlined in **Figure 37**. For example, you can determine the mass of 5.50 mol of iron by using **Figure 37** as a guide. First you must find iron in the periodic table. Its average atomic mass is 55.85 amu. This means iron's molar mass is 55.85 g/mol Fe. Now you can set up the problem using the molar mass as if it were a conversion factor, as shown in the sample problem below.

Math Skills

Converting Amount to Mass Determine the mass in grams of 5.50 mol of iron.

- List the given and unknown values.**
Given: amount of iron = 5.50 mol Fe
 molar mass of iron = 55.85 g/mol Fe
Unknown: mass of iron = ? g Fe
- Write down the conversion factor that converts moles to grams.**
 The conversion factor you choose should have what you are trying to find (grams of Fe) in the numerator and what you want to cancel (moles of Fe) in the denominator.

$$\frac{55.85 \text{ g Fe}}{1 \text{ mol Fe}}$$
- Multiply the amount of iron by this conversion factor, and solve.**

$$5.50 \text{ mol Fe} \times \frac{55.85 \text{ g Fe}}{1 \text{ mol Fe}} = 307 \text{ g Fe}$$

Practice

Converting Amount to Mass

What is the mass in grams of each of the following?

- 2.50 mol of sulfur, S
- 1.80 mol of calcium, Ca
- 0.50 mol of carbon, C
- 3.20 mol of copper, Cu

Practice HINT

Notice how iron's molar mass, 55.85 g/mol Fe, includes units (g/mol) and a chemical symbol (Fe). The units specify that this mass applies to 1 mol of substance. The symbol for iron, Fe, clearly indicates the substance. Remember to always include units in your answers and make clear the substance to which these units apply. Otherwise, your answer has no meaning.

Math Skills

Converting Mass to Amount Determine the amount of iron present in 352 g of iron.

Practice HINT

Once you have learned how to convert mass to amount, you should use this sample problem to check your answers to the practice on the previous page.

- 1** List the given and unknown values.

Given: mass of iron = 352 g Fe

molar mass of iron = 55.85 g/mol Fe

Unknown: amount of iron = ? mol Fe

- 2** Write down the conversion factor that converts grams to moles.

The conversion factor you choose should have what you are trying to find (moles of Fe) in the numerator and what you want to cancel (grams of Fe) in the denominator.

$$\frac{1 \text{ mol Fe}}{55.85 \text{ g Fe}}$$

- 3** Multiply the mass of iron by this conversion factor, and solve.

$$352 \text{ g Fe} \times \frac{1 \text{ mol Fe}}{55.85 \text{ g Fe}} = 6.30 \text{ mol Fe}$$

SECTION 4 REVIEW

SUMMARY

- ▶ One mole of a substance has as many particles as there are atoms in exactly 12.00 g of carbon-12.
- ▶ Avogadro's constant, $6.022 \times 10^{23}/\text{mol}$, is equal to the number of particles in 1 mol.
- ▶ Molar mass is the mass in grams of 1 mol of a substance.
- ▶ An element's molar mass in grams is equal to its average atomic mass in amu.
- ▶ An element's molar mass can be used to convert from amount to mass, and vice versa.

1. **Define** Avogadro's constant. Describe how Avogadro's constant relates to a mole of a substance.
2. **Determine** the molar mass of the following elements:
 - a. manganese, Mn
 - b. cadmium, Cd
 - c. arsenic, As
 - d. strontium, Sr
3. **List** the two equivalent conversion factors for the molar mass of silver, Ag.
4. **Explain** why a graph showing the relationship between the amount of a particular element and the element's mass is a straight line.
5. **Critical Thinking** Which has more atoms: 3.0 g of iron, Fe, or 2.0 g of sulfur, S?

Math Skills

6. What is the mass in grams of 0.48 mol of platinum, Pt?
7. How many moles are present in 620 g of mercury, Hg?
8. How many moles are present in 11 g of silicon, Si?
9. How many moles are present in 205 g of helium, He?

Math Skills

Conversion Factors

A chemical reaction requires 5.00 mol of sulfur as a reactant. What is the mass of this sulfur in grams?

1 List all given and unknown values.

Given: amount of sulfur, 5.00 mol S
molar mass of sulfur, 32.07 g/mol S

Unknown: mass of sulfur (g)

2 Write the conversion factor for moles to grams.

The conversion factor you choose should have the unit you are solving for (g S) in the numerator and the unit you want to cancel (mol S) in the denominator.

$$\frac{32.07 \text{ g S}}{1 \text{ mol S}}$$

3 Multiply the number of moles by this conversion factor, and solve.

$$5.00 \text{ mol} \times \frac{32.07 \text{ g S}}{1 \text{ mol S}} = 160.4 \text{ g S}$$

Therefore, 160.4 grams of sulfur are needed for the reaction.

Practice

| Molar Masses | |
|--------------|-------------|
| Copper | 63.55 g/mol |
| Oxygen | 16.00 g/mol |
| Sulfur | 32.07 g/mol |
| Lead | 207.2 g/mol |

Using the example above, calculate the following:

1. If 4.00 mol of copper are needed as a reactant, what is the copper's mass in grams?
2. A combustion reaction requires 352 g of oxygen. What is the amount of oxygen atoms in moles?
3. If 622 g of lead are required for a reaction, what is the amount of the lead in moles?

Chapter Highlights

Before you begin, review the summaries of the key ideas of each section, found at the end of each section. The key vocabulary terms are listed on the first page of each section.

UNDERSTANDING CONCEPTS

- Which of Dalton's statements about the atom was later proven false?
 - Atoms cannot be subdivided.
 - Atoms are tiny.
 - Atoms of different elements are not identical.
 - Atoms join to form molecules.
- Which statement is not true of Bohr's model of the atom?
 - The nucleus can be compared to the sun.
 - Electrons orbit the nucleus.
 - An electron's path is not known exactly.
 - Electrons exist in energy levels.
- According to the modern model of the atom,
 - moving electrons form an electron cloud.
 - electrons and protons circle neutrons.
 - neutrons have a positive charge.
 - the number of protons an atom has varies.
- If an atom has a mass of 11 amu and contains five electrons, its atomic number must be
 - 55.
 - 16.
 - 6.
 - 5.
- Which statement about atoms of elements in the same group of the periodic table is true?
 - They have the same number of protons.
 - They have the same mass number.
 - They have similar chemical properties.
 - They have the same number of total electrons.
- The organization of the periodic table is based on
 - the number of protons in an atom.
 - the mass number of an atom.
 - the number of neutrons in an atom.
 - the average atomic mass of an element.
- The majority of elements in the periodic table are
 - nonmetals.
 - conductors.
 - synthetic.
 - noble gases.
- Elements with some properties of metals and some properties of nonmetals are known as
 - alkali metals.
 - semiconductors.
 - halogens.
 - noble gases.
- An atom of which of the following elements is unlikely to form a positively charged ion?
 - potassium, K
 - selenium, Se
 - barium, Ba
 - silver, Ag
- Atoms of Group 18 elements are inert because
 - they combine to form molecules.
 - they have no valence electrons.
 - they have filled inner energy levels.
 - they have filled outermost energy levels.
- Which of the following statements about krypton is not true?
 - Its molar mass is 83.80 g/mol Kr.
 - Its atomic number is 36.
 - One mole of krypton atoms has a mass of 41.90 g.
 - It is a noble gas.

Internetconnect

www.scilinks.org

Topic: Metals/Nonmetals SciLinks code: HK4086

SCILINKS Maintained by the National Science Teachers Association

USING VOCABULARY

- How many *protons* and *neutrons* does a silicon, Si, atom have, and where are each of these subatomic particles located? How many *electrons* does a silicon atom have?
- Identify the particles that make up an atom. How do these particles relate to the identity of an atom?
- Draw two different types of *orbitals*, state their names, and describe how they are filled.
- Describe the process of *ionization*, and give two different examples of elements that undergo this process.
- Explain why different atoms of the same element always have the same *atomic number* but can have different *mass numbers*. What are these different atoms called?
- Distinguish between the following:
 - an *atom* and a *molecule*
 - an *atom* and an *ion*
 - a *cation* and an *anion*
- List several familiar *transition metals* and their uses.
- How is the *periodic law* demonstrated with the *halogens*?
- Explain why *semiconductors*, or metalloids, deserve their name.
- Distinguish between *alkali metals* and *alkaline-earth metals*, and give several examples of how they are used.
- State *Avogadro's constant* and explain its relationship to the *mole*.
- What does an element's *molar mass* tell you about the element?

BUILDING MATH SKILLS

- Graphing** Use a graphing calculator, a computer spreadsheet, or a graphing program to plot the atomic number on the *x*-axis and the average atomic mass in amu on the *y*-axis for the transition metals in Period 4 of the periodic table (from scandium to zinc). Do you notice a break in the trend near cobalt? Explain why elements with larger atomic numbers do not necessarily have larger atomic masses.
- Converting Mass to Amount** For an experiment you have been asked to do, you need 1.5 g of iron. How many moles of iron do you need?
- Converting Mass to Amount** James is holding a balloon that contains 0.54 g of helium gas. What amount of helium is this?
- Converting Amount to Mass** A pure gold bar is made of 19.55 mol of gold. What is the mass of the bar in grams?
- Converting Amount to Mass** Robyn recycled 15.1 mol of aluminum last month. What mass of aluminum in grams did she recycle?

COMPUTER SKILL

THINKING CRITICALLY

- Creative Thinking** Some forces push two atoms apart while other forces pull them together. Describe how the subatomic particles in each atom interact to produce these forces.
- Applying Knowledge** Explain why magnesium forms ions with the formula Mg^{2+} , not Mg^+ or Mg^- .

31. Evaluating Data The figure below shows relative ionic radii for positive and negative ions of elements in Period 2 of the periodic table. Explain the trend in ion size as you move from left to right across the periodic table. Why do the negative ions have larger radii than the positive ions?



32. Making Comparisons Although carbon and lead are in the same group, some of their properties are very different. Propose a reason for this. (**Hint:** Look at the periodic table to locate each element and find out how each is classified.)

33. Problem Solving How does halving the amount of a sample of an element affect the sample's mass?

34. Understanding Systems When an atom loses an electron, what is the atom's charge? What do you think happens to the size of the atom?

35. Applying Knowledge What property do the noble gases share? How does this property relate to the electron configuration of the noble gases?

36. Applying Knowledge Write the chemical symbols for helium, carbon, gold, lead, sodium, potassium, and copper.

37. Critical Thinking Why is it difficult to measure the size of an atom?

38. Critical Thinking Particle accelerators are devices that speed up charged particles in order to smash the particles together. Sometimes the result of the collision is a new nucleus. How can scientists determine whether the nucleus formed is that of a new element or that of a new isotope of a known element?

39. Problem Solving What would happen to poisonous chlorine gas if the following alterations were made to the chlorine?

- A proton is added to each atom.
- An electron is added to each atom.
- A neutron is added to each atom.

DEVELOPING LIFE/WORK SKILLS

40. Locating Information Some "neon" signs contain substances other than neon to produce different colors. Design your own lighted sign, and find out which substances you could use to produce the colors you want your sign to be.

41. Making Decisions Suppose you have only 1.9 g of sulfur for an experiment and you must do three trials using 0.030 mol of S each time. Do you have enough sulfur?

42. Communicating Effectively The study of the nucleus produced a new field of medicine called nuclear medicine. Pretend you are writing an article for a hospital newsletter. Describe how radioactive substances called tracers are sometimes used to detect and treat diseases.

43. Working Cooperatively With a group of your classmates, make a list of 10 elements and their average atomic masses. Calculate the amount in moles for 6.0 g of each element. Rank your elements from the element with the greatest amount to the element with the least amount in a 6.0 g sample. Do you notice a trend in the amounts as atomic number increases? Explain why or why not.

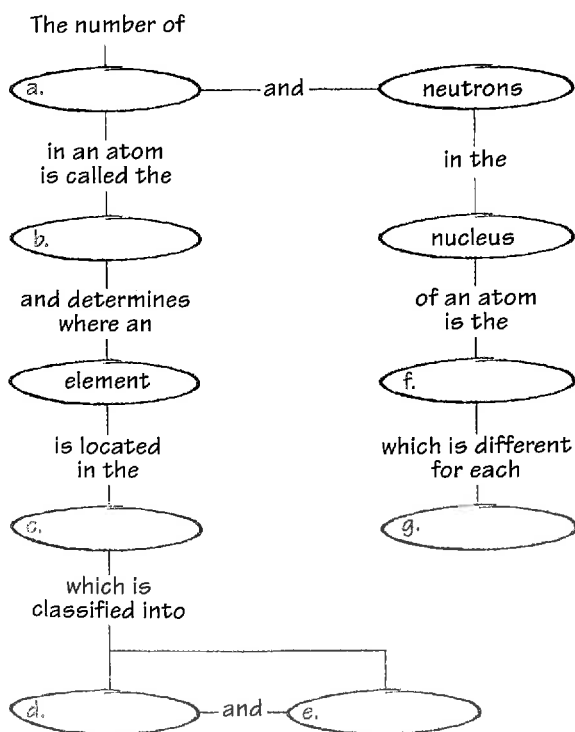
44. Applying Knowledge You read a science fiction story about an alien race of silicon-based life-forms. Use information from the periodic table to hypothesize why the author chose silicon over other elements. (**Hint:** Life on Earth is carbon based.)

INTEGRATING CONCEPTS

- 45. Connection to Health** You can keep your bones healthy by eating 1200–1500 mg of calcium a day. Use the table below to make a list of the foods you might eat in a day to satisfy your body's need for calcium. How does your typical diet compare with this?

| Item, serving size | Calcium (mg) |
|----------------------------|--------------|
| Plain lowfat yogurt, 1 cup | 415 |
| Ricotta cheese, 1/2 cup | 337 |
| Skim milk, 1 cup | 302 |
| Cheddar cheese, 1 ounce | 213 |
| Cooked spinach, 1/2 cup | 106 |
| Vanilla ice cream, 1/2 cup | 88 |

- 46. Concept Mapping** Copy the unfinished concept map below onto a sheet of paper. Complete the map by writing the correct word or phrase in the lettered boxes.



- 47. Connection to Physics** Research the origins of the elements. The big bang theory suggests that the universe began with an enormous explosion. What was formed as a result of the big bang? Describe the matter that was present after the explosion. How much time passed before the elements as we know them were formed?
- 48. Connection to Earth Science** The isotope carbon-14 is used in radiocarbon dating of animal and plant fossils. Scientists use other isotopes to tell the ages of rocks and meteorites. Do some research and find out which isotopes are used to date rocks and meteorites.

Internet connected:

www.scilinks.org

Topic: Origin of Elements SciLinks code: HK4097

SCILINKS, Maintained by the
National Science Teachers Association

Art Credits: Fig. 2, Kristy Sprott; Fig. 4, Kristy Sprott; Fig. 5, Uhl Studios, Inc.; Fig. 8, J/B Woolsey Associates; Fig. 10, Kristy Sprott; Fig. 12–17, Kristy Sprott; Fig. 19–21, Kristy Sprott; Fig. 24–25, Kristy Sprott; Fig. 27–31, Kristy Sprott; Fig. 32, Leslie Kell; Fig. 36, Leslie Kell; "Thinking Critically" (molecules), Kristy Sprott.

Photo Credits: Chapter Opener image of Guggenheim museum in Bilbao, Spain by Rafa Rivas AFP/CORBIS; liquid gold by Torpham/The Image Works; Fig. 1 (microscopic), Courtesy JEOL; Fig. 1 (cans), Victoria Smith/HRW; Fig 2.(man), Ron Chapple/Getty Images/FPG International; Fig. 2(waterfall), Bill Bachman/Masterfile; Fig. 3(stadium), Douglas Peebles/CORBIS; Fig. 3(marble), CORBIS Images/HRW; Fig. 6, Steven Begleiter/Index Stock; "Quick Activity," Sam Dudgeon/HRW; Fig. 10, SuperStock; Fig. 11, Peter Van Steen/HRW; Fig. 15, Rhonda Sidney/The Image Works; Fig. 19A, Tom Van Sant/Geosphere Project, Santa Monica/Science Photo Library/Photo Researchers, Inc.; Fig. 19B, NASA/Corbis Stock Market; Fig. 22, Mimi Cotter/International Stock Photography; Fig. 23(l), E. R. Degginger/Color-Pic, Inc.; Fig. 23(r), Jerry Mason/SPL/Photo Researchers, Inc.; Fig. 24, Jeff Hunter/Getty Images/The Image Bank; Fig. 25, Peter Van Steen/HRW; Fig. 26, Russ Lappa/Science Source/Photo Researchers, Inc.; Fig. 27, Oullette/Theroux/PubliPhoto/Photo Researchers, Inc.; "Connection to Architecture," Dilip Mehta/Contact Press Images/Picture Quest; Fig. 29, Scott Barrow/International Stock Photography; Fig. 30, Rob Boudreau/Getty Images/Stone; Fig. 32, Digital Image copyright 2004, Eyewire; Fig. 33, Sam Dudgeon/HRW; "Did You Know," BETTMANN/CORBIS; Figs. 34, 35, 36, Sam Dudgeon/HRW; "Design Your Own Lab," Peter Van Steen/HRW.

Skills Practice Lab

Introduction

How can you distinguish metal elements by analyzing their physical properties?

Objectives

- ▶ **USING SCIENTIFIC METHODS** *Hypothesize* which physical properties can help you *distinguish* between different metals.
- ▶ *Identify* unknown metals by *comparing* the data you collect with reference information.

Materials

balance
beakers (several)
graduated cylinder
hot plate
ice
magnet
metal samples, unidentified (several)
metric ruler
stopwatch
water
wax

Comparing the Physical Properties of Elements

▶ Procedure

Identifying Metal Elements

1. In this lab, you will identify samples of unknown metals by comparing the data you collect with reference information listed in the table at right. Use at least two of the physical properties listed in the table to identify each metal.



Deciding Which Physical Properties You Will Analyze

2. Density is the mass per unit volume of a substance. If the metal is box-shaped, you can measure its length, width, and height, and then use these measurements to calculate the metal's volume. If the shape of the metal is irregular, you can add the metal to a known volume of water and determine what volume of water is displaced.
3. Relative hardness indicates how easy it is to scratch a metal. A metal with a higher value can scratch a metal with a lower value, but not vice versa.
4. Relative heat conductivity indicates how quickly a metal heats or cools. A metal with a value of 100 will heat or cool twice as quickly as a metal with a value of 50.
5. If a magnet placed near a metal attracts the metal, then the metal has been magnetized by the magnet.

Designing Your Experiment

6. With your lab partner(s), decide how you will use the materials provided to identify each metal you are given. There is more than one way to measure some of the physical properties that are listed, so you might not use all of the materials that are provided.
7. In your lab report, list each step you will perform in your experiment.
8. Have your teacher approve your plan before you carry out your experiment.

Physical Properties of Some Metals

| Metal | Density (g/mL) | Relative hardness | Relative heat conductivity | Magnetized by magnet? |
|---------------|----------------|-------------------|----------------------------|-----------------------|
| Aluminum (Al) | 2.7 | 28 | 100 | no |
| Iron (Fe) | 7.9 | 50 | 34 | yes |
| Nickel (Ni) | 8.9 | 67 | 38 | yes |
| Tin (Sn) | 7.3 | 19 | 28 | no |
| Tungsten (W) | 19.3 | 100 | 73 | no |
| Zinc (Zn) | 7.1 | 28 | 49 | no |

Performing Your Experiment

- After your teacher approves your plan, carry out your experiment. Keep in mind that the more careful your measurements are, the easier it will be for you to identify the unknown metals.
- Record all the data you collect and any observations you make in your lab report.

► Analysis

- Make a table listing the physical properties you compared and the data you collected for each of the unknown metals.
- Which metals were you given? Explain the reasoning you used to identify each metal.
- Which physical properties were the easiest for you to measure and compare? Which were the hardest? Explain why.
- What would happen if you tried to scratch aluminum foil with zinc?
- Explain why it would be difficult to distinguish between iron and nickel unless you calculate each metal's density.
- Suppose you find a metal fastener and determine that its density is 7 g/mL. What are two ways you could determine whether the unknown metal is tin or zinc?



► Conclusions

- Suppose someone gives you an alloy that is made of both zinc and nickel. In general, how do you think the physical properties of the alloy would compare with those of each individual metal?