

Period 6 Alg 2H Emergency Plan

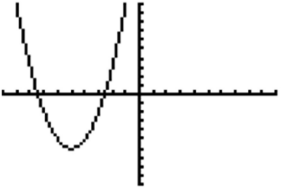
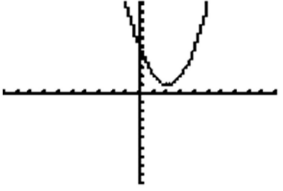
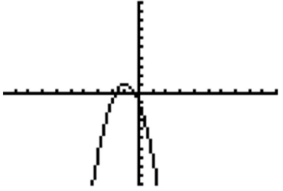
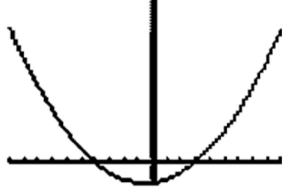
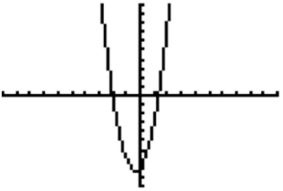
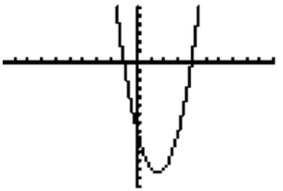
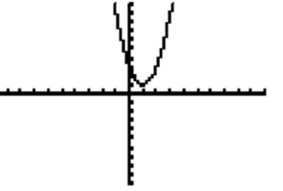
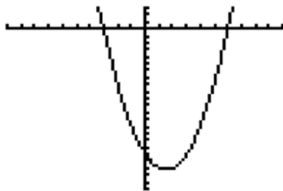
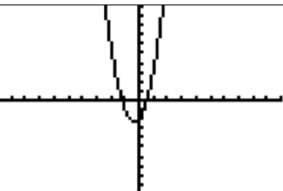

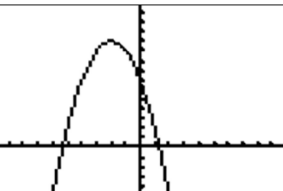
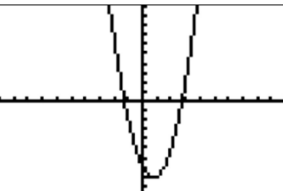
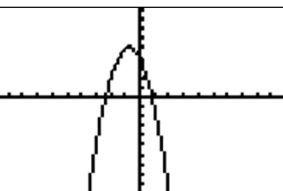
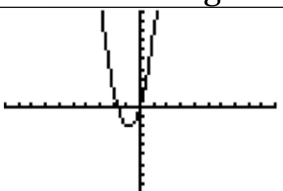
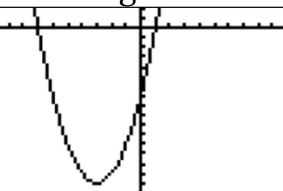
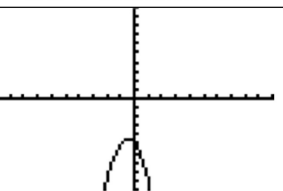
Thursday, January 28, 2021 11:16 PM


NAME _____ DATE _____ PERIOD _____


Where is Ms. Mann Hiding?


Directions: Graph each answer below; then find the matching graph below to eliminate the famous places in Zurich that Ms. Mann could be hiding.


- | | | |
|--------------------------|--------------------------|-------------------------|
| 1. $y = 2x^2 - 6x - 8$ | 2. $y = 2x^2 + 2x - 24$ | 3. $y = x^2 + 10x + 19$ |
| 4. $y = -x^2 - 4x + 7$ | 5. $y = 3x^2 + 2x - 2$ | 6. $y = x^2 + 6x - 7$ |
| 7. $y = x^2 - 3x - 18$ | 8. $y = x^2 - 4x + 5$ | 9. $y = -2x^2 - 2x - 5$ |
| 10. $y = 3x^2 + 6x$ | 11. $y = -2x^2 - 3x + 4$ | 12. $y = 3x^2 + 2x - 8$ |
| 13. $y = -2x^2 - 4x - 1$ | 14. $y = 2x^2 - 6x + 3$ | 15. $y = 2x^2 - 3x - 7$ |

| | | | |
|---|---|--|---|
|  |  |  |  |
| Lindenhofplatz | Grossmunster | Urania Observatory | Bahnhofstrasse |
|  |  |  |  |
| Bad Au-Hongg | Opera House | Bellevue Square | Uetilberg Mountain |
|  |  |  |  |
| Aldstadt | Seebad Enge | Rietberg Museum | St. Peterskirche |
|  |  |  |  |
| Zurich Zoo | UBS Polybahn | Fraumunster | Museum of Art |


Zurich Zoo


UBS Polybahn


Fraumunster


Museum of Art

Ready

Ms. Mann is hiding in the _____