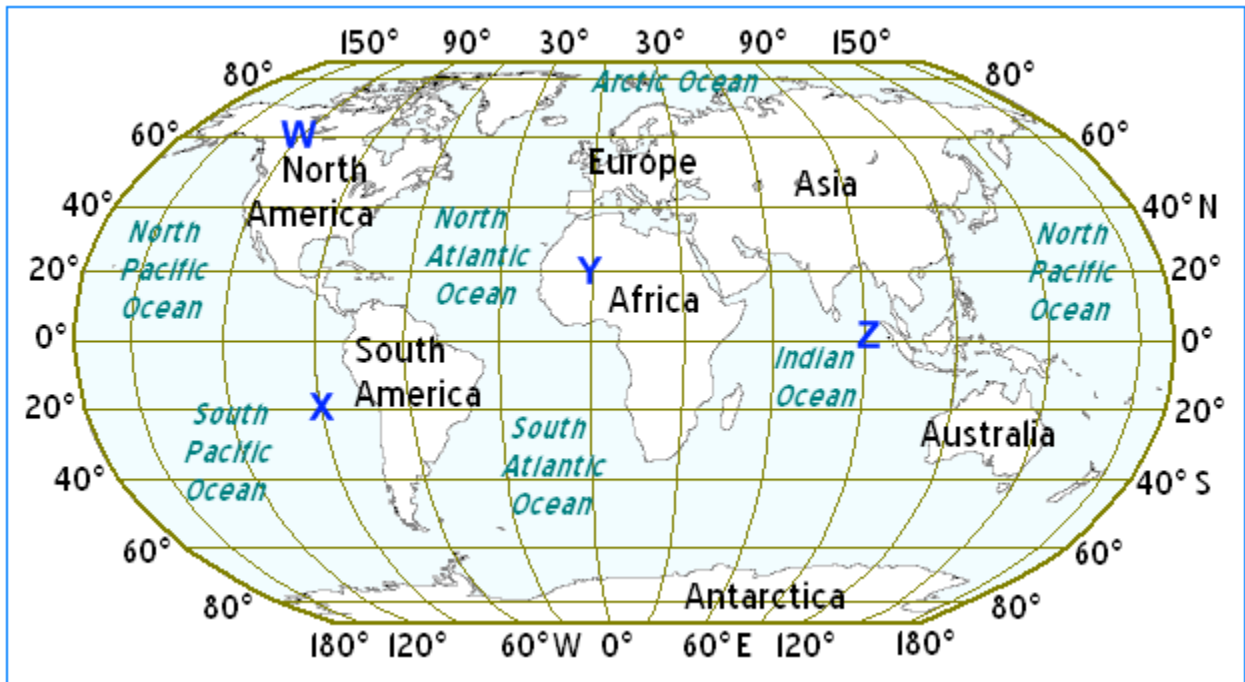


### Question 1

Add



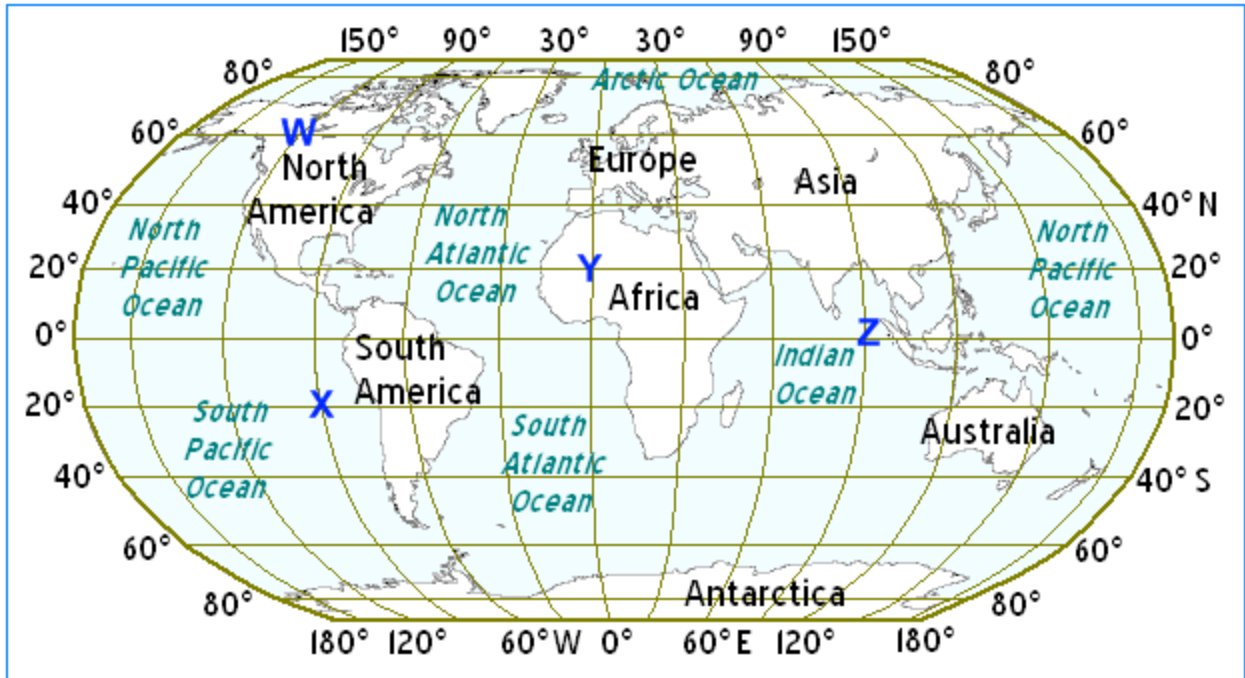
Which letter is at 20° N latitude and 0° longitude?

- A. W
- B. X
- C. Z
- D. Y

---

### Question 2

Add



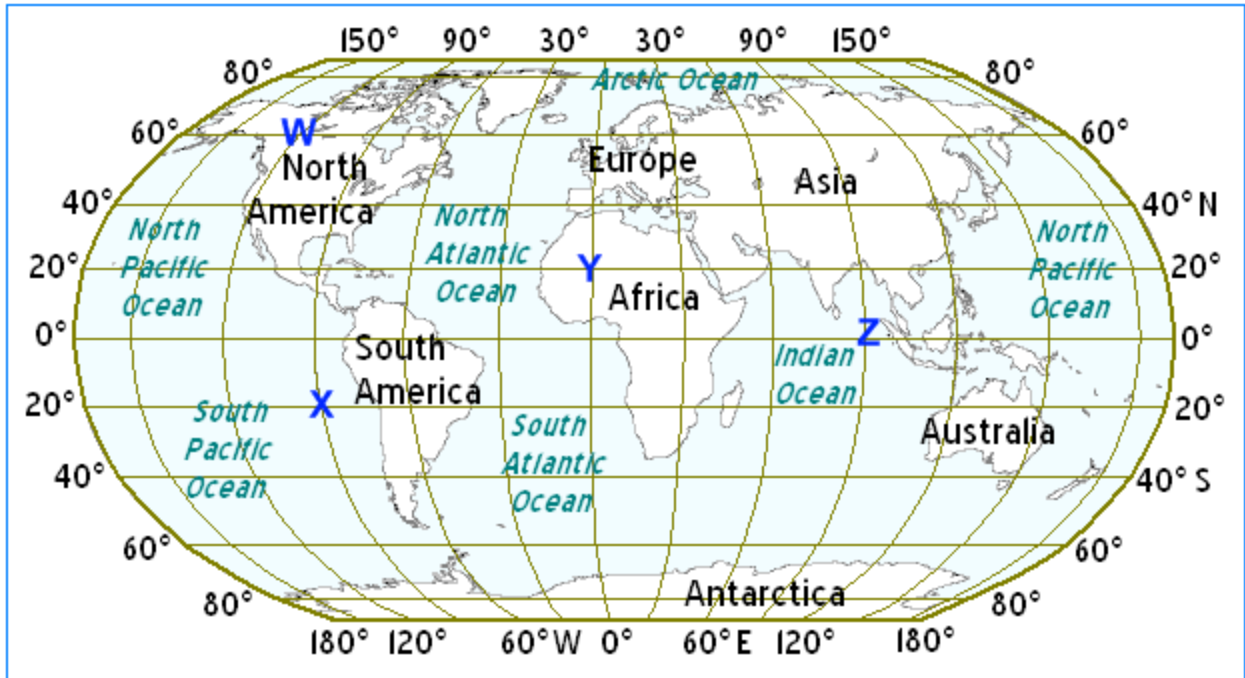
Which letter shows a point that is on the equator?

- A. Z
- B. X
- C. W
- D. Y

---

### Question 3

Add



Which letter shows the point that is closest to the North Pole?

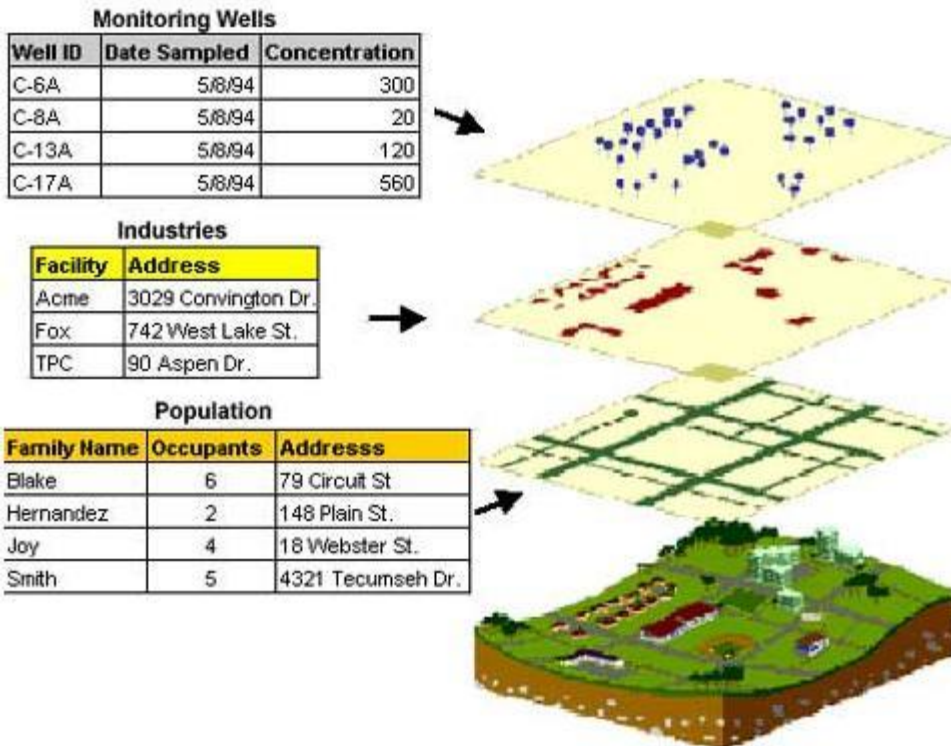
- A. Y
- B. Z
- C. X
- D. W

---

### Question 4

Add

The image below shows a Geographic Information System (GIS) display.



<http://www.epa.gov/region5fields/htm/methods/gis/>

What is a major benefit of the GIS?

- A. It provides live, up-to-date information about a specific area.
- B. It displays information primarily about the physical geography of an area.
- C. It shows many different areas of the world so that they can be compared.
- D. It allows several sets of information to be displayed at once.

## Question 5

Add

A Global Positioning System (GPS) is a navigation technology that operates by using

- A. electromagnetic pulses.
- B. undersea seismometers.
- C. a group of satellites.
- D. a group of radar towers.

## Question 6

Add



*Image Courtesy of CIA World Factbook*

The map above shows a polar projection. What is one of the disadvantages of this type of map?

- A. Physical features are not able to be shown on this type of map.
- B. It is not possible to show political boundaries on this type of map.
- C. The longitudinal lines shown on this map are inaccurate.
- D. The areas furthest from the center point have a great deal of distortion.

---

## Question 7

Add



The image above is an aerial photo of a city. What is one advantage of using an aerial photo to learn about a place?

- A. It shows the political boundaries of an area.
- B. It shows the population density of an area.
- C. It makes it easy to calculate distances between places.
- D. It shows how the land in an area is being used.

---

### Question 8

Add



What is one advantage of a globe?

- A. It shows many details of urban areas.

- B. It is a good way to see economic information.
  - C. It shows different cultural groups.
  - D. It is a scale model of the Earth.
- 

### Question 9

Add



In which of these situations would it be best to use a globe?

- A. when studying the natural resources of an area
  - B. when looking at the distances between continents
  - C. when trying to find directions to your friend's house across town
  - D. when planning a road trip across the state
- 

### Question 10

Add



What would be a disadvantage to using a globe rather than a map when locating and describing regions of the United States?

- A. A globe is less accurate in scale than a map.
  - B. A globe focuses on more than just the United States.
  - C. A globe is very easy to damage accidentally.
  - D. A globe cannot show as many details as a map can.
- 

### Question 11

Add

Which of these would best show how a region in the U.S. actually appears?

- A. a drawing
  - B. a photograph
  - C. a map
  - D. a globe
- 

### Question 12

Add

When locating and describing regions of the United States, what advantage does a map have over a photograph?

- A. It better shows a region's political geography.
- B. It better shows details of physical features.



- C. It is usually a much more reliable source.
- D. It is usually smaller and easier to carry.

### Question 13

Add



Which of these countries is located southwest of Egypt?

- A. Algeria
- B. Cameroon
- C. Ethiopia
- D. Somalia

## Question 14

Add



The island of Madagascar is located off which border of the main continent?

- A. southeast
- B. southwest
- C. northwest
- D. northeast

---

## Question 15

Add

## The Middle East and Surrounding Areas



According to the map scale, what is the approximate distance between Iraq and Afghanistan?

- A. 400 miles
- B. 250 miles
- C. 2,000 miles
- D. 800 miles

---

### Question 16

Add

## The Middle East and Surrounding Areas



Which of these is the farthest east from the Red Sea?

- A. Oman
  - B. Saudi Arabia
  - C. Turkey
  - D. Pakistan
-