

Study Island

Copyright © 2015 Edmentum - All rights reserved.

Generation Date: 10/28/2015
Generated By: Kathy Daniels
Title: Blizzard Bag 1



1. Which Ohio city is marked with a Y on the map?

- A. Dayton
 - B. Akron
 - C. Cincinnati
 - D. Toledo
-

2. Which Ohio city is marked with a **Z** on the map?

- A. Akron
- B. Toledo
- C. Columbus
- D. Cleveland



Ohio's geography ranges from flat plains in the west to rolling hills and mountains in the southeast. In between are plateaus that were created by glaciers. There are also river systems that are good for agriculture.

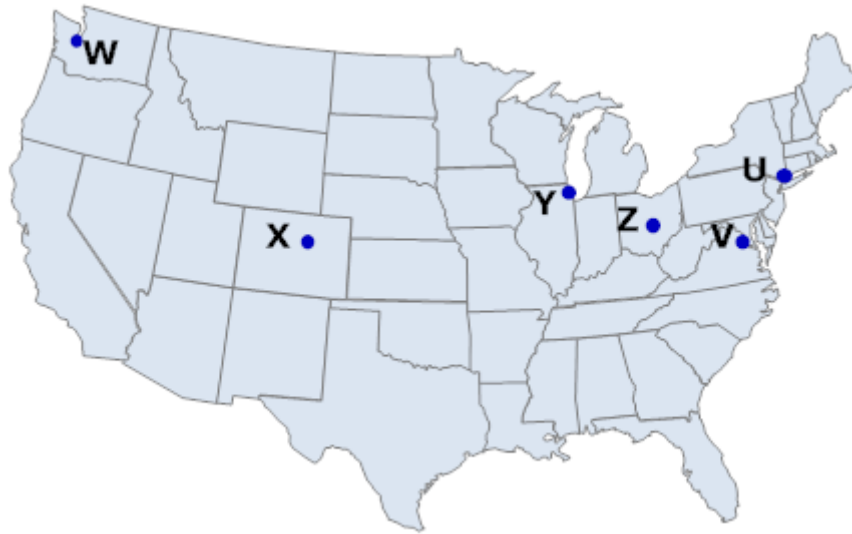
3. Which number on the map above marks the Glaciated Till Plain?

- A. 5
- B. 2
- C. 4
- D. 3

4. Which number on the map above marks the Allegheny Plateau?

- A. 1
- B. 3

- C. 2
 - D. 4
-



5. On the map provided, which of the letters matches the capital of the United States?

- A. W
 - B. U
 - C. X
 - D. V
-

6.



Which of the Great Lakes is directly north of Ohio?

- A. Lake Huron
- B. Lake Michigan
- C. Lake Erie
- D. Lake Superior

7.



Which of these states is south of Ohio?

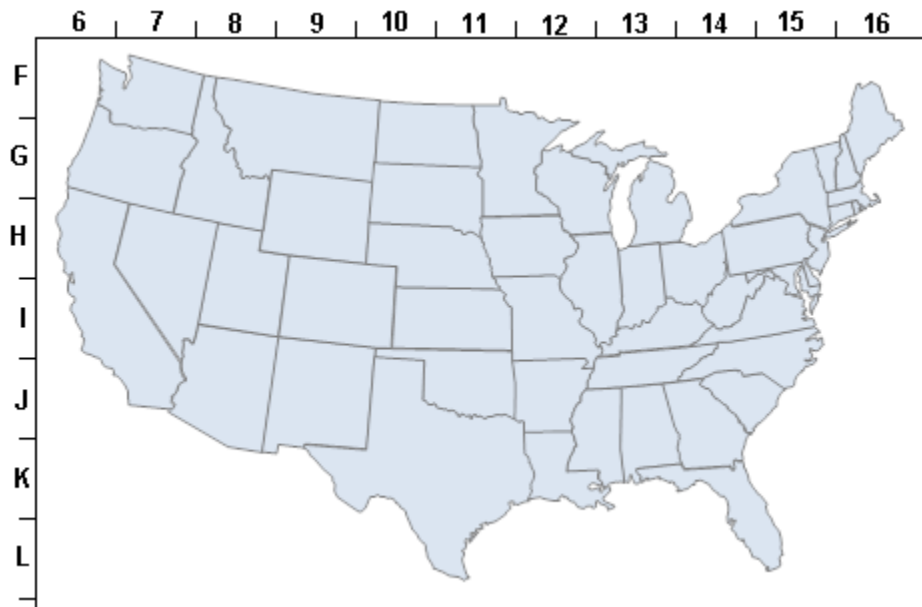
- A. Indiana
 - B. Pennsylvania
 - C. Michigan
 - D. Kentucky
-

8.



What state borders Ohio to the west?

- A. Indiana
- B. Pennsylvania
- C. Michigan
- D. West Virginia

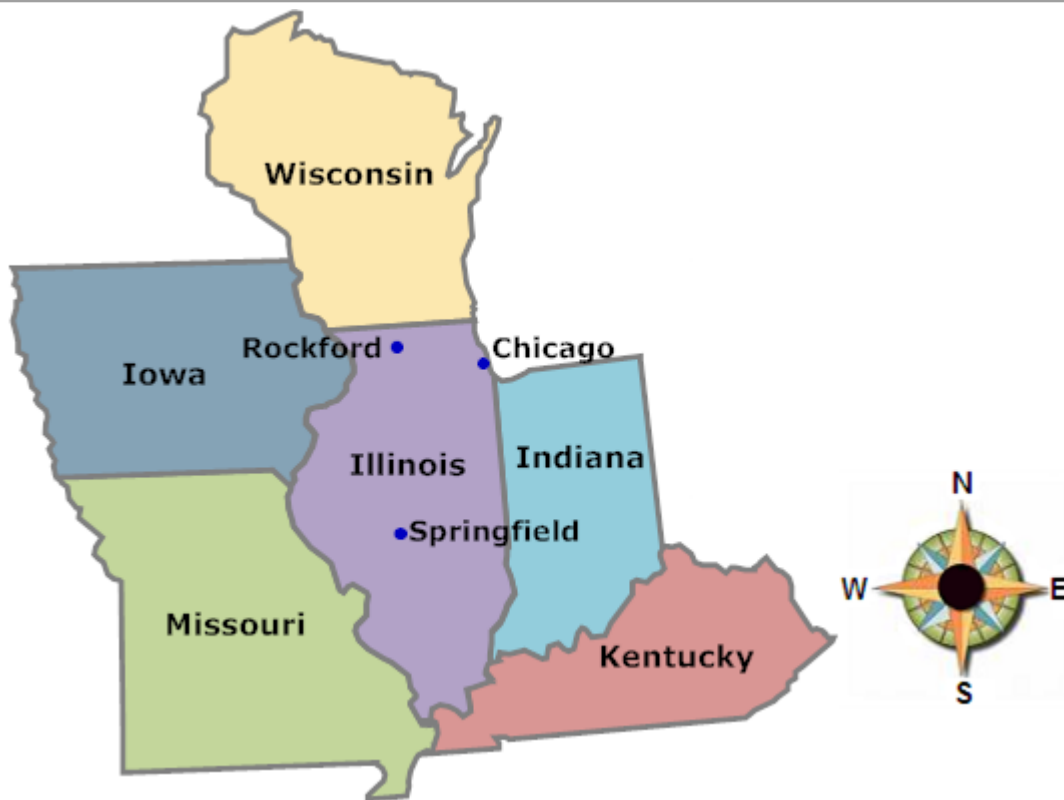


9. On the provided map of the United States, what are the coordinates for Washington, D.C.?

- A. I-15
 - B. L-15
 - C. F-10
 - D. G-7
-

10. On the provided map of the United States, what are the coordinates for Illinois?

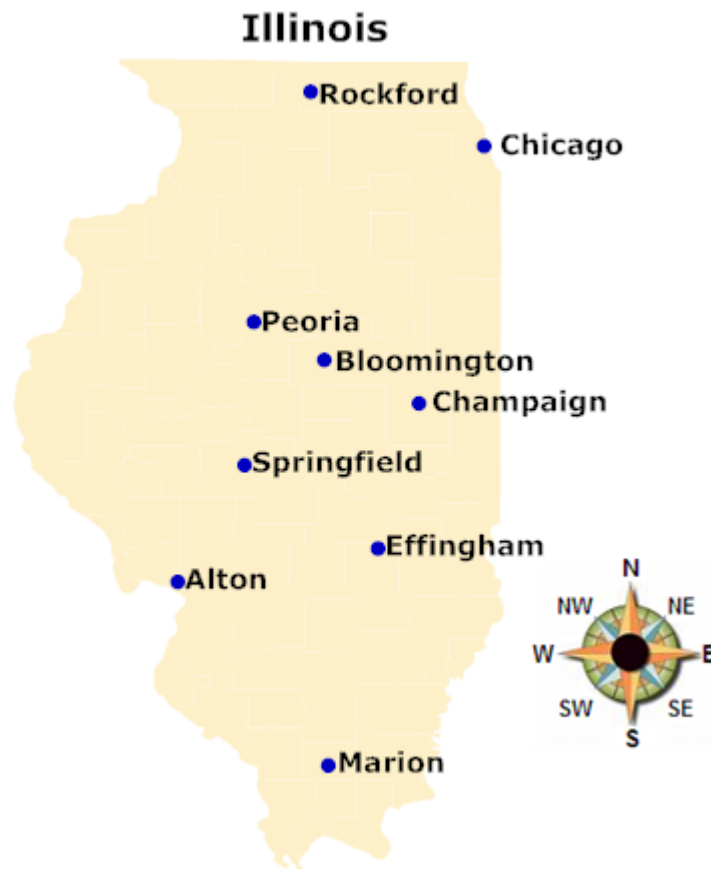
- A. F-16
 - B. H-12
 - C. K-15
 - D. I-7
-



11. Looking at the map above, if you are in Springfield, Illinois and you travel due east, what state would you enter?

- A. Iowa
- B. Indiana

- C. Kentucky
 - D. Missouri
-



12. Using the map provided, in what direction would you be traveling if you were going from Chicago to Alton?

- A. Southeast
 - B. Southwest
 - C. East
 - D. Northeast
-

13. Using the map provided, if you were traveling from Bloomington to Rockford, in which direction would you be heading?

- A. East
- B. West
- C. North
- D. South



14. Using the map provided, approximately how far is it from Chicago, Illinois (B) to Washington, D.C. (C)?

- A. 1200 miles
- B. 700 miles
- C. 400 miles
- D. 1000 miles

15. Using the map provided, approximately how far is it from Denver, Colorado (E) to Seattle, Washington (A)?

- A. 500 miles
 - B. 1,800 miles
 - C. 200 miles
 - D. 1,300 miles
-