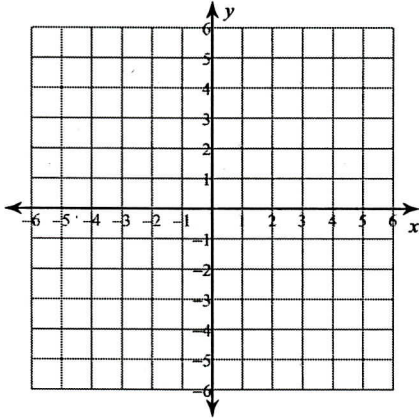


# Blizzard Bag 1

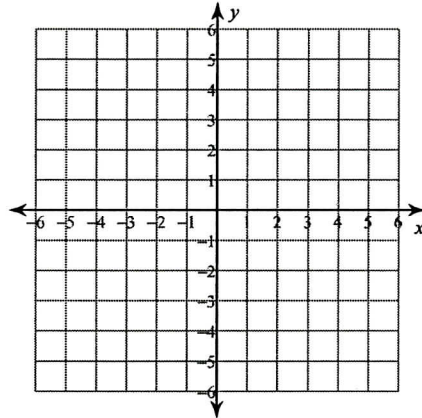
Name \_\_\_\_\_

Sketch the graph of each linear inequality.

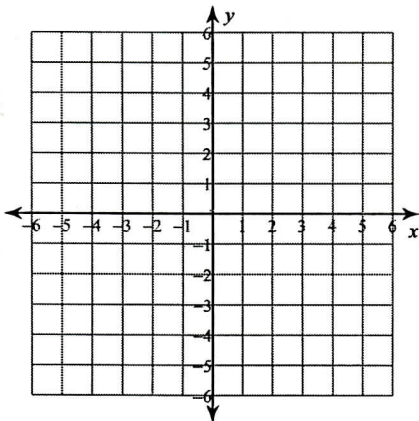
1)  $y \geq -3x + 4$



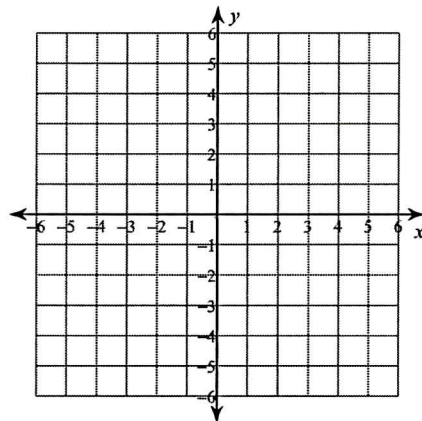
2)  $y \leq \frac{3}{5}x - 5$



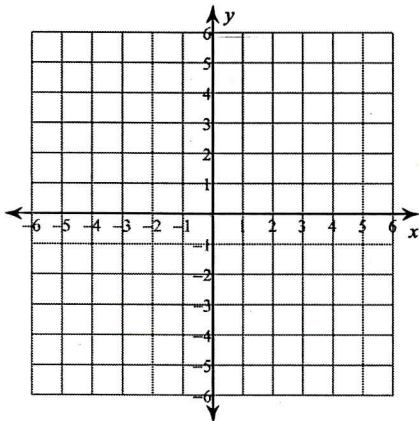
3)  $y > -x - 5$



4)  $y > -4$



5)  $y > 2x - 5$



6)  $y \geq \frac{7}{4}x + 2$

