

Dear Upcoming Fourth Grade Families,

In this folder you will find information about summer homework and a school supply list for next year. The intentions of summer homework are to maintain the skills that students have worked hard to build thus far. A small amount of weekly skills work will help students enter the school year prepared. Research has shown that the "summer slide" can cause the average student to lose 1-2 months of instruction. This packet is intended to reduce this slide and help us hit the ground running this fall. Of course TMS believes that students should be playing outside, visiting family, and having meaningful experiences outside of school during the summer. This packet is not meant to become a burden or headache (and please contact me if it becomes so).

You will see that your child's summer homework consists of a packet broken up into 10 weeks of work (to be completed over the 12 weeks of summer). The material in the packet should be a review of curriculum that students covered this year, and students should be able to complete the work independently. If they are "stuck" on a problem, they should circle it and move on. This will help me identify areas where we will need to focus in the fall. On average, each week's worth of work should take an hour total, plus daily independent reading (30 minutes, 5 times a week). I have also included a rubric that outlines the expectations of summer homework.

The recommendation for summer homework is:

- ✓ One math section a week. These are labeled by week, with 10 weeks to be completed over the 12 weeks of summer.
- ✓ One journal entry a week. Entries should be 1-2 pages in length and edited for proper capitalization, punctuation and spelling. They should take 20-30 minutes to complete each week. I have included a number of prompts that students can write about. **Students are welcome to keep a journal of their summer experiences and write creatively if they prefer.**
- ✓ Sight word spelling list. To be completed over the course of the summer.
- ✓ Daily reading in an independent reading book. Students should complete 6-10 books at their level over the course of the summer and record them on the attached reading log. Students should read for 30 minutes approximately 5 times a week. Please record these in the included reading log. Also, try to take advantage of the Wilkinson Public Library reading program.


Please take the time to page through the packets this week so that you can contact me with questions before the school year is over. Have an adventure filled summer break and we will see everyone in September!

Love,

Ms. Caitlin

corintas@telluridentnschool.org

Summer Reading Log

Title	Rating- How much did you like it?
	
	
	
	
	
	
	
	

Name: _____

Summer Homework Rubric

Focus Area	Bullseye!	Approaching Target	Off Target
Reading	Student read the outlined expectation of 30 minutes, 5 days a week, totalling approximately 6-10 books at their reading level. Books are recorded on a reading log.	Student met some, but not all of the expectations for summer reading.	Student did not demonstrate that they read over the summer.
Writing	Student wrote 10 journal entries. Entries are 1-2 pages in length. Entries demonstrate evidence of editing for capitalization, punctuation, and spelling.	Student wrote less than 10 journal entries. Entries were less than 1 page in length. Entries did not show evidence of editing.	Student did not demonstrate that they wrote in a journal over the summer.
Math	Student completed 10 math packets.	Student completed less than 10 math packets.	Student did not complete any math packets.

3/4 School Supply List

School Year 2021-2022

- One **heavy-duty** plastic folder to hold homework etc (instead of a binder). **This folder will travel back and forth from home to school, so it needs to be durable.**
- 5 Folders (these will stay at school for individual subjects)
- 2 big packs of pencils (minimum of 12)
- 2 packs of Expo dry erase markers (1 thick, 1 thin). **No NEON colors please.**
- 2 erasers
- 1 sketch book for art (It is okay it use one from last year if it still has plenty of pages)
- 1 pack of highlighters (approx. 4 per pack)
- 2 packs of notecards (1 white, 1 multi-colored)
- 2 packs of glue sticks (2 minimum per pack)
- 1 container of disinfecting wipes for tables and desks
- A pencil box for your desk
- Backpack
- Lunchbox
- Water bottle
- Indoor shoes or slippers
- A cute plant that is easy to take care of for the classroom

3rd/4th español - ¡tarea del verano!

Durante el verano, use the choice board below to practice your Spanish at least once a week to stay listo for next year! Send any and all questions or final work to lnorton@telluridemtnschool.org.

Use Google Maps to design an itinerary for your family in a Spanish-speaking country's capital city.	Create a Mad Lib en español on the Mad Lib Generator site . Try it with your amigos o familia!	Take the Visita virtual – Museo Frida Kahlo . Share what you learned with a parent.
Print and color the National Museum of Mexican Art Alebrijes Coloring Book .	Check out Señor Wooly on Youtube. Learn the lyrics to an entire song en español!	Investigate recipes online in Spanish. Create a shopping list en español and make the dish if you can. **Parent Permission Required**
Practice Spanish on Duolingo for 20 minutes!	Create a comic strip in the target language using Comic Creator or Make Beliefs Comix .	Go online at https://wilkinson.marmot.org and check out ebooks or real books en español! Books can be placed on hold and picked up at the library!

Keep track of your work!

Date, activity	example: 6/17, Duolingo	

Sight Word Spelling Practice

Sight words are words that do not follow a predictable spelling pattern and their spelling must be memorized.

1. At the beginning of the summer, quiz your child on the attached sight word spelling list.
2. Determine which words they already know how to spell and which words they need to memorize.
3. Throughout the summer, practice the words that your child got wrong. I have included a list of ideas for practicing spelling. You can check out <https://thisreadingmama.com/hands-on-spelling-activities/> for additional ideas for practice.

Write your words in the dirt or sand using a stick.	Rainbow write your words example	Trace your words with your finger on sand paper.
Use playdough or pipe cleaners to sculpt your spelling words.	Write each word three times. You can try using fancy letters and cursive writing too.	Write your spelling words in alphabetical order.
Use your finger to spell your words on a family member's back (someone who can read!). You can switch and have them do it to you too.	In a darkened room, use a flashlight to spell your words in the air. Have a family member read each word as you go.	Draw a picture and write your spelling words in the picture. Try to hide the words in the picture.

Dolch Third Grade Sight Vocabulary

Name: _____ Date Pretest: _____ % Correct: _____
Date of test: _____ % Correct: _____

about

hold

seven

better

hot

shall

bring

hurt

show

carry

if

six

clean

keep

small

cut

kind

start

done

laugh

ten

draw

light

today

drink

long

together

eight

much

try

fall

myself

warm

far

never

full

only

got

own

grow

pick

Your child identifies all circled words. Our goal is 100% by the end of March of 3rd Grade.
Thanks for your help in practicing at home.
Jill Perkins © 1998

Color code: purple = Sept. blue = Nov. green = Jan. red = March black = May

Name: _____


Date: _____

Spelling Test

1. _____
2. _____
3. _____
4. _____
5. _____
6. _____
7. _____
8. _____
9. _____
10. _____
11. _____
12. _____
13. _____
14. _____
15. _____
16. _____
17. _____
18. _____
19. _____
20. _____
21. _____
22. _____
23. _____
24. _____
25. _____

26. _____
27. _____
28. _____
29. _____
30. _____
31. _____
32. _____
33. _____
34. _____
35. _____
36. _____
37. _____
38. _____
39. _____
40. _____
41. _____
42. _____
43. _____
44. _____
45. _____
46. _____
47. _____
48. _____
49. _____
50. _____

My Daily Summer Journal



Writing Prompts

Entries should be 1-2 pages in length and edited for proper capitalization, punctuation and spelling. Please write the prompt number at the top of your journal page!

Summer Related

1. Write about one of the 5 senses related to summer. The smells of summer, the sights of summer, the sounds of summer, the tastes of summer or the touch of summer.
2. Imagine that the summer gods took summer away and the seasons went from spring to fall to winter. How would that make you feel and why?
3. Summer flowers are one of nature's most beautiful works of art. What other natural art does summer bring?

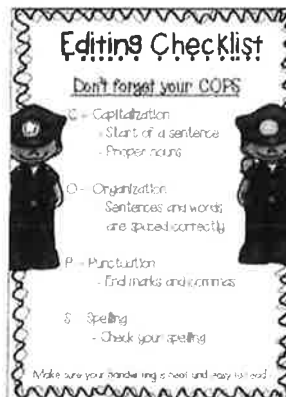
Travel Related

4. What are the top 5 things you hope to accomplish on this trip?
5. What is one item you packed that you should have left behind?
6. What do you miss most about home?
4. Do the locals know that you are a traveler? What makes you stick out?
7. What has been the most difficult part about this vacation?
8. What do you wish you knew before you came? What advice would you give a friend who was going to travel to this destination?
9. Write a letter to your future self about what you absolutely cannot forget about this trip.
10. What was the best thing about the entire trip?

Reading Related

11. Think about the book that you are currently reading on your own. What has been your favorite part so far and why?
12. Think about the book that you are currently reading on your own. Is there a character in the book you wish could be your friend in real life? Why or why not?
13. Think about a book that you read this summer. Write down a different ending.
14. Write a friendly letter to the author of the book you are reading. Tell them which parts of the book you liked or did not like. Ask the author at least one question about the book.

You are also welcome to keep a journal of your summer experiences and write creatively.



Be sure to edit your work for...

Date: _____

Prompt Number: _____

Handwriting practice lines consisting of solid top and bottom lines with a dashed midline, repeated across the page.

Writing Prompts

Entries should be 1-2 pages in length and edited for proper capitalization, punctuation and spelling. Please write the prompt number at the top of your journal page!

Summer Related

1. Write about one of the 5 senses related to summer. The smells of summer, the sights of summer, the sounds of summer, the tastes of summer or the touch of summer.
2. Imagine that the summer gods took summer away and the seasons went from spring to fall to winter. How would that make you feel and why?
3. Summer flowers are one of nature's most beautiful works of art. What other natural art does summer bring?

Travel Related

4. What are the top 5 things you hope to accomplish on this trip?
5. What is one item you packed that you should have left behind?
6. What do you miss most about home?
4. Do the locals know that you are a traveler? What makes you stick out?
7. What has been the most difficult part about this vacation?
8. What do you wish you knew before you came? What advice would you give a friend who was going to travel to this destination?
9. Write a letter to your future self about what you absolutely cannot forget about this trip.
10. What was the best thing about the entire trip?

Reading Related

11. Think about the book that you are currently reading on your own. What has been your favorite part so far and why?
12. Think about the book that you are currently reading on your own. Is there a character in the book you wish could be your friend in real life? Why or why not?
13. Think about a book that you read this summer. Write down a different ending.
14. Write a friendly letter to the author of the book you are reading. Tell them which parts of the book you liked or did not like. Ask the author at least one question about the book.

You are also welcome to keep a journal of your summer experiences and write creatively.



Be sure to edit your work for...

Date: _____

Prompt Number: _____

Handwriting practice lines consisting of multiple sets of three horizontal lines (top solid, middle dashed, bottom solid) for letter formation.

Writing Prompts

Entries should be 1-2 pages in length and edited for proper capitalization, punctuation and spelling. Please write the prompt number at the top of your journal page!

Summer Related

1. Write about one of the 5 senses related to summer. The smells of summer, the sights of summer, the sounds of summer, the tastes of summer or the touch of summer.
2. Imagine that the summer gods took summer away and the seasons went from spring to fall to winter. How would that make you feel and why?
3. Summer flowers are one of nature's most beautiful works of art. What other natural art does summer bring?

Travel Related

4. What are the top 5 things you hope to accomplish on this trip?
5. What is one item you packed that you should have left behind?
6. What do you miss most about home?
4. Do the locals know that you are a traveler? What makes you stick out?
7. What has been the most difficult part about this vacation?
8. What do you wish you knew before you came? What advice would you give a friend who was going to travel to this destination?
9. Write a letter to your future self about what you absolutely cannot forget about this trip.
10. What was the best thing about the entire trip?

Reading Related

11. Think about the book that you are currently reading on your own. What has been your favorite part so far and why?
12. Think about the book that you are currently reading on your own. Is there a character in the book you wish could be your friend in real life? Why or why not?
13. Think about a book that you read this summer. Write down a different ending.
14. Write a friendly letter to the author of the book you are reading. Tell them which parts of the book you liked or did not like. Ask the author at least one question about the book.

You are also welcome to keep a journal of your summer experiences and write creatively.



Be sure to edit your work for...

Date: _____

Prompt Number: _____

Handwriting practice lines consisting of solid top and bottom lines with a dashed midline, repeated across the page.

Writing Prompts

Entries should be 1–2 pages in length and edited for proper capitalization, punctuation and spelling. Please write the prompt number at the top of your journal page!

Summer Related

1. Write about one of the 5 senses related to summer. The smells of summer, the sights of summer, the sounds of summer, the tastes of summer or the touch of summer.
2. Imagine that the summer gods took summer away and the seasons went from spring to fall to winter. How would that make you feel and why?
3. Summer flowers are one of nature's most beautiful works of art. What other natural art does summer bring?

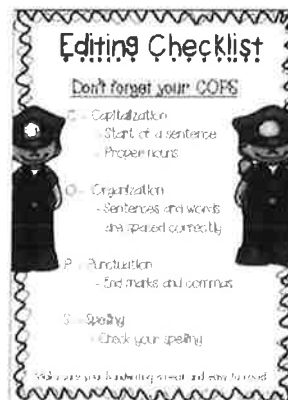
Travel Related

4. What are the top 5 things you hope to accomplish on this trip?
5. What is one item you packed that you should have left behind?
6. What do you miss most about home?
4. Do the locals know that you are a traveler? What makes you stick out?
7. What has been the most difficult part about this vacation?
8. What do you wish you knew before you came? What advice would you give a friend who was going to travel to this destination?
9. Write a letter to your future self about what you absolutely cannot forget about this trip.
10. What was the best thing about the entire trip?

Reading Related

11. Think about the book that you are currently reading on your own. What has been your favorite part so far and why?
12. Think about the book that you are currently reading on your own. Is there a character in the book you wish could be your friend in real life? Why or why not?
13. Think about a book that you read this summer. Write down a different ending.
14. Write a friendly letter to the author of the book you are reading. Tell them which parts of the book you liked or did not like. Ask the author at least one question about the book.

You are also welcome to keep a journal of your summer experiences and write creatively.



Be sure to edit your work for...

Date: _____

Prompt Number: _____

Handwriting practice lines consisting of solid top and bottom lines with a dashed midline for letter height guidance. The page contains 20 sets of these three-line guides.

Writing Prompts

Entries should be 1-2 pages in length and edited for proper capitalization, punctuation and spelling. Please write the prompt number at the top of your journal page!

Summer Related

1. Write about one of the 5 senses related to summer. The smells of summer, the sights of summer, the sounds of summer, the tastes of summer or the touch of summer.
2. Imagine that the summer gods took summer away and the seasons went from spring to fall to winter. How would that make you feel and why?
3. Summer flowers are one of nature's most beautiful works of art. What other natural art does summer bring?

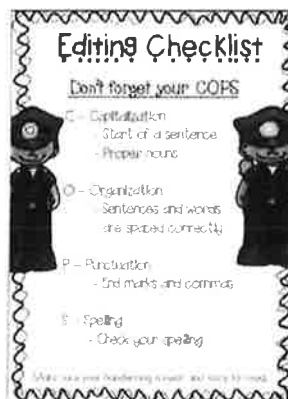
Travel Related

4. What are the top 5 things you hope to accomplish on this trip?
5. What is one item you packed that you should have left behind?
6. What do you miss most about home?
4. Do the locals know that you are a traveler? What makes you stick out?
7. What has been the most difficult part about this vacation?
8. What do you wish you knew before you came? What advice would you give a friend who was going to travel to this destination?
9. Write a letter to your future self about what you absolutely cannot forget about this trip.
10. What was the best thing about the entire trip?

Reading Related

11. Think about the book that you are currently reading on your own. What has been your favorite part so far and why?
12. Think about the book that you are currently reading on your own. Is there a character in the book you wish could be your friend in real life? Why or why not?
13. Think about a book that you read this summer. Write down a different ending.
14. Write a friendly letter to the author of the book you are reading. Tell them which parts of the book you liked or did not like. Ask the author at least one question about the book.

You are also welcome to keep a journal of your summer experiences and write creatively.



Be sure to edit your work for...

Date: _____

Prompt Number: _____

Handwriting practice lines consisting of solid top and bottom lines with a dashed midline for letter height guidance. The page contains 20 sets of these three-line guides.

Writing Prompts

Entries should be 1-2 pages in length and edited for proper capitalization, punctuation and spelling. Please write the prompt number at the top of your journal page!

Summer Related

1. Write about one of the 5 senses related to summer. The smells of summer, the sights of summer, the sounds of summer, the tastes of summer or the touch of summer.
2. Imagine that the summer gods took summer away and the seasons went from spring to fall to winter. How would that make you feel and why?
3. Summer flowers are one of nature's most beautiful works of art. What other natural art does summer bring?


Travel Related

4. What are the top 5 things you hope to accomplish on this trip?
5. What is one item you packed that you should have left behind?
6. What do you miss most about home?
4. Do the locals know that you are a traveler? What makes you stick out?
7. What has been the most difficult part about this vacation?
8. What do you wish you knew before you came? What advice would you give a friend who was going to travel to this destination?
9. Write a letter to your future self about what you absolutely cannot forget about this trip.
10. What was the best thing about the entire trip?

Reading Related

11. Think about the book that you are currently reading on your own. What has been your favorite part so far and why?
12. Think about the book that you are currently reading on your own. Is there a character in the book you wish could be your friend in real life? Why or why not?
13. Think about a book that you read this summer. Write down a different ending.
14. Write a friendly letter to the author of the book you are reading. Tell them which parts of the book you liked or did not like. Ask the author at least one question about the book.

You are also welcome to keep a journal of your summer experiences and write creatively.



Be sure to edit your work for...

Date: _____

Prompt Number: _____

Handwriting practice lines consisting of multiple sets of three horizontal lines (top solid, middle dashed, bottom solid) for letter formation.

Writing Prompts

Entries should be 1-2 pages in length and edited for proper capitalization, punctuation and spelling. Please write the prompt number at the top of your journal page!

Summer Related

1. Write about one of the 5 senses related to summer. The smells of summer, the sights of summer, the sounds of summer, the tastes of summer or the touch of summer.
2. Imagine that the summer gods took summer away and the seasons went from spring to fall to winter. How would that make you feel and why?
3. Summer flowers are one of nature's most beautiful works of art. What other natural art does summer bring?

Travel Related

4. What are the top 5 things you hope to accomplish on this trip?
5. What is one item you packed that you should have left behind?
6. What do you miss most about home?
4. Do the locals know that you are a traveler? What makes you stick out?
7. What has been the most difficult part about this vacation?
8. What do you wish you knew before you came? What advice would you give a friend who was going to travel to this destination?
9. Write a letter to your future self about what you absolutely cannot forget about this trip.
10. What was the best thing about the entire trip?

Reading Related

11. Think about the book that you are currently reading on your own. What has been your favorite part so far and why?
12. Think about the book that you are currently reading on your own. Is there a character in the book you wish could be your friend in real life? Why or why not?
13. Think about a book that you read this summer. Write down a different ending.
14. Write a friendly letter to the author of the book you are reading. Tell them which parts of the book you liked or did not like. Ask the author at least one question about the book.

You are also welcome to keep a journal of your summer experiences and write creatively.



Be sure to edit your work for...

Date: _____

Prompt Number: _____

Lined paper template with horizontal ruling lines for writing.

Writing Prompts

Entries should be 1-2 pages in length and edited for proper capitalization, punctuation and spelling. Please write the prompt number at the top of your journal page!

Summer Related

1. Write about one of the 5 senses related to summer. The smells of summer, the sights of summer, the sounds of summer, the tastes of summer or the touch of summer.
2. Imagine that the summer gods took summer away and the seasons went from spring to fall to winter. How would that make you feel and why?
3. Summer flowers are one of nature's most beautiful works of art. What other natural art does summer bring?

Travel Related

4. What are the top 5 things you hope to accomplish on this trip?
5. What is one item you packed that you should have left behind?
6. What do you miss most about home?
4. Do the locals know that you are a traveler? What makes you stick out?
7. What has been the most difficult part about this vacation?
8. What do you wish you knew before you came? What advice would you give a friend who was going to travel to this destination?
9. Write a letter to your future self about what you absolutely cannot forget about this trip.
10. What was the best thing about the entire trip?

Reading Related

11. Think about the book that you are currently reading on your own. What has been your favorite part so far and why?
12. Think about the book that you are currently reading on your own. Is there a character in the book you wish could be your friend in real life? Why or why not?
13. Think about a book that you read this summer. Write down a different ending.
14. Write a friendly letter to the author of the book you are reading. Tell them which parts of the book you liked or did not like. Ask the author at least one question about the book.

You are also welcome to keep a journal of your summer experiences and write creatively.



Be sure to edit your work for...

Date: _____

Prompt Number: _____

Handwriting practice lines consisting of solid top and bottom lines with a dashed midline. The page contains 20 sets of these three-line guides for letter formation practice.

Writing Prompts

Entries should be 1-2 pages in length and edited for proper capitalization, punctuation and spelling. Please write the prompt number at the top of your journal page!

Summer Related

1. Write about one of the 5 senses related to summer. The smells of summer, the sights of summer, the sounds of summer, the tastes of summer or the touch of summer.
2. Imagine that the summer gods took summer away and the seasons went from spring to fall to winter. How would that make you feel and why?
3. Summer flowers are one of nature's most beautiful works of art. What other natural art does summer bring?


Travel Related

4. What are the top 5 things you hope to accomplish on this trip?
5. What is one item you packed that you should have left behind?
6. What do you miss most about home?
4. Do the locals know that you are a traveler? What makes you stick out?
7. What has been the most difficult part about this vacation?
8. What do you wish you knew before you came? What advice would you give a friend who was going to travel to this destination?
9. Write a letter to your future self about what you absolutely cannot forget about this trip.
10. What was the best thing about the entire trip?

Reading Related

11. Think about the book that you are currently reading on your own. What has been your favorite part so far and why?
12. Think about the book that you are currently reading on your own. Is there a character in the book you wish could be your friend in real life? Why or why not?
13. Think about a book that you read this summer. Write down a different ending.
14. Write a friendly letter to the author of the book you are reading. Tell them which parts of the book you liked or did not like. Ask the author at least one question about the book.

You are also welcome to keep a journal of your summer experiences and write creatively.



Be sure to edit your work for...

Date: _____

Prompt Number: _____

Handwriting practice lines consisting of solid top and bottom lines with a dashed midline for letter height guidance. The page contains 20 sets of these three-line guides.

Writing Prompts

Entries should be 1-2 pages in length and edited for proper capitalization, punctuation and spelling. Please write the prompt number at the top of your journal page!

Summer Related

1. Write about one of the 5 senses related to summer. The smells of summer, the sights of summer, the sounds of summer, the tastes of summer or the touch of summer.
2. Imagine that the summer gods took summer away and the seasons went from spring to fall to winter. How would that make you feel and why?
3. Summer flowers are one of nature's most beautiful works of art. What other natural art does summer bring?


Travel Related

4. What are the top 5 things you hope to accomplish on this trip?
5. What is one item you packed that you should have left behind?
6. What do you miss most about home?
4. Do the locals know that you are a traveler? What makes you stick out?
7. What has been the most difficult part about this vacation?
8. What do you wish you knew before you came? What advice would you give a friend who was going to travel to this destination?
9. Write a letter to your future self about what you absolutely cannot forget about this trip.
10. What was the best thing about the entire trip?

Reading Related

11. Think about the book that you are currently reading on your own. What has been your favorite part so far and why?
12. Think about the book that you are currently reading on your own. Is there a character in the book you wish could be your friend in real life? Why or why not?
13. Think about a book that you read this summer. Write down a different ending.
14. Write a friendly letter to the author of the book you are reading. Tell them which parts of the book you liked or did not like. Ask the author at least one question about the book.

You are also welcome to keep a journal of your summer experiences and write creatively.



Be sure to edit your work for...

Date: _____

Prompt Number: _____

Handwriting practice lines consisting of multiple sets of three horizontal lines (top solid, middle dashed, bottom solid) for letter formation.

Week 1

Add within 1,000—Skills Practice

Name: _____

Add. Regroup if necessary.

Form A

1 324
 + 135

2 548
 + 314

3 253
 + 452

4 172
 + 127

5 811
 + 96

6 257
 + 325

7 136
 + 61

8 564
 + 261

9 136
 + 435

10 214
 + 214

11 139
 + 255

12 672
 + 121

13 188
 + 481

14 409
 + 42

15 246
 + 138

16 567
 + 321

17 131
 + 182

18 412
 + 503

19 219
 + 229

20 358
 + 436

21 443
 + 547

22 613
 + 43

23 172
 + 271

24 228
 + 355


25 539
 + 190

Column A

Applications 4

Column B

(1)



Use the graph to answer the questions.

How many words did Rachel spell correctly on Monday? _____

Rachel's friend Latasha spelled 3 times as many words correctly as Rachel did on Monday. How many words did Latasha spell correctly? _____

How many more words did Rachel spell correctly on Friday than on Monday? _____

(2)

Write a number in the blank.

1 hour = _____ minutes

(3)

Look at this number.

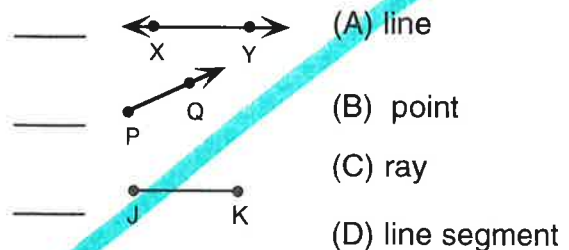
8,301

Which digit is in the hundreds place? _____

Which digit is in the thousands place? _____

(4)

Write the letter in each blank.



(5)

Write the number in each blank.

$$\begin{array}{r} 4 \text{ R}1 \\ 2 \overline{) 9} \end{array}$$

The divisor is _____.

The dividend is _____.

The quotient is _____.

(6)

Complete the sequence.

51, 45, 39, _____, _____

(7)

Solve the problem by estimating the sum or difference to the nearest hundred.

The Jiffy Food Market sells 781 cartons of plain milk each week and 623 cartons of chocolate milk. About how many fewer cartons of chocolate milk are sold than plain milk?

Column C

Applications 4

Column D

(8) Look at this number.

32.74

Which digit is in the tenths place? _____

(9) Jennifer exercises for 8 minutes every day for 6 days. How many minutes does she exercise in all?

(10) Write the fraction when:
1 is the denominator and
2 is the numerator.

4 is the numerator and
9 is the denominator.

(11) John saw the sun come up at 6:00. In 8 hours he went to a baseball game. At what time did he go to the game?

- (A) 4:00 p.m.
(B) 2:00 a.m.
(C) 4:00 a.m.
(D) 2:00 p.m.

(12) Write a number in each blank.

Of these numbers

86,103 84,256 84,239

_____ is the smallest.

_____ is the largest.

(13)

Look at this number.

213.64

Which digit is in the hundredths place? _____

(14)

Rewrite as a decimal.

(A) $\frac{8}{10} =$ _____

(B) $\frac{7}{100} =$ _____

(15)

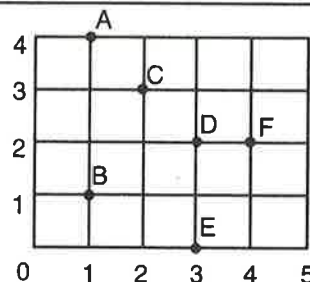


5 in.

3 in.

perimeter = _____ in.

(16)



Write the letter of the point that goes with each number pair.

_____ (3, 2)

_____ (1, 1)

Week 2

Subtract within 1,000—Skills Practice

Name: _____

Subtract. Regroup if necessary.

Form A

$$\begin{array}{r} 1 \quad 525 \\ - 175 \\ \hline \end{array}$$

$$\begin{array}{r} 2 \quad 463 \\ - 251 \\ \hline \end{array}$$

$$\begin{array}{r} 3 \quad 317 \\ - 224 \\ \hline \end{array}$$

$$\begin{array}{r} 4 \quad 692 \\ - 188 \\ \hline \end{array}$$

$$\begin{array}{r} 5 \quad 777 \\ - 543 \\ \hline \end{array}$$

$$\begin{array}{r} 6 \quad 316 \\ - 208 \\ \hline \end{array}$$

$$\begin{array}{r} 7 \quad 558 \\ - 62 \\ \hline \end{array}$$

$$\begin{array}{r} 8 \quad 634 \\ - 217 \\ \hline \end{array}$$

$$\begin{array}{r} 9 \quad 986 \\ - 410 \\ \hline \end{array}$$

$$\begin{array}{r} 10 \quad 376 \\ - 158 \\ \hline \end{array}$$

$$\begin{array}{r} 11 \quad 615 \\ - 232 \\ \hline \end{array}$$

$$\begin{array}{r} 12 \quad 363 \\ - 131 \\ \hline \end{array}$$

$$\begin{array}{r} 13 \quad 820 \\ - 450 \\ \hline \end{array}$$

$$\begin{array}{r} 14 \quad 755 \\ - 728 \\ \hline \end{array}$$

$$\begin{array}{r} 15 \quad 219 \\ - 158 \\ \hline \end{array}$$

$$\begin{array}{r} 16 \quad 199 \\ - 37 \\ \hline \end{array}$$

$$\begin{array}{r} 17 \quad 548 \\ - 514 \\ \hline \end{array}$$

$$\begin{array}{r} 18 \quad 560 \\ - 225 \\ \hline \end{array}$$

$$\begin{array}{r} 19 \quad 463 \\ - 217 \\ \hline \end{array}$$

$$\begin{array}{r} 20 \quad 689 \\ - 299 \\ \hline \end{array}$$

$$\begin{array}{r} 21 \quad 848 \\ - 364 \\ \hline \end{array}$$

$$\begin{array}{r} 22 \quad 394 \\ - 145 \\ \hline \end{array}$$

$$\begin{array}{r} 23 \quad 870 \\ - 220 \\ \hline \end{array}$$

$$\begin{array}{r} 24 \quad 285 \\ - 28 \\ \hline \end{array}$$

$$\begin{array}{r} 25 \quad 426 \\ - 193 \\ \hline \end{array}$$

Column E

Applications 4

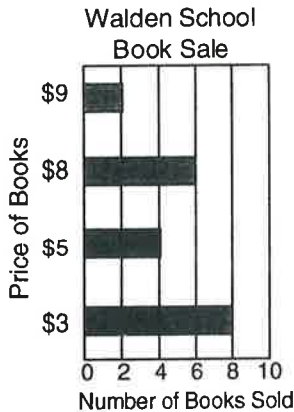
Column F

(17)

Write $>$, $<$, or $=$ in the blank.

$$\frac{3}{9} \quad \underline{\hspace{1cm}} \quad \frac{5}{9}$$

(18)



Use the bar graph to answer the questions.

How much money did Walden School make on \$8.00 books? \$ ____ .00

How many more \$8.00 books were sold than \$5.00 books? ____

How many \$3.00 books were sold? ____

(19)

About how long is a classroom?

- (A) 30 in.
(B) 30 ft
(C) 30 yd

(20)

Write the number in the blank.

five hundred eight thousand, two hundred

(21)

Crystal bought a hamster for \$5.99 and a goldfish bowl for \$2.50. The hamster's cage and food cost \$8.49. How much money did Crystal spend for her hamster and its cage and food?

(22)

Write the number in each blank.

2 tens, 3 ones, 5 hundredths = ____

8 tens, 2 ones, 7 tenths = ____

(23)


Write the time.



____ : ____

(24)

Write the area of the shaded part.



Area = ____ sq. units

Column A

Applications 4

Column B


(1)

Andrew saved \$8.64 to buy a Halloween costume. He bought a mask for \$3.25 and a cape for \$4.67. How much money did he spend for his costume?

(2)

Write the number in the blank.
twenty thousand, seven hundred fifty

(3)



What is the temperature?

_____ °C

(4)

Amanda is going to visit her aunt. Her bus leaves in the morning at 11:00. After 7 hours she arrives in time for dinner. At what time is dinner at her aunt's house?

- (A) 6:00 a.m.
 - (B) 6:00 p.m.
 - (C) 7:00 p.m.
 - (D) 7:00 a.m.
- _____

(5)

Write $>$, $<$, or $=$ in the blank.

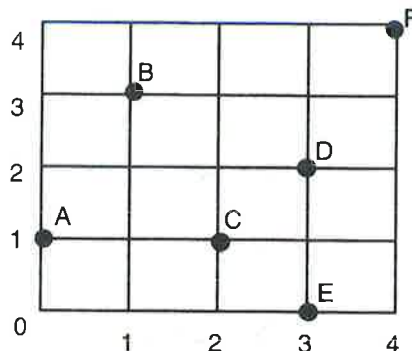
$$\frac{2}{4} \quad \underline{\hspace{1cm}} \quad \frac{1}{4}$$

(6)

Which is the best unit for weighing a teacher's desk?

- (A) pound
 - (B) ton
 - (C) ounce
- _____

(7)



Write the number pair that goes with the point.

(_____ , _____) point B

(8)

Write the number in each blank.

$$\begin{array}{r} 6 \text{ R}1 \\ 3 \overline{) 19} \end{array}$$

The remainder is _____.

The dividend is _____.

The divisor is _____.

(9)

Write the fraction when:

7 is the numerator and
2 is the denominator.

$$\frac{\square}{\square}$$

4 is the denominator and
1 is the numerator.

$$\frac{\square}{\square}$$

Week 3

Multiplication Facts—Skills Practice

Name: _____

Practice facts up to 10×10 .

Form A

1 $3 \times 5 =$ _____

2 $6 \times 7 =$ _____

3 $10 \times 10 =$ _____

4 $4 \times 9 =$ _____

5 $8 \times 6 =$ _____

6 $6 \times 4 =$ _____

7 $4 \times 2 =$ _____

8 $7 \times 7 =$ _____

9 $2 \times 3 =$ _____

10 $7 \times 8 =$ _____

11 $1 \times 1 =$ _____

12 $2 \times 8 =$ _____

13 $6 \times 6 =$ _____

14 $10 \times 5 =$ _____

15 $3 \times 7 =$ _____

16 $5 \times 8 =$ _____

17 $9 \times 9 =$ _____

18 $3 \times 3 =$ _____

19 $7 \times 4 =$ _____

20 $5 \times 2 =$ _____

21 $9 \times 5 =$ _____

22 $2 \times 2 =$ _____

23 $8 \times 3 =$ _____

24 $2 \times 6 =$ _____

25 $9 \times 3 =$ _____

26 $1 \times 7 =$ _____

27 $5 \times 4 =$ _____

28 $7 \times 5 =$ _____

29 $4 \times 4 =$ _____

30 $3 \times 6 =$ _____

31 $8 \times 8 =$ _____

32 $6 \times 9 =$ _____

33 $7 \times 2 =$ _____

34 $2 \times 9 =$ _____

35 $8 \times 9 =$ _____

36 $4 \times 3 =$ _____

37 $5 \times 5 =$ _____

38 $4 \times 8 =$ _____

39 $10 \times 1 =$ _____

40 $9 \times 7 =$ _____

41 $5 \times 6 =$ _____

42 $0 \times 8 =$ _____

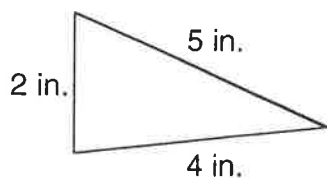


Column C

Applications 4

Column D

(10)



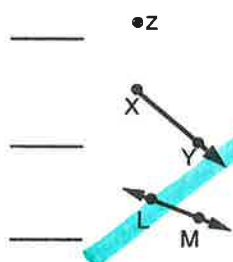
perimeter = _____ in.

- (11) Solve the problem by estimating the sum or difference to the nearest hundred.

411 people rented movies at Supertime Videos on Saturday and 532 people rented movies there on Sunday. About how many people rented movies in all?

(12)

Write the letter in each blank.



- (A) ray
(B) line segment
(C) line
(D) point

(13)

Write the number in each blank.

4 tens, 2 ones, 8 hundredths = _____

7 tens, 3 ones, 6 tenths = _____

(14)

This Week's Wheelchair Basketball Game	
Player	Points Scored
Jeff	8
David	6
Misty	7
Anna	15
Karen	9

Use the table to answer the questions.

How many more points did Anna score than David? _____

How many points did Misty score? _____

Last week, Jeff scored half as many points as this week. How many points did he score last week? _____

(15)

Put these numbers in order from the smallest to largest in value.

33,824 33,736 8,745

(16)

Complete the sequence.

67, 73, 79, _____, _____

Column E

Applications 4

Column F

(17)

The 126 children who are on a field trip to the zoo are divided among 6 groups. How many children are in each group?

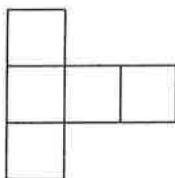
(18)

Look at the number:

147.23

Which digit is in the hundredths place? _____

(19)



Area = _____ sq. units

(20)

Write the number in each blank.

8 ten thousands, 5 hundreds, 1 ones

8 thousands, 7 hundreds, 7 tens, 6 ones

(21)

Look at the number.

54.2

Which digit is in the tenths place? _____

(22)

Write a number in the blank.

_____ days = 1 week

(23)

Rewrite as a decimal.

(A) $\frac{9}{100} =$ _____

(B) $\frac{72}{100} =$ _____

(24)

Number of Birds Observed
at Sanibel Sanctuary

Erin



Natalie



David



Ayesh



Each  stands for 4 birds.

Use the pictograph to answer the questions.

How many more birds did David see than Ayesh?

Natalie saw 4 times as many birds in her backyard as in the sanctuary. How many birds did she see in her backyard?

How many birds did Erin see?

Week 4

Division Facts—Skills Practice

Name: _____

Divide up to $25 \div 5$.

Form A

1 $16 \div 4 =$ _____

2 $12 \div 3 =$ _____

3 $6 \div 3 =$ _____

4 $8 \div 2 =$ _____

5 $20 \div 5 =$ _____

6 $9 \div 3 =$ _____

7 $15 \div 3 =$ _____

8 $4 \div 2 =$ _____

9 $0 \div 3 =$ _____

10 $10 \div 2 =$ _____

11 $15 \div 5 =$ _____

12 $4 \div 4 =$ _____

13 $12 \div 4 =$ _____

14 $6 \div 2 =$ _____

15 $10 \div 5 =$ _____

16 $8 \div 4 =$ _____

17 $20 \div 4 =$ _____

18 $5 \div 1 =$ _____

19 $15 \div 3 =$ _____

20 $12 \div 4 =$ _____

21 $16 \div 4 =$ _____

22 $10 \div 2 =$ _____

23 $25 \div 5 =$ _____

24 $0 \div 2 =$ _____

25 $20 \div 5 =$ _____

26 $15 \div 3 =$ _____

27 $8 \div 4 =$ _____

28 $12 \div 3 =$ _____

29 $4 \div 2 =$ _____

30 $9 \div 3 =$ _____

31 $20 \div 4 =$ _____

32 $6 \div 3 =$ _____

33 $12 \div 3 =$ _____

34 $1 \div 1 =$ _____

35 $25 \div 5 =$ _____

36 $15 \div 5 =$ _____

37 $10 \div 5 =$ _____

38 $8 \div 2 =$ _____

39 $12 \div 4 =$ _____

40 $16 \div 4 =$ _____

41 $6 \div 2 =$ _____

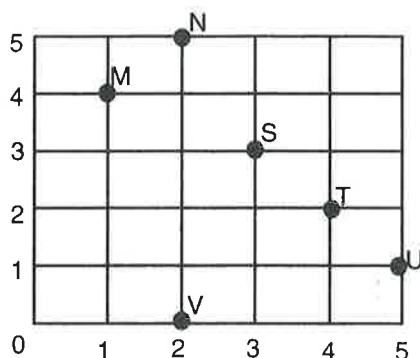
42 $20 \div 5 =$ _____

Column A

Applications 4

Column B

(1)



Write the letter of the point that goes with each number pair.

_____ (2, 5)

_____ (5, 1)

(2)

Look at this number.

275.83

Which number is in the hundredths place? _____

(3)

Write the letter in each blank.

_____ Q (A) line segment

_____ V W (B) ray

_____ S (C) point

_____ T (D) line

(4)

Write $<$, $>$, or $=$ in each blank.

65,392 _____ 65,249

7,875 _____ 32,435

(5)

Look at this number.












34,058


Which digit is in the thousands place? _____

Which digit is in the ten thousands place? _____

(6)

Number of Burned-Out Light Bulbs in Stacey's House

September	  
October	 
November	  
December	  

Each  stands for 2 light bulbs.

Use the pictograph to answer the questions.

It cost \$12.00 to replace the bulbs in September. How much was each bulb? \$_____.00

How many fewer light bulbs burned out in December than in November? _____

How many light bulbs burned out in October? _____

(7)

Lynn and Pam ran for school president. They each had to make a 25-minute speech before the whole school. Lynn got 116 votes and Pam got 94 votes. How many more votes did Lynn get than Pam?

Column C

Applications 4

Column D

(8)

Write the number in the blank.

six hundred thousand, four hundred nine

(9)

Write the number in each blank.

4 tens, 6 ones, 7 hundredths =

7 tens, 8 ones, 9 tenths =

(10)

Write the time.



____ : ____

(11)

Complete the sequence.

85, 80, 75, _____, _____

(12)

Look at this number.

4,357.98

Which digit is in the tenths place? _____

(13)

Steve is unhappy about having to do his homework in the evening at 8:00. He keeps thinking about how much fun he had at the soccer game only 5 hours earlier. At what time was the game?

(A) 3:00 a.m.

(B) 1:00 p.m.

(C) 3:00 p.m.

(D) 1:00 a.m.

(14)

Rewrite as a decimal.

(A) $\frac{5}{10} =$ _____

(B) $\frac{3}{100} =$ _____

(15)

Solve the problem by estimating the sum or difference to the nearest hundred.

628 people live in the Yorkville Apartments.
716 people live in the Cumberland Apartments.
About how many more people live in the Cumberland Apartments?

(16)

Write $>$, $<$, or $=$ in the blank.

$\frac{2}{7}$ _____ $\frac{6}{7}$

Week 5

Add within 1,000—Skills Practice

Name: _____

Add. Regroup twice if necessary.

Form A

1 507
 + 145

2 342
 + 647

3 184
 + 248

4 575
 + 272

5 186
 + 365

6 425
 + 175

7 539
 + 374

8 246
 + 37

9 112
 + 545

10 443
 + 263

11 152
 + 114

12 412
 + 432

13 253
 + 382

14 248
 + 248

15 626
 + 89

16 357
 + 368

17 404
 + 107

18 137
 + 42

19 119
 + 219

20 245
 + 254

21 188
 + 336

22 631
 + 283

23 192
 + 132

24 252
 + 146

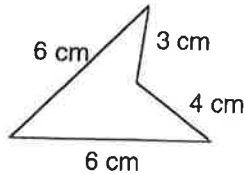
25 419
 + 382

Column E

Applications 4

Column F

(17)



perimeter = _____ cm

(22)

Jay rented a bicycle for \$3.75 and a helmet for \$1.50. How much money did he spend altogether?

(18)

Write a number in the blank.

1 day = _____ hours

(19)

Write the fraction when:

5 is the denominator and
3 is the numerator.

9 is the numerator and
6 is the denominator.

(20)

$$\begin{array}{r} 6 \text{ R}2 \\ 4 \overline{) 26} \end{array}$$

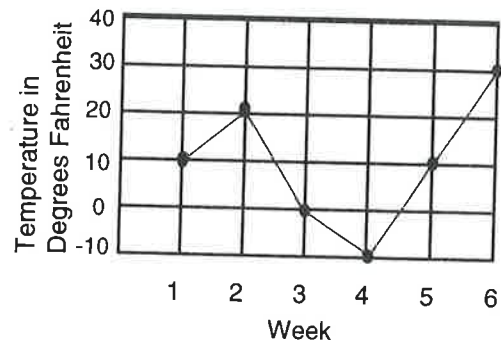
The remainder is _____.

The quotient is _____.

The dividend is _____.

(23)

Minnesota's Average
Winter Temperatures



Use the graph to answer the questions.

How much warmer, in degrees, was the average temperature in week 6 than week 3?

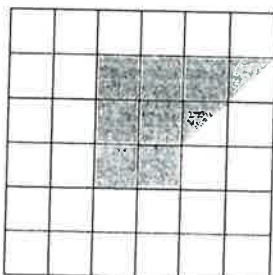
What was the average temperature in week 3?

_____ °

How much colder, in degrees, was the average temperature in week 1 than in week 6?

(21)

Write the area of the shaded part.



Area = _____ sq. units

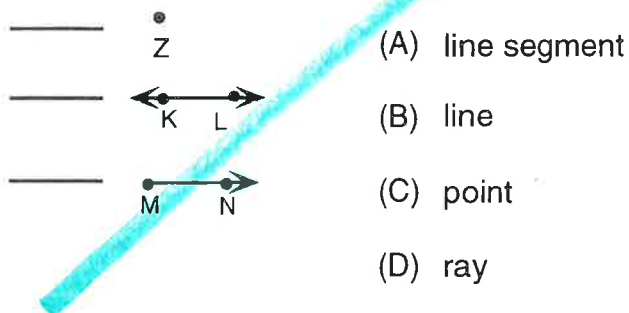
(24)

About how much water is needed to make a pitcher of lemonade?

- (A) 1 L
- (B) 10 L
- (C) 10 mL

(1)

Write the letter in each blank.



(2)

Look at this number.

356.17

Which number is in the hundredths place? _____

(3)

Solve the problem by estimating the sum or difference to the nearest ten.

Jeff wheels his wheelchair for 33 hours a week at school and for 28 hours a week in his neighborhood. About how many hours does Jeff spend each week wheeling his wheelchair?

(4)

Write the number in each blank.

3 ten thousands, 6 hundreds, 8 ones

2 thousands, 8 hundreds, 4 tens, 6 ones

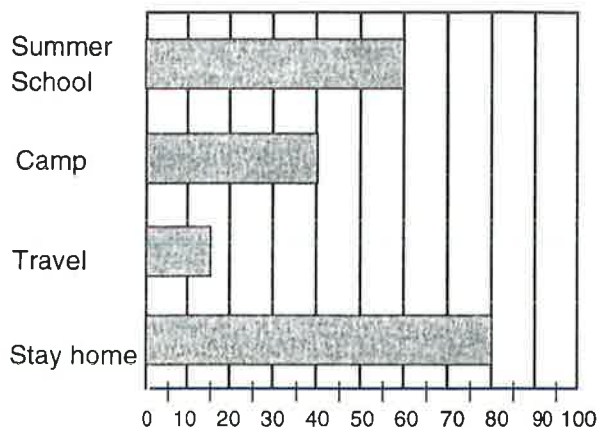
(5)

Write a number in the blank.

1 week = _____ days

(6)

Vacation Plans for Summit School Students



Number of Students

Use the bar graph to answer the questions.

The P.T.A. will buy a Summit School T-Shirt for each student who goes to summer school. Each shirt costs \$4.00. How much money will the P.T.A. spend on these T shirts? \$ _____ .00

How many students are planning to travel during the summer? _____

How many fewer students are planning to go to summer school than planning to stay home? _____

(7)

To measure the distance of the bus ride from school to your house you would use

- (A) meters
 - (B) centimeters
 - (C) kilometers
- _____

Week 6

Subtract within 1,000—Skills Practice

Name: _____

Subtract. Regroup twice if necessary.

Form A

$$\begin{array}{r} 1 \quad 228 \\ - 194 \\ \hline \end{array}$$

$$\begin{array}{r} 2 \quad 615 \\ - 306 \\ \hline \end{array}$$

$$\begin{array}{r} 3 \quad 321 \\ - 76 \\ \hline \end{array}$$

$$\begin{array}{r} 4 \quad 426 \\ - 115 \\ \hline \end{array}$$

$$\begin{array}{r} 5 \quad 846 \\ - 275 \\ \hline \end{array}$$

$$\begin{array}{r} 6 \quad 454 \\ - 127 \\ \hline \end{array}$$

$$\begin{array}{r} 7 \quad 987 \\ - 36 \\ \hline \end{array}$$

$$\begin{array}{r} 8 \quad 341 \\ - 149 \\ \hline \end{array}$$

$$\begin{array}{r} 9 \quad 510 \\ - 250 \\ \hline \end{array}$$

$$\begin{array}{r} 10 \quad 258 \\ - 236 \\ \hline \end{array}$$

$$\begin{array}{r} 11 \quad 535 \\ - 137 \\ \hline \end{array}$$

$$\begin{array}{r} 12 \quad 466 \\ - 383 \\ \hline \end{array}$$

$$\begin{array}{r} 13 \quad 652 \\ - 167 \\ \hline \end{array}$$

$$\begin{array}{r} 14 \quad 342 \\ - 132 \\ \hline \end{array}$$

$$\begin{array}{r} 15 \quad 573 \\ - 37 \\ \hline \end{array}$$

$$\begin{array}{r} 16 \quad 270 \\ - 244 \\ \hline \end{array}$$

$$\begin{array}{r} 17 \quad 751 \\ - 283 \\ \hline \end{array}$$

$$\begin{array}{r} 18 \quad 305 \\ - 103 \\ \hline \end{array}$$

$$\begin{array}{r} 19 \quad 486 \\ - 93 \\ \hline \end{array}$$

$$\begin{array}{r} 20 \quad 765 \\ - 345 \\ \hline \end{array}$$

$$\begin{array}{r} 21 \quad 588 \\ - 370 \\ \hline \end{array}$$

$$\begin{array}{r} 22 \quad 329 \\ - 152 \\ \hline \end{array}$$

$$\begin{array}{r} 23 \quad 142 \\ - 66 \\ \hline \end{array}$$

$$\begin{array}{r} 24 \quad 435 \\ - 219 \\ \hline \end{array}$$

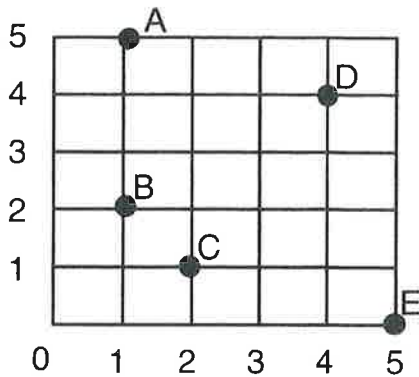
$$\begin{array}{r} 25 \quad 853 \\ - 299 \\ \hline \end{array}$$

Column C

Applications 4

Column D

(8)



Write the number pair that goes with the point.

(__, __) point A

(9)

Write the number in each blank.

$$\begin{array}{r} 2 \text{ R}3 \\ 5 \overline{)13} \end{array}$$

The quotient is _____.

The divisor is _____.

The remainder is _____.

(10)

Rewrite as a decimal.

(A) $\frac{6}{100} =$ _____

(B) $\frac{86}{100} =$ _____

(11)

There are 4 shelves for books. Each shelf holds 6 books. How many books can fit on the bookshelves?

(12)

Look at this number.

46.9

Which digit is in the tenths place? _____

(13)

Write the number in the blank.

thirty-nine thousand, twenty-five

(14)

Complete the sequence.

87, 85, 83, ____, ____

(15)

Write the fraction when:

8 is the denominator and
2 is the numerator.

$$\frac{\boxed{}}{\boxed{}}$$

7 is the numerator and
6 is the denominator.

$$\frac{\boxed{}}{\boxed{}}$$

(16)

Put these numbers in order from the smallest to largest in value.

67,418 64,389 67,453

(17)

Write >, <, or = in the blank.

$$\frac{4}{9} \quad \quad \quad \frac{5}{9}$$

Column E

Applications 4

Column F

- (18) Brenda falls asleep at 10:00 at night. Four hours later she wakes up when her sister comes home from a party. At what time does her sister get home?

- (A) 2:00 a.m.
(B) 6:00 p.m.
(C) 2:00 p.m.
(D) 6:00 a.m.

- (19) Video Rentals

Day	Number Rented
Monday	23
Tuesday	32
Wednesday	64
Thursday	36
Friday	72
Saturday	95

Use the table to answer the questions.


How many videos were rented on Thursday? _____

On Monday each video cost \$3.00. How much money did the store make on Monday altogether? \$ _____ .00

How many more videos were rented on Saturday than on Wednesday? _____

- (20)


7 cm



7 cm

perimeter = _____ cm

- (21)



What is the temperature?

°F

- (22)



Area = _____ sq. units

- (23)

Write the number in each blank.

4 tens, 8 ones, 65 hundredths =

9 tens, 6 tenths =

- (24)

This year the first grade earned \$9.31 selling cookies and \$6.27 selling candy. Last year they earned \$7.28 selling cookies. How much more did the first grade earn selling cookies this year than last year?

Week 7

Multiplication Facts—Skills Practice

Name: _____

Practice more facts up to 10×10 .

Form A

1 5
× 5

2 8
× 3

3 6
× 9

4 2
× 7

5 3
× 6

6 7
× 4

7 9
× 7

8 8
× 6

9 6
× 4

10 3
× 3

11 9
× 8

12 5
× 3

13 4
× 5

14 7
× 7

15 5
× 6

16 9
× 3

17 4
× 4

18 6
× 10

19 9
× 5

20 6
× 7

21 2
× 8

22 0
× 0

23 4
× 9

24 8
× 8

25 6
× 6

26 4
× 8

27 3
× 7

28 10
× 10

29 8
× 5

30 9
× 2

31 2
× 6

32 9
× 9

33 1
× 9

34 7
× 8

35 4
× 3

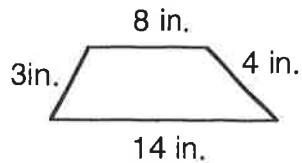
36 7
× 5

Column A

Applications 4

Column B

(1)



perimeter = _____ in.

(2)

Write a number in the blank.

180 minutes = _____ hours

(3)

Rewrite as a decimal.

$$\frac{7}{10}$$

$$\frac{8}{100}$$

(4)

Look at this number.

6,784.91

Which digit is in the tenths place? _____

(5)

Southgate Mall is 15 miles from town.
There are 36 stores upstairs and 27 stores downstairs. How many stores are there in the mall altogether?

(6)

Write $>$, $<$, or $=$ in the blank.

$$\frac{9}{10} \quad \underline{\hspace{1cm}} \quad \frac{9}{10}$$

(7)

Which is the best unit for weighing a box of cereal?

- (A) milligrams
- (B) grams
- (C) kilograms

(8)

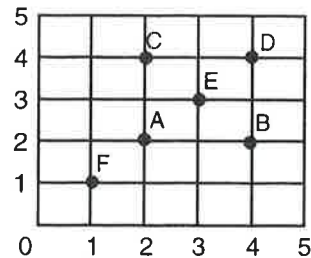
Daniel has \$7.16. If he buys a \$3.49 toy, how much will he have left?

(9)

Complete the sequence.

23, 26, 29, _____, _____

(10)



Write the letter of the point that goes with each number pair.

_____ (2, 4)

_____ (4, 2)

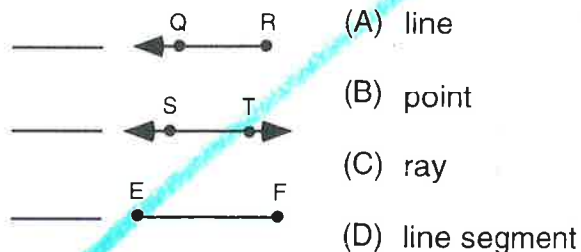
Column C

Applications 4

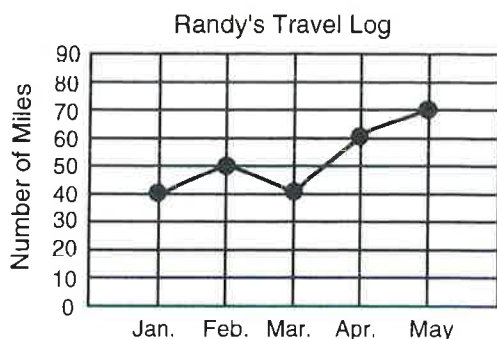
Column D

(11)

Write the letter in each blank.



(12)



Use the graph to answer the questions.

How many miles did Randy travel altogether? _____

How many fewer miles did Randy travel in January than in April? _____

How many miles did Randy travel in March? _____

(13)

Write a number in each blank.

Of these numbers,

33,763 8,745 33,824

_____ is the largest.


_____ is the smallest.

(14)

Write the number in the blank.

four hundred thousand, twenty-eight

(15)



Area = _____ sq. units

(16)

Write the letter in the blank.

Pat programmed his VCR to record in 4 hours. It is 5:00 in the evening now. At what time will the VCR begin recording?

(A) 1:00 a.m.

(B) 1:00 p.m.

(C) 9:00 a.m.

(D) 9:00 p.m.

(17)

Write the number in each blank.

3 tens, 2 tenths =

1 tens, 7 ones, 46 hundredths =

Week 8

Division Facts—Skills Practice

Name: _____

Divide up to $100 \div 10$.

Form A

1 $48 \div 6 =$ _____

2 $27 \div 3 =$ _____

3 $16 \div 8 =$ _____

4 $25 \div 5 =$ _____

5 $14 \div 2 =$ _____

6 $72 \div 8 =$ _____

7 $18 \div 6 =$ _____

8 $56 \div 7 =$ _____

9 $6 \div 2 =$ _____

10 $28 \div 4 =$ _____

11 $7 \div 1 =$ _____

12 $45 \div 9 =$ _____

13 $64 \div 8 =$ _____

14 $15 \div 5 =$ _____

15 $20 \div 2 =$ _____

16 $4 \div 2 =$ _____

17 $24 \div 3 =$ _____

18 $63 \div 7 =$ _____

19 $12 \div 3 =$ _____

20 $16 \div 4 =$ _____

21 $90 \div 10 =$ _____

22 $81 \div 9 =$ _____

23 $36 \div 4 =$ _____

24 $12 \div 2 =$ _____

25 $40 \div 8 =$ _____

26 $9 \div 3 =$ _____

27 $49 \div 7 =$ _____

28 $30 \div 6 =$ _____

29 $54 \div 9 =$ _____

30 $1 \div 1 =$ _____

31 $21 \div 7 =$ _____

32 $8 \div 2 =$ _____

33 $35 \div 5 =$ _____

34 $10 \div 10 =$ _____

35 $18 \div 9 =$ _____

36 $36 \div 6 =$ _____

37 $10 \div 2 =$ _____

38 $20 \div 4 =$ _____

39 $42 \div 7 =$ _____

40 $32 \div 8 =$ _____

41 $50 \div 5 =$ _____

42 $24 \div 6 =$ _____

Column E

Applications 4

Column F

(18)

Write the number in each blank.

$$\begin{array}{r} 7 \text{ R}5 \\ 6 \overline{) 47} \end{array}$$

The dividend is _____.

The remainder is _____.

The quotient is _____.

(19)

Write the fraction when:

6 is the numerator and
5 is the denominator.

9 is the denominator and
3 is the numerator.

(20)

Look at this number.

578.16

Which digit is in the hundredths place? _____

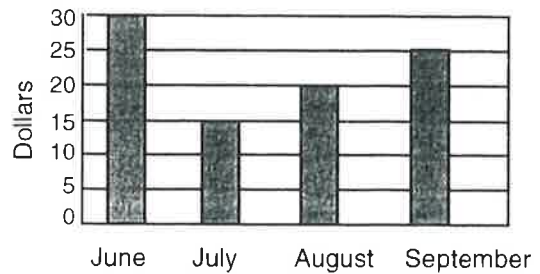
(21)

Solve the problem by estimating the sum or difference to the nearest ten.

In his stamp collection Jamar has 21 German stamps and 68 Dutch stamps. About how many fewer German stamps does he have than Dutch stamps?

(22)

Teresa's Babysitting Earnings



Use the bar graph to answer the questions.

Teresa babysat for 5 hours in July.

How much does she charge for each hour? \$ _____.

How much money did Teresa earn altogether in the four months?

\$ _____.

How much money did Teresa earn in August?

\$ _____.

(23)

Look at this number.

7,954

Which digit is in the thousands place? _____

Which digit is in the hundreds place? _____

(24)

Write the time.



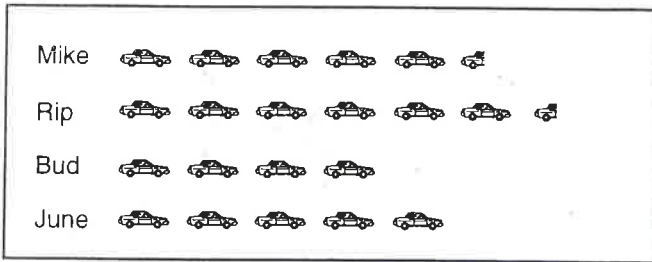
_____ : _____

Column A

Applications 4

Column B

(1) Cars Sold Last Month at Con's Dealer



Each  stands for 2 cars.

Use the pictograph to answer the questions.

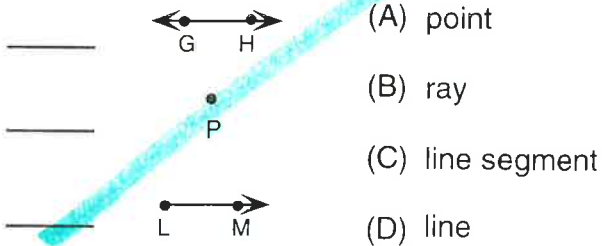
How many cars were sold altogether last month? _____

Bud worked at Con's Dealer 4 days last month. He sold the same number of cars each day. How many cars did he sell each day he worked? _____

How many cars did Rip sell last month? _____

(2)

Write the letter in each blank.



(3)

Write the number in the blank.

six hundred fourteen thousand, twelve


(4)

Look at this number.

52.7

Which digit is in the tenths place? _____

(5)



What is the temperature?

_____ °C

(6)

Write the fraction when:

3 is the denominator and 6 is the numerator.

5 is the numerator and 8 is the denominator.

(7)

Katy's grandmother has 28 old coins. She wants to give an equal number to each of her 7 grandchildren. How many coins will she give to each grandchild?

Week 9

Subtract within 1,000—Skills Practice

Name: _____

Subtract across zeros.

Form A

1 302
 - 143

2 505
 - 228

3 400
 - 222

4 180
 - 126

5 600
 - 385

6 704
 - 372

7 300
 - 114

8 508
 - 459

9 800
 - 65

10 206
 - 108

11 200
 - 112

12 803
 - 44

13 500
 - 125

14 301
 - 142

15 450
 - 226

16 701
 - 78

17 160
 - 116

18 302
 - 94

19 900
 - 470

20 200
 - 122

21 600
 - 305

22 404
 - 266

23 300
 - 137

24 707
 - 378

25 209
 - 129

Column C

Applications 4

Column D

- (8) About how much water fills a bathroom sink?

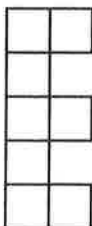
- (A) 1 qt
(B) 1 pt
(C) 1 gal

- (9) Look at this number.

426.37

Which digit is in the hundredths place? _____

- (10)



Area = _____ sq. units

- (11)

Write the number in each blank.

2 ten thousands, 3 hundreds, 6 tens

3 thousands, 9 hundreds, 4 tens, 8 ones

- (12)

Complete the sequence.

37, 47, 57, _____, _____

- (13)

Write the letter in the blank.

At 8:00 in the morning Joe took his car to be fixed. The mechanic told him to come back in 6 hours. At what time will Joe pick up his car?

- (A) 6:00 p.m.
(B) 2:00 p.m.
(C) 6:00 a.m.
(D) 2:00 a.m.

- (14)

Solve the problem by estimating the sum or difference to the nearest ten.

Shane has 32 matchbox cars and Greg has 37. About how many cars do they have altogether?

- (15)

Write the number in each blank.

$$\begin{array}{r} 4 \text{ R}5 \\ 7 \overline{) 33} \end{array}$$

The remainder is _____.

The quotient is _____.

The divisor is _____.

- (16)

Put these numbers in order from smallest to largest in value.

86,531 79,676 79,932

Column E

Applications 4

Column F

(17)

Write the number in each blank.

5 tens, 4 ones, 7 hundredths =

7 tens, 6 ones, 8 tenths =

(18)

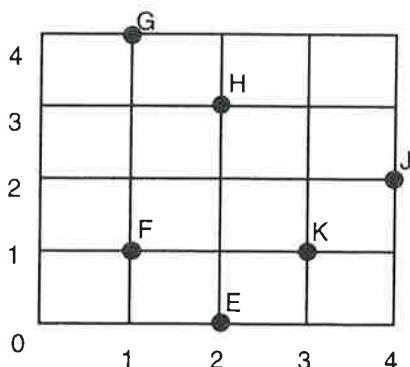
Write $>$, $<$, or $=$ in the blank.

$$\frac{2}{3} \quad \underline{\hspace{1cm}} \quad \frac{1}{3}$$

(19)

Alvin wants to buy a model plane that costs \$9.75. He has saved \$4.50 from his allowance. He earned \$3.75 doing chores. How much money does Alvin have so far?

(20)



Write the number pair that goes with the point.

(_____ , _____) point E

(21)

Rewrite as a decimal.

$$\frac{1}{100} \quad \underline{\hspace{1cm}}$$

$$\frac{77}{100} \quad \underline{\hspace{1cm}}$$

(22)

Write a number in the blank.

48 hours = _____ days

(23)

Girl Scout Cookies Sold
in February

Person	Number of Boxes Sold
Nancy	150
Melissa	225
Maria	170

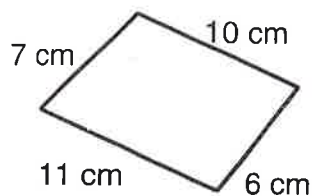
Use the table to answer the questions.

How many boxes did Melissa sell? _____

How many boxes did the three girls sell in all? _____

How many more boxes did Maria sell than Nancy? _____

(24)



perimeter = _____ cm

Week 10

Multiply by Tens—Skills Practice

Name: _____

Use place value to multiply.

Form A

1 $7 \times 30 =$ _____

2 $40 \times 4 =$ _____

3 $6 \times 80 =$ _____

4 $4 \times 60 =$ _____

5 $90 \times 3 =$ _____

6 $20 \times 3 =$ _____

7 $5 \times 80 =$ _____

8 $6 \times 20 =$ _____

9 $60 \times 9 =$ _____

10 $40 \times 8 =$ _____

11 $2 \times 20 =$ _____

12 $50 \times 2 =$ _____

13 $60 \times 6 =$ _____

14 $9 \times 20 =$ _____

15 $6 \times 80 =$ _____

16 $7 \times 90 =$ _____

17 $3 \times 40 =$ _____

18 $70 \times 5 =$ _____

19 $50 \times 4 =$ _____

20 $70 \times 0 =$ _____

21 $3 \times 80 =$ _____

22 $80 \times 8 =$ _____

23 $6 \times 50 =$ _____

24 $9 \times 90 =$ _____

25 $5 \times 30 =$ _____

26 $70 \times 2 =$ _____

27 $60 \times 5 =$ _____

28 $90 \times 8 =$ _____

29 $6 \times 30 =$ _____

30 $9 \times 40 =$ _____

31 $4 \times 70 =$ _____

32 $7 \times 70 =$ _____

33 $20 \times 8 =$ _____

34 $30 \times 3 =$ _____

35 $9 \times 60 =$ _____

36 $90 \times 5 =$ _____

37 $50 \times 8 =$ _____

38 $2 \times 40 =$ _____

39 $8 \times 70 =$ _____

40 $9 \times 80 =$ _____

41 $50 \times 5 =$ _____

42 $7 \times 60 =$ _____

Column A

Applications 4

Column B

(1)

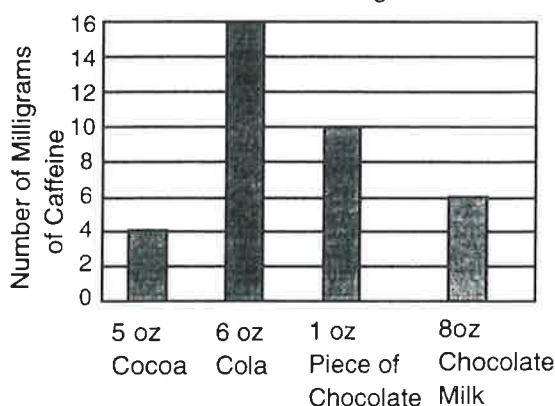
Rewrite as a decimal.

$$\frac{28}{100} = \underline{\hspace{2cm}}$$

$$\frac{3}{10} = \underline{\hspace{2cm}}$$

(2)

How Much Caffeine Are You Consuming?



Use the bar graph to answer the questions.

Carol and Holley are sharing a cola evenly. How many milligrams of caffeine is each of them drinking? _____

How many more milligrams of caffeine are in 8 oz of chocolate milk than in 5 oz of cocoa? _____

How many milligrams of caffeine are in a 1-oz piece of chocolate? _____

(3)

Edward earned \$8.14 and Carlos earned \$9.23. How much more money did Carlos earn than Edward?

(4)

Complete the sequence.

62, 59, 56, _____, _____

(5)

About how long is a spoon?

- (A) 5 in.
(B) 5 yd
(C) 5 ft
- _____

(6)

Look at this number.

638.57

Which digit is in the hundredths place? _____

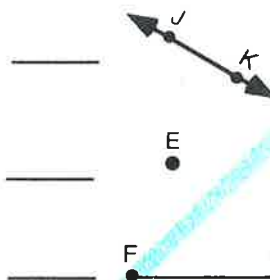
(7)

Write $>$, $<$, or $=$ in the blank.

$$\frac{4}{10} \underline{\hspace{1cm}} \frac{3}{10}$$

(8)

Write the letter in each blank.



- (A) ray
(B) line segment
(C) line
(D) point

Column C

Applications 4

Column D

(9)

Write a number in the blank.

7 days = _____ week

(10)

Look at this number.

790.35

Which digit is in the tenths place? _____

(11)

Solve the problem by estimating the sum or difference to the nearest ten.

Mark has 42 marbles and Anthony has 29 . About how many marbles do they have altogether?

(12)

Look at this number.

14,702

Which digit is in the hundreds place? _____

Which digit is in the thousands place? _____

(13)

Write the number in the blank.

seventy-one thousand, sixty-one

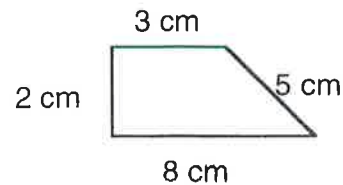
(14)

Write $<$, $>$, or $=$ in each blank.

36,427 _____ 36,427

66,631 _____ 66,379

(15)



perimeter = _____ cm

(16)

Write the letter in the blank.

Sally ate an apple at 1:00 in the afternoon. She was hungry again 3 hours later. At what time did Sally get hungry again?

(A) 4:00 a.m.

(B) 10:00 a.m.

(C) 4:00 p.m.

(D) 10:00 p.m.

(17)

Write the fraction when:

10 is the numerator and
2 is the denominator.

9 is the denominator and
6 is the numerator.
