

I have a cow. The cow is fat. I have a cat. The cat is fat. How can I take the cow and the cat with me? Can the cow sit on the cat? No. (102)

We have hats. I can hold the hats. The cow can hold the hats. An old man can hold the hats. Can a fat rat hold the hats? (103)

We save rocks. We save sacks and sacks of rocks. We save lots and lot of rocks. We have lots of little rocks. We sit on rocks. And we give an old man lots of rocks. (104)

RF.K.1
RF.K.3

RF.K.4

6

The old man said, "I can shave a cat." So he did. The old man said, "I can shave a cow." So he did. The old man said, "I can shave a rock." Did he shave a rock? No. (105)

He said, "Give me a hat or a sock." So she gave him a sock for his nose. He said, "I need socks on the feet, not on the nose." So she gave him socks for his feet. (106)

The old man was cold. He did not have a hat or a coat or socks. So he got a goat with lots of hats and coats and socks. Now the old man is not cold and the goat is not cold.(107)

R.F.K.1
R.F.K.3

R.F.K.4

7



Consonants: J

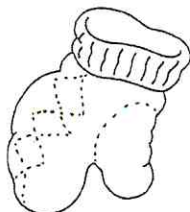
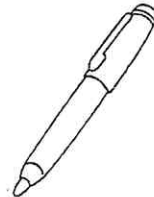
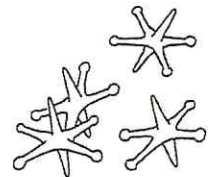




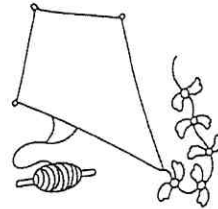
Name _____

The sound at the beginning of **jet** is spelled by the letter **j**. R.F.K. 2d

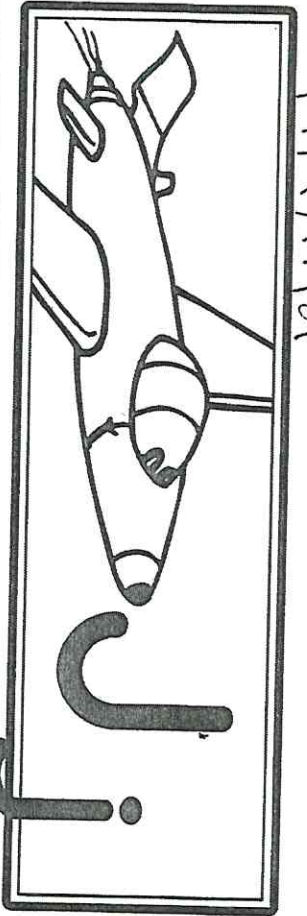


jet

Name the pictures. Circle each picture whose name begins with the sound of **j**.



R.F.K.1d



j j j j j

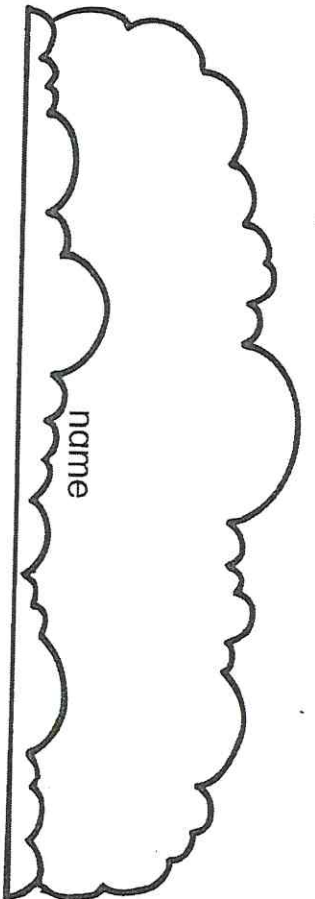
j

j j j j j

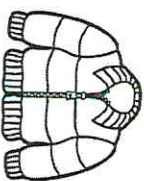
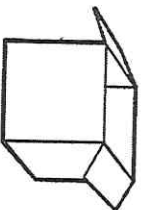
j

R.F.K.1d

R.F.K.2d



Color the ones that start like



Circle each j.

U j P j L
 j k j j j


Circle each j.

g a j j j
 i j i j j

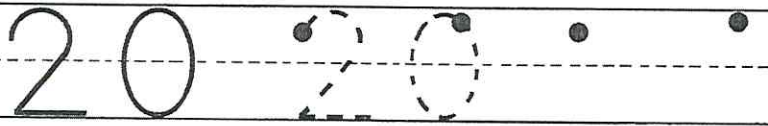
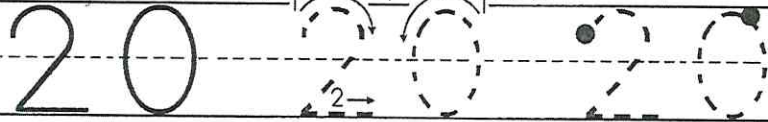
Name _____

n.c.c.1.5
Count and color / contar y colorear

twenty




Trace & Write. Trazar y escribir



(escribir)
Write the missing numbers.

before	20	after
--------	----	-------

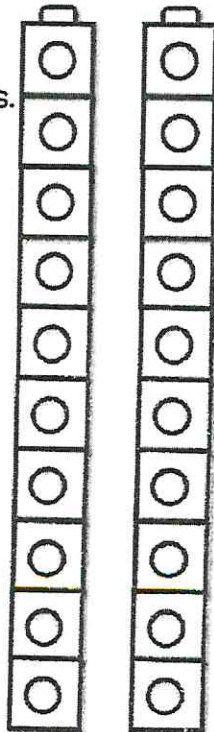
Draw 20 circles in the ten frames.
(dibujar 20 círculos)



Color
20 blocks.



K.NBT.1



K.O.A.1

Write the missing numbers.
(escribe los números que faltan)

$$10 + \square = 20$$

$$10 + 10 = \square$$

Name _____

Date _____



Can you count the Mr Men and write how many there are in each box?

Color.

(Mostrar y colorear. Luego escriba el numero correcto en el cuadro)

	<input type="text"/>
--	----------------------

	<input type="text"/>
--	----------------------

	<input type="text"/>
--	----------------------

	<input type="text"/>
--	----------------------

	<input type="text"/>
--	----------------------

	<input type="text"/>
--	----------------------

	<input type="text"/>
--	----------------------

	<input type="text"/>
--	----------------------

	<input type="text"/>
--	----------------------

	<input type="text"/>
--	----------------------

Self-assess your work today.

Colour in one of the faces.



Teacher assessment of your work

Can you count up to 20 objects? Can you count at least 20 objects and know that the last number you say is how many there are altogether?

Name _____

RFK, 2a


1. Initial Consonants



_eg



_eg



w_g

2. Short Vowels



w_g

3. Final Consonants



fo_



fo_

L.K.2


4. Multi-meaning Words





and

5. Number Words



4

RFK3

6. Reading Comprehension



I am jogging.
I am cutting it.
I am in a net.

7. Rhyming



RFK.2

I am a pig with a _____.

L.K.4b
L.K.5b


8. Word Endings

lap



He _____ up the milk.


9. Opposites



This is _____, not down.

RF.K, 2a

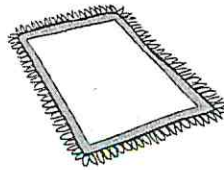
10. Word Families



bug












Name _____


1. Initial Consonants



_ a g



_ a g



b _ d

2. Short Vowels



b _ d

3. Final Consonants



po _



po _

R.F.K.2a


4. Multi-meaning Words





and

5. Number Words



5

L.K.2

6. Reading Comprehension



Spot is sitting.
Spot is digging.
Spot is napping.

7. Rhyming



R.F.K.2

I am a cat in a _____.

R.F.K.3

8. Word Endings

tap



I sat and _____ on it.

9. Opposites



I do not walk. I _____.

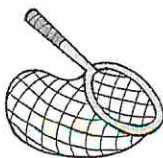
L.K.4b
L.K.5b

10. Word Families



pet











R.F.K.2a

Drops In The Bucket - Math Level A

Number 4

Name _____

Score _____

K.C.C.4
K.C.C.2
K.M.D.1

1. Words and Concepts

shortest



Greg



Al



Jill



Sam

2. Skip Counting Patterns

4

5

6


8

11

3. Money

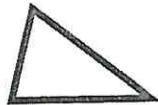


4. Time

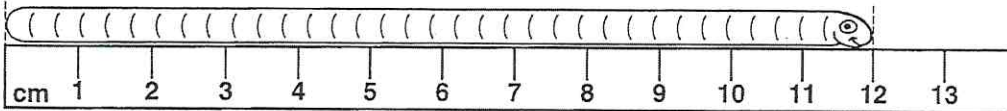


_____ o'clock

5. Geometry



6. Measurement



_____ cm

7. Addition Stories and Facts



+



_____ + _____ = _____

There are _____ cookies in all.

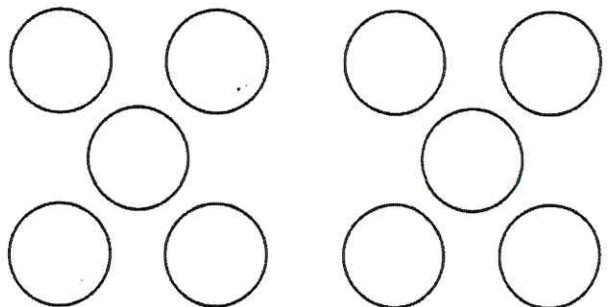
8. Before and After

_____ 2 _____

10. Counting, Place Value, or Temperature

K.C.C.3

Color 7.



9. Subtraction Stories and Facts



_____ - _____ = _____

There are _____ butterflies left.

K.M.D.1

K.O.A.3

Drops In The Bucket - Math Level A

Number 5

Name _____

Score _____

K.C.C.4.1 K.C.C.4.2 K.C.C.4.3 K.M.D.1 K.M.D.1 K.M.D.3

1. Words and Concepts

biggest



2. Skip Counting Patterns

2	3	___	5	___	7	___	9	___	11
---	---	-----	---	-----	---	-----	---	-----	----

3. Money




4. Time

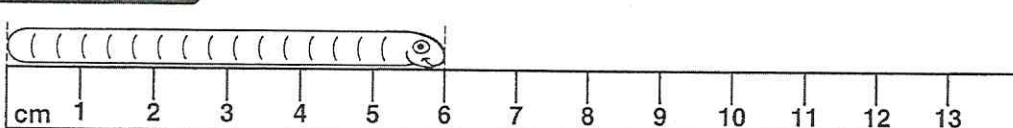


_____ o'clock

5. Geometry

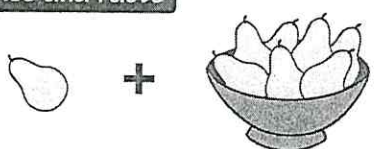


6. Measurement



_____ cm

7. Addition Stories and Facts



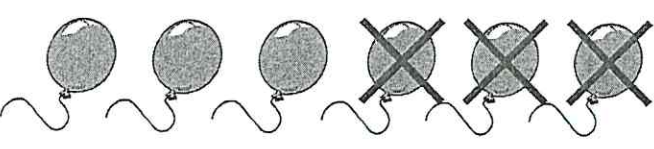
___ + ___ = ___

There are ___ pears in all.

8. Before and After

___ 6 ___

9. Subtraction Stories and Facts



___ - ___ = ___

There are ___ balloons left.

10. Counting, Place Value, or Temperature k.c.c.3

Color 3.

